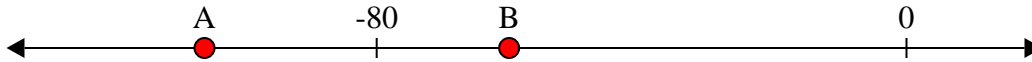





Risolvi ogni problema.


1) Quale lettera indica correttamente -60?




2) Quale lettera indica correttamente -114?



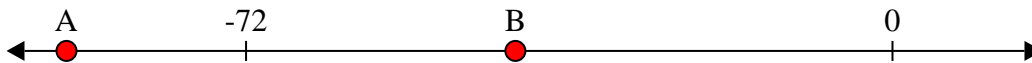
3) Quale lettera indica correttamente -101?




4) Quale lettera indica correttamente -34?




5) Quale lettera indica correttamente -42?




6) Quale lettera indica correttamente -83?




7) Quale lettera indica correttamente -31?




8) Quale lettera indica correttamente -120?



9) Quale lettera indica correttamente -86?



10) Quale lettera indica correttamente -92?



Risposte

1. _____

2. _____

3. _____

4. _____

5. _____

6. _____

7. _____

8. _____

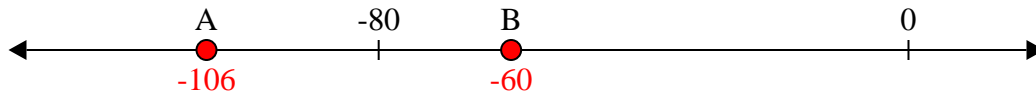
9. _____

10. _____

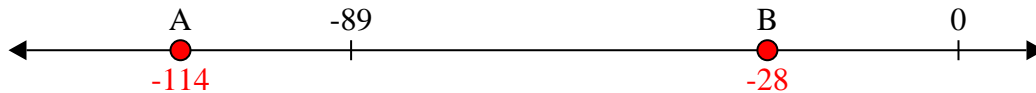


Risolvi ogni problema.


1) Quale lettera indica correttamente -60?




2) Quale lettera indica correttamente -114?



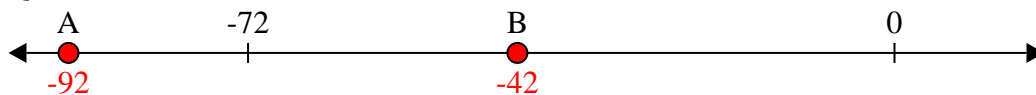
3) Quale lettera indica correttamente -101?




4) Quale lettera indica correttamente -34?




5) Quale lettera indica correttamente -42?




6) Quale lettera indica correttamente -83?




7) Quale lettera indica correttamente -31?



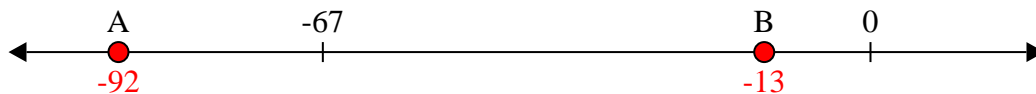
8) Quale lettera indica correttamente -120?



9) Quale lettera indica correttamente -86?



10) Quale lettera indica correttamente -92?



Risposte

1. **B**

2. **A**

3. **A**

4. **B**

5. **B**

6. **A**

7. **B**

8. **A**


9. **A**

10. **A**




Risolvi ogni problema.

1) Quale lettera indica correttamente -91?




2) Quale lettera indica correttamente -111?




3) Quale lettera indica correttamente -114?




4) Quale lettera indica correttamente -43?



5) Quale lettera indica correttamente -80?




6) Quale lettera indica correttamente -27?




7) Quale lettera indica correttamente -13?



8) Quale lettera indica correttamente -121?



9) Quale lettera indica correttamente -37?



10) Quale lettera indica correttamente -116?



Risposte

1. _____

2. _____

3. _____

4. _____

5. _____

6. _____

7. _____

8. _____

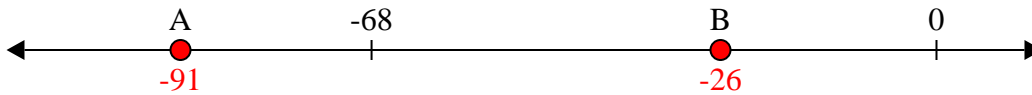
9. _____

10. _____

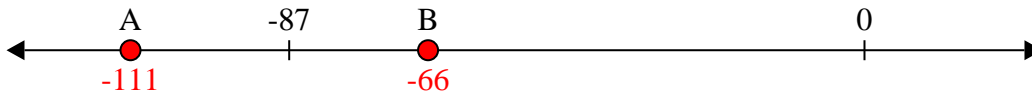


Risolvi ogni problema.


1) Quale lettera indica correttamente -91?




2) Quale lettera indica correttamente -111?



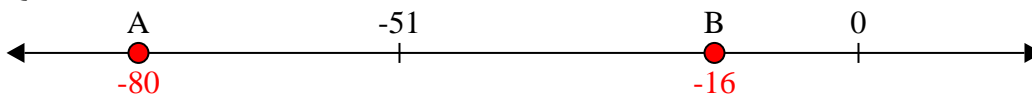
3) Quale lettera indica correttamente -114?




4) Quale lettera indica correttamente -43?




5) Quale lettera indica correttamente -80?




6) Quale lettera indica correttamente -27?



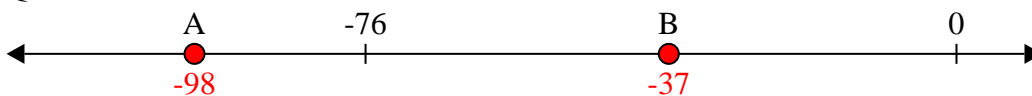
7) Quale lettera indica correttamente -13?



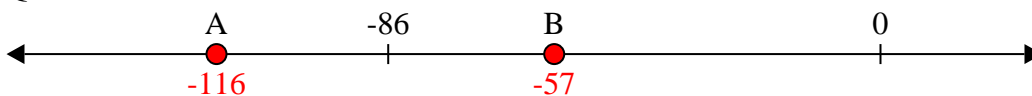
8) Quale lettera indica correttamente -121?



9) Quale lettera indica correttamente -37?



10) Quale lettera indica correttamente -116?



Risposte

1. **A**

2. **A**

3. **A**

4. **B**

5. **A**

6. **B**

7. **B**

8. **A**

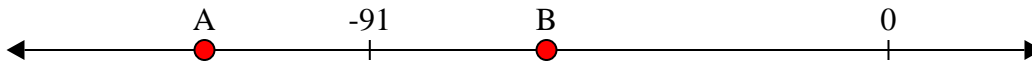
9. **B**

10. **A**




Risolvi ogni problema.


1) Quale lettera indica correttamente -60?




2) Quale lettera indica correttamente -49?




3) Quale lettera indica correttamente -43?




4) Quale lettera indica correttamente -15?



5) Quale lettera indica correttamente -116?




6) Quale lettera indica correttamente -19?




7) Quale lettera indica correttamente -107?




8) Quale lettera indica correttamente -80?



9) Quale lettera indica correttamente -120?



10) Quale lettera indica correttamente -110?



Risposte

1. _____

2. _____

3. _____

4. _____

5. _____

6. _____

7. _____

8. _____

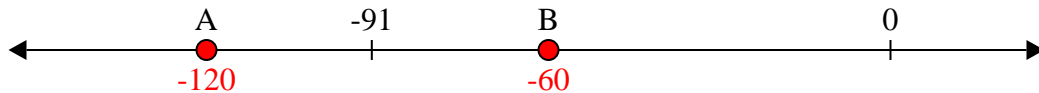
9. _____

10. _____

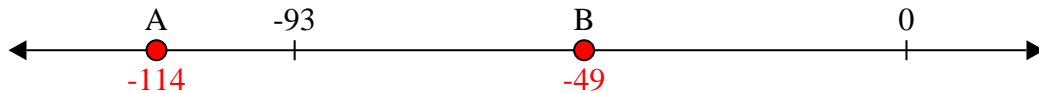


Risolvi ogni problema.


1) Quale lettera indica correttamente -60?




2) Quale lettera indica correttamente -49?




3) Quale lettera indica correttamente -43?




4) Quale lettera indica correttamente -15?




5) Quale lettera indica correttamente -116?




6) Quale lettera indica correttamente -19?




7) Quale lettera indica correttamente -107?



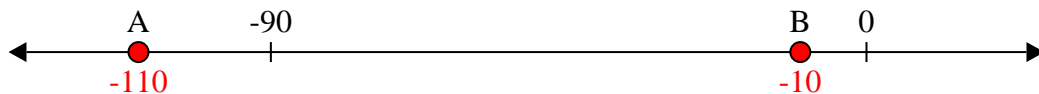
8) Quale lettera indica correttamente -80?



9) Quale lettera indica correttamente -120?



10) Quale lettera indica correttamente -110?



Risposte

1. **B**

2. **B**

3. **B**

4. **B**

5. **A**

6. **B**

7. **A**

8. **A**


9. **A**

10. **A**



Risolvi ogni problema.

1) Quale lettera indica correttamente -11?




2) Quale lettera indica correttamente -21?



3) Quale lettera indica correttamente -117?



4) Quale lettera indica correttamente -122?



5) Quale lettera indica correttamente -31?




6) Quale lettera indica correttamente -46?




7) Quale lettera indica correttamente -15?




8) Quale lettera indica correttamente -97?



9) Quale lettera indica correttamente -84?



10) Quale lettera indica correttamente -28?



Risposte

1. _____

2. _____

3. _____

4. _____

5. _____

6. _____

7. _____

8. _____

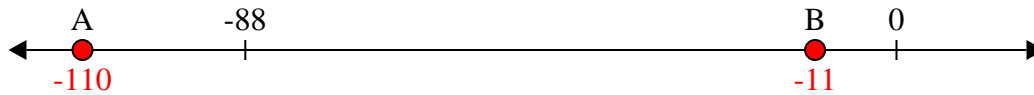
9. _____

10. _____

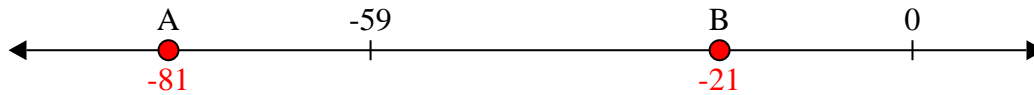


Risolvi ogni problema.

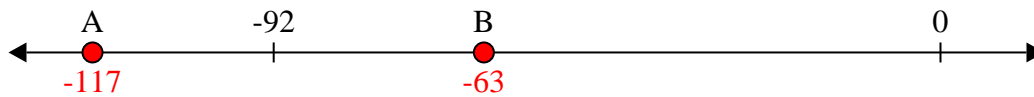
1) Quale lettera indica correttamente -11?




2) Quale lettera indica correttamente -21?



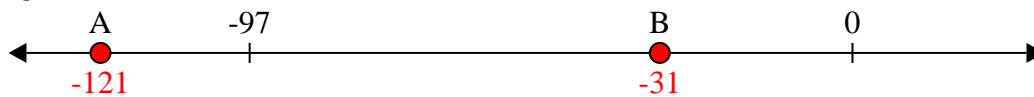
3) Quale lettera indica correttamente -117?



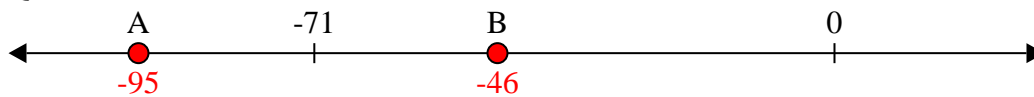
4) Quale lettera indica correttamente -122?




5) Quale lettera indica correttamente -31?



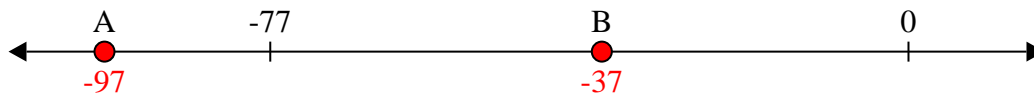
6) Quale lettera indica correttamente -46?



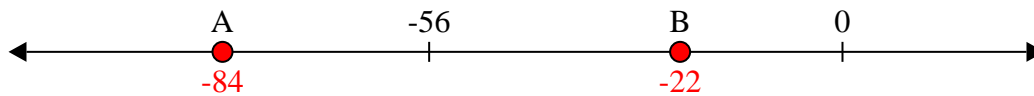
7) Quale lettera indica correttamente -15?



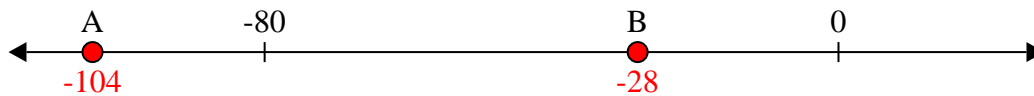
8) Quale lettera indica correttamente -97?



9) Quale lettera indica correttamente -84?



10) Quale lettera indica correttamente -28?



Risposte

1. **B**

2. **B**

3. **A**

4. **A**

5. **B**

6. **B**

7. **B**

8. **A**


9. **A**

10. **B**

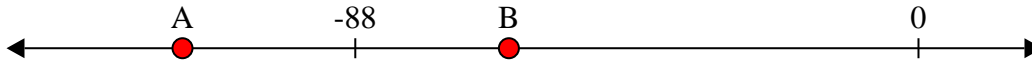


Risolvi ogni problema.


1) Quale lettera indica correttamente -15?




2) Quale lettera indica correttamente -64?




3) Quale lettera indica correttamente -50?




4) Quale lettera indica correttamente -110?




5) Quale lettera indica correttamente -79?



6) Quale lettera indica correttamente -76?



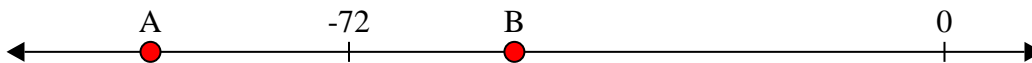
7) Quale lettera indica correttamente -96?




8) Quale lettera indica correttamente -110?



9) Quale lettera indica correttamente -52?



10) Quale lettera indica correttamente -21?



Risposte

1. _____

2. _____

3. _____

4. _____

5. _____

6. _____

7. _____

8. _____

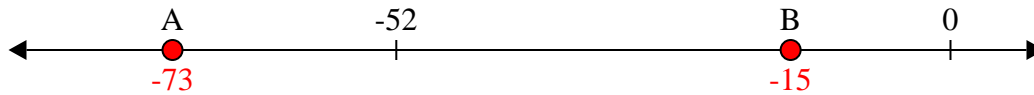
9. _____

10. _____

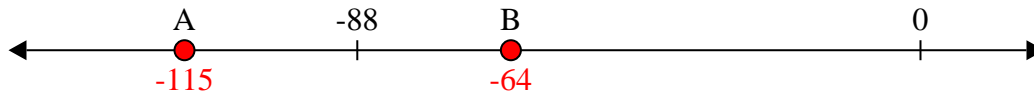


Risolvi ogni problema.


1) Quale lettera indica correttamente -15?




2) Quale lettera indica correttamente -64?



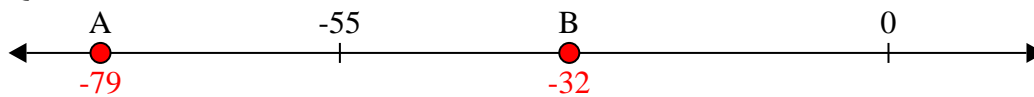
3) Quale lettera indica correttamente -50?




4) Quale lettera indica correttamente -110?




5) Quale lettera indica correttamente -79?



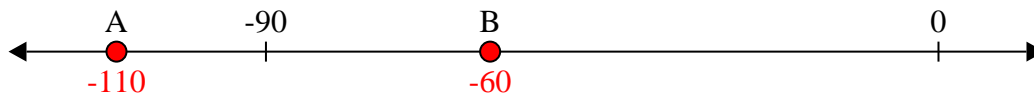
6) Quale lettera indica correttamente -76?



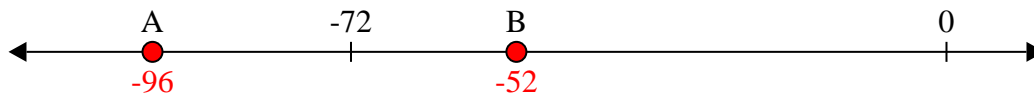
7) Quale lettera indica correttamente -96?



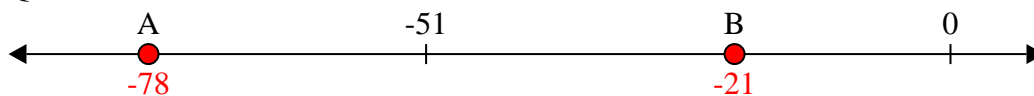
8) Quale lettera indica correttamente -110?



9) Quale lettera indica correttamente -52?



10) Quale lettera indica correttamente -21?



Risposte

1. B

2. B

3. B

4. A

5. A

6. B

7. A

8. A

9. B

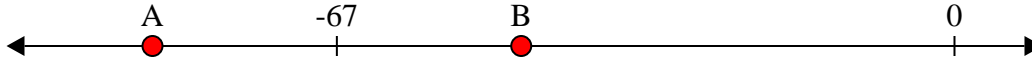
10. B



Risolvi ogni problema.


Risposte

1) Quale lettera indica correttamente -47?




1. _____

2) Quale lettera indica correttamente -16?




2. _____

3) Quale lettera indica correttamente -129?




3. _____

4) Quale lettera indica correttamente -26?




4. _____

5) Quale lettera indica correttamente -30?




5. _____

6) Quale lettera indica correttamente -11?



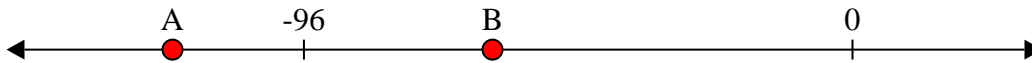
6. _____

7) Quale lettera indica correttamente -101?




7. _____

8) Quale lettera indica correttamente -63?




8. _____

9) Quale lettera indica correttamente -29?



9. _____

10) Quale lettera indica correttamente -28?

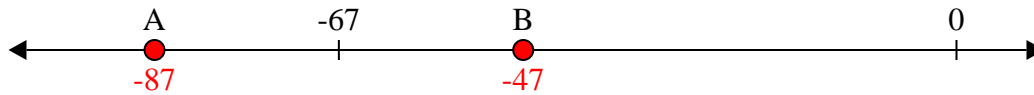


10. _____

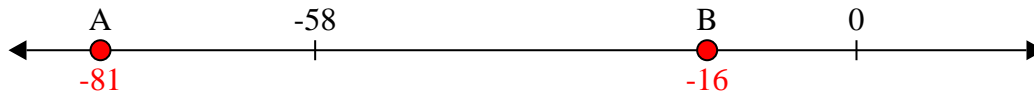


Risolvi ogni problema.


1) Quale lettera indica correttamente -47?




2) Quale lettera indica correttamente -16?



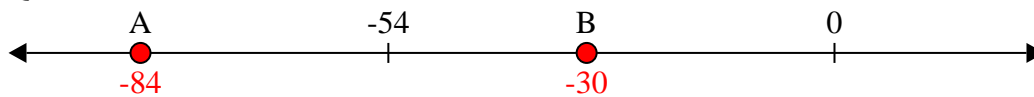
3) Quale lettera indica correttamente -129?




4) Quale lettera indica correttamente -26?




5) Quale lettera indica correttamente -30?



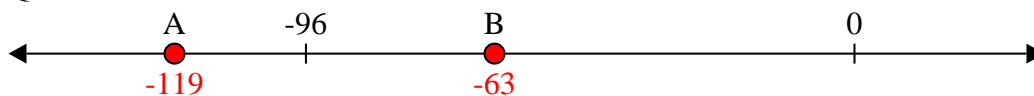
6) Quale lettera indica correttamente -11?



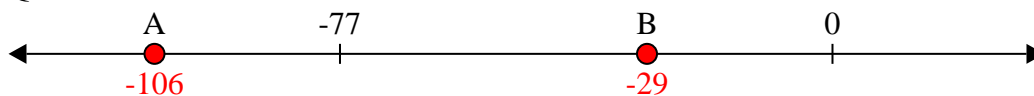
7) Quale lettera indica correttamente -101?



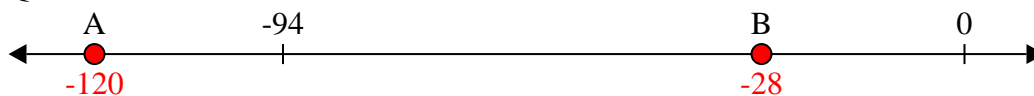
8) Quale lettera indica correttamente -63?



9) Quale lettera indica correttamente -29?



10) Quale lettera indica correttamente -28?



Risposte

1. **B**

2. **B**

3. **A**

4. **B**

5. **B**

6. **B**

7. **A**

8. **B**


9. **B**

10. **B**



Risolvi ogni problema.

1) Quale lettera indica correttamente -88?




2) Quale lettera indica correttamente -79?




3) Quale lettera indica correttamente -65?




4) Quale lettera indica correttamente -30?




5) Quale lettera indica correttamente -79?




6) Quale lettera indica correttamente -29?




7) Quale lettera indica correttamente -105?




8) Quale lettera indica correttamente -39?



9) Quale lettera indica correttamente -114?



10) Quale lettera indica correttamente -122?



Risposte

1. _____

2. _____

3. _____

4. _____

5. _____

6. _____

7. _____

8. _____

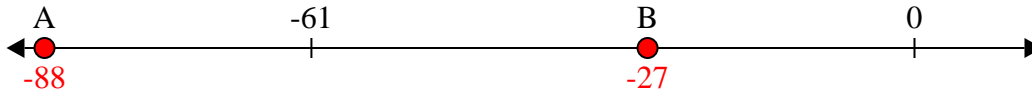
9. _____

10. _____

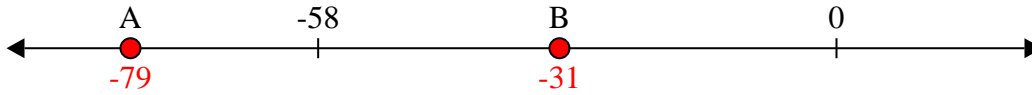


Risolvi ogni problema.

1) Quale lettera indica correttamente -88?



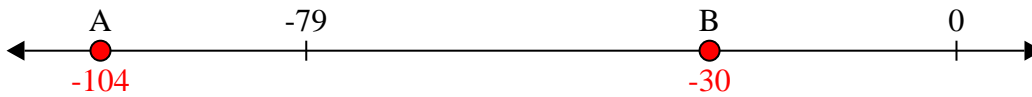
2) Quale lettera indica correttamente -79?



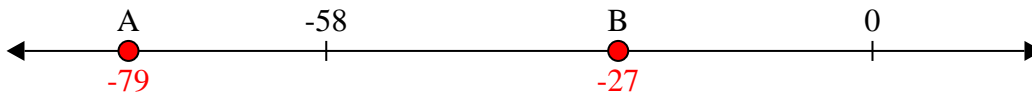
3) Quale lettera indica correttamente -65?



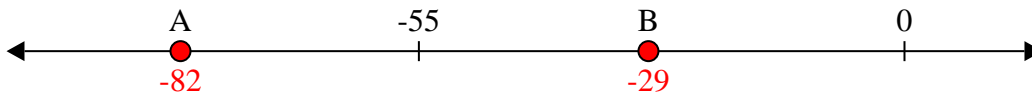
4) Quale lettera indica correttamente -30?



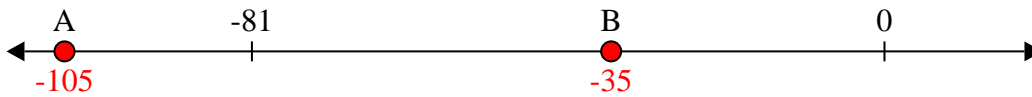
5) Quale lettera indica correttamente -79?



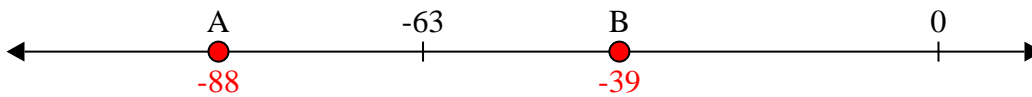
6) Quale lettera indica correttamente -29?



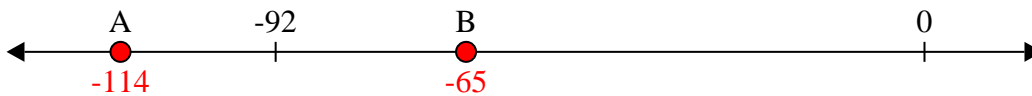
7) Quale lettera indica correttamente -105?



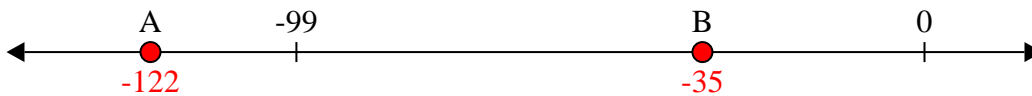
8) Quale lettera indica correttamente -39?



9) Quale lettera indica correttamente -114?



10) Quale lettera indica correttamente -122?



Risposte

1. **A**

2. **A**

3. **B**

4. **B**

5. **A**

6. **B**

7. **A**

8. **B**


9. **A**

10. **A**




Risolvi ogni problema.

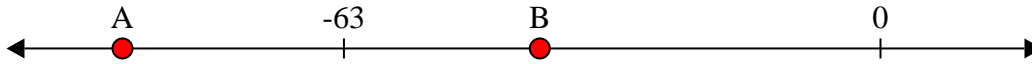
1) Quale lettera indica correttamente -98?




2) Quale lettera indica correttamente -18?




3) Quale lettera indica correttamente -40?




4) Quale lettera indica correttamente -82?




5) Quale lettera indica correttamente -21?




6) Quale lettera indica correttamente -21?



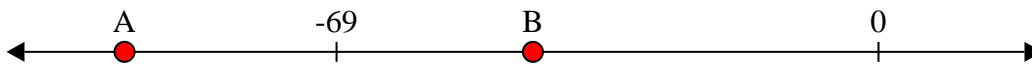
7) Quale lettera indica correttamente -123?




8) Quale lettera indica correttamente -15?



9) Quale lettera indica correttamente -96?



10) Quale lettera indica correttamente -29?



Risposte

1. _____

2. _____

3. _____

4. _____

5. _____

6. _____

7. _____

8. _____

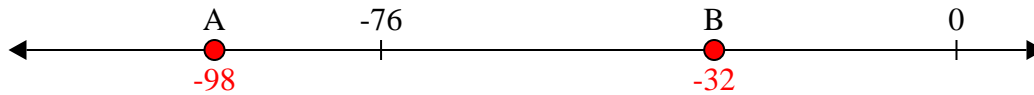
9. _____

10. _____

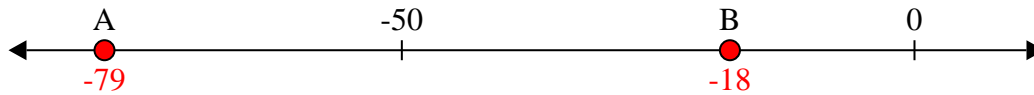


Risolvi ogni problema.

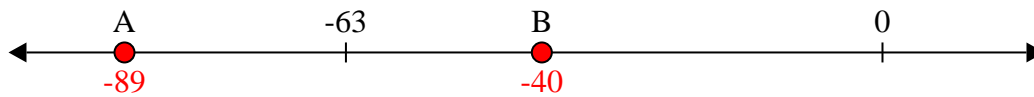
1) Quale lettera indica correttamente -98?




2) Quale lettera indica correttamente -18?



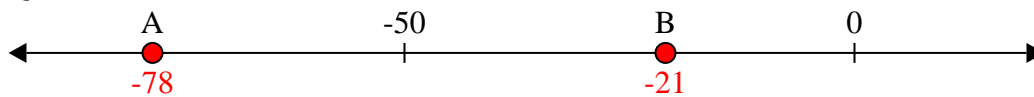
3) Quale lettera indica correttamente -40?




4) Quale lettera indica correttamente -82?




5) Quale lettera indica correttamente -21?




6) Quale lettera indica correttamente -21?



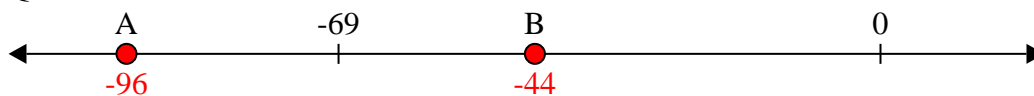
7) Quale lettera indica correttamente -123?



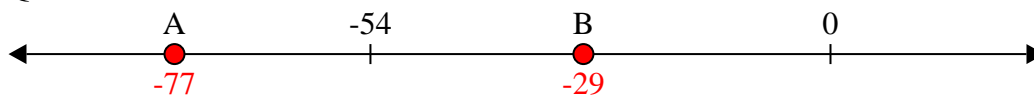
8) Quale lettera indica correttamente -15?



9) Quale lettera indica correttamente -96?



10) Quale lettera indica correttamente -29?



Risposte

1. A

2. B

3. B

4. A

5. B

6. B

7. A

8. B


9. A

10. B

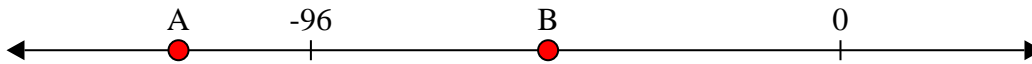


Risolvi ogni problema.


1) Quale lettera indica correttamente -33?




2) Quale lettera indica correttamente -53?




3) Quale lettera indica correttamente -83?




4) Quale lettera indica correttamente -93?



5) Quale lettera indica correttamente -17?



6) Quale lettera indica correttamente -19?




7) Quale lettera indica correttamente -36?




8) Quale lettera indica correttamente -36?



9) Quale lettera indica correttamente -113?



10) Quale lettera indica correttamente -112?



Risposte

1. _____

2. _____

3. _____

4. _____

5. _____

6. _____

7. _____

8. _____

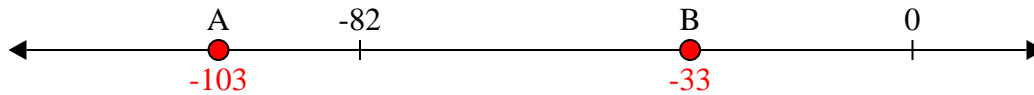
9. _____

10. _____

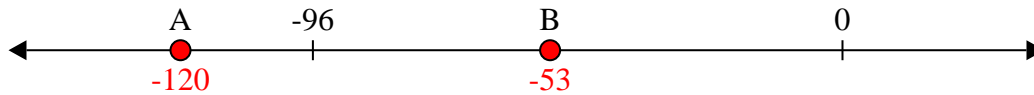


Risolvi ogni problema.


1) Quale lettera indica correttamente -33?




2) Quale lettera indica correttamente -53?



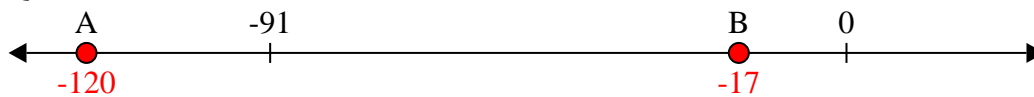
3) Quale lettera indica correttamente -83?




4) Quale lettera indica correttamente -93?




5) Quale lettera indica correttamente -17?



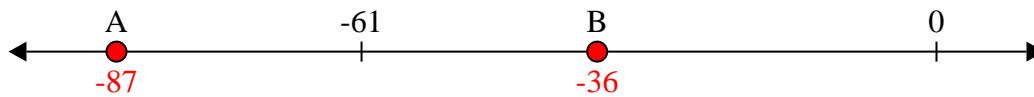
6) Quale lettera indica correttamente -19?



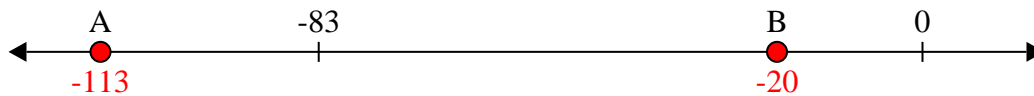
7) Quale lettera indica correttamente -36?



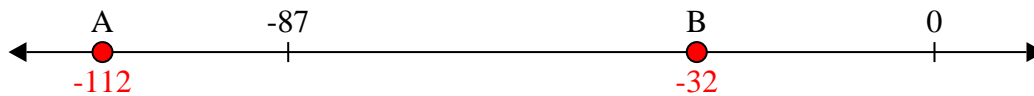
8) Quale lettera indica correttamente -36?



9) Quale lettera indica correttamente -113?



10) Quale lettera indica correttamente -112?



Risposte

1. B

2. B

3. A

4. A

5. B

6. B

7. B

8. B


9. A

10. A




Risolvi ogni problema.


1) Quale lettera indica correttamente -116?



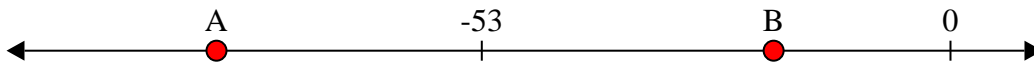
2) Quale lettera indica correttamente -12?




3) Quale lettera indica correttamente -14?



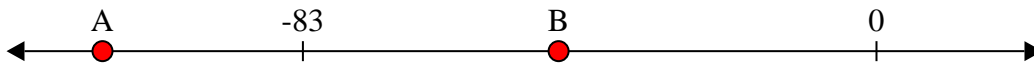
4) Quale lettera indica correttamente -83?




5) Quale lettera indica correttamente -92?




6) Quale lettera indica correttamente -46?




7) Quale lettera indica correttamente -18?




8) Quale lettera indica correttamente -84?



9) Quale lettera indica correttamente -32?



10) Quale lettera indica correttamente -18?



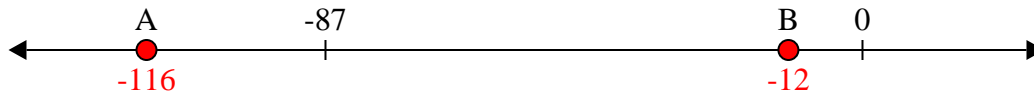
Risposte

1. _____
2. _____
3. _____
4. _____
5. _____
6. _____
7. _____
8. _____
9. _____
10. _____

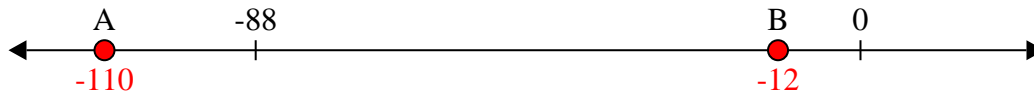


Risolvi ogni problema.


1) Quale lettera indica correttamente -116?



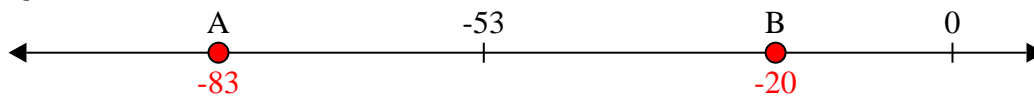
2) Quale lettera indica correttamente -12?



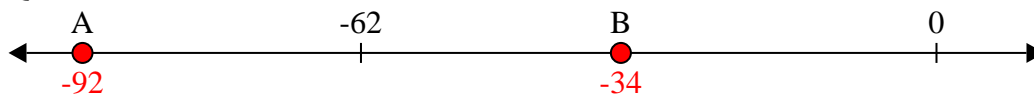
3) Quale lettera indica correttamente -14?



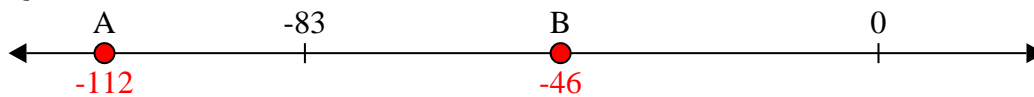
4) Quale lettera indica correttamente -83?




5) Quale lettera indica correttamente -92?



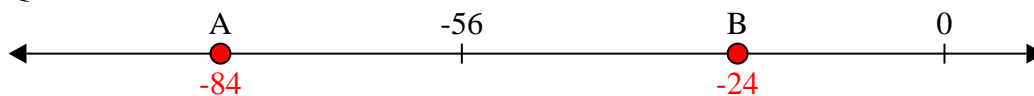
6) Quale lettera indica correttamente -46?



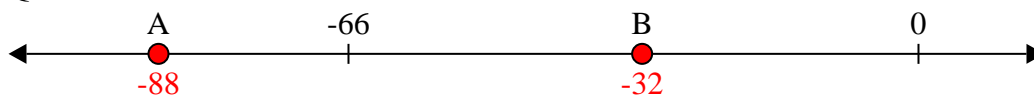
7) Quale lettera indica correttamente -18?



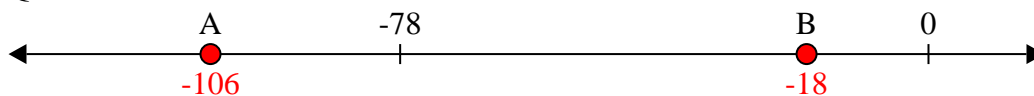
8) Quale lettera indica correttamente -84?



9) Quale lettera indica correttamente -32?



10) Quale lettera indica correttamente -18?



Risposte

1. A

2. B

3. B

4. A

5. A

6. B

7. B

8. A

9. B

10. B