




**Risolvi ogni problema.**


1) Quale lettera indica correttamente -33?




2) Quale lettera indica correttamente -53?




3) Quale lettera indica correttamente -83?




4) Quale lettera indica correttamente -93?




5) Quale lettera indica correttamente -17?



6) Quale lettera indica correttamente -19?




7) Quale lettera indica correttamente -36?




8) Quale lettera indica correttamente -36?



9) Quale lettera indica correttamente -113?



10) Quale lettera indica correttamente -112?



**Risposte**

1. \_\_\_\_\_

2. \_\_\_\_\_

3. \_\_\_\_\_

4. \_\_\_\_\_

5. \_\_\_\_\_

6. \_\_\_\_\_

7. \_\_\_\_\_

8. \_\_\_\_\_

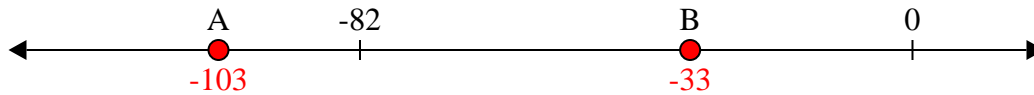
9. \_\_\_\_\_

10. \_\_\_\_\_

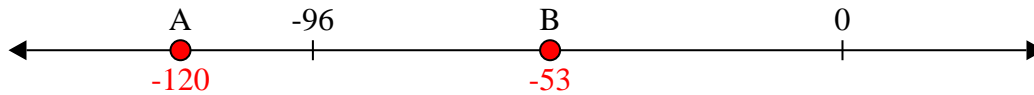


Risolvi ogni problema.


1) Quale lettera indica correttamente -33?




2) Quale lettera indica correttamente -53?



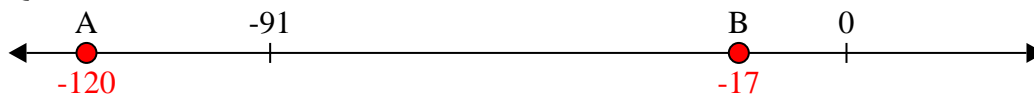
3) Quale lettera indica correttamente -83?




4) Quale lettera indica correttamente -93?




5) Quale lettera indica correttamente -17?




6) Quale lettera indica correttamente -19?



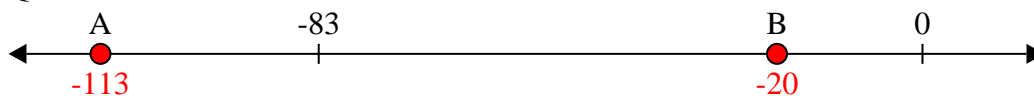
7) Quale lettera indica correttamente -36?



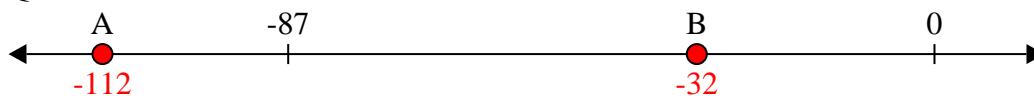
8) Quale lettera indica correttamente -36?



9) Quale lettera indica correttamente -113?



10) Quale lettera indica correttamente -112?



Risposte

1. B

2. B

3. A

4. A

5. B

6. B

7. B

8. B

9. A

10. A