




**Risolvi ogni problema.**


1) Quale lettera indica correttamente -88?




2) Quale lettera indica correttamente -79?




3) Quale lettera indica correttamente -65?




4) Quale lettera indica correttamente -30?




5) Quale lettera indica correttamente -79?




6) Quale lettera indica correttamente -29?




7) Quale lettera indica correttamente -105?



8) Quale lettera indica correttamente -39?



9) Quale lettera indica correttamente -114?



10) Quale lettera indica correttamente -122?



**Risposte**

1. \_\_\_\_\_

2. \_\_\_\_\_

3. \_\_\_\_\_

4. \_\_\_\_\_

5. \_\_\_\_\_

6. \_\_\_\_\_

7. \_\_\_\_\_

8. \_\_\_\_\_

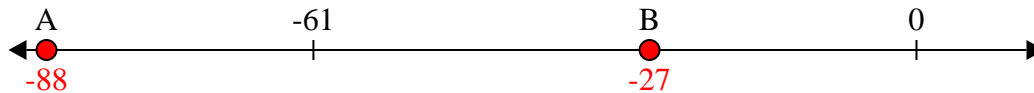
9. \_\_\_\_\_

10. \_\_\_\_\_

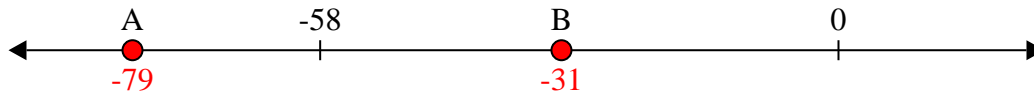


Risolvi ogni problema.


1) Quale lettera indica correttamente -88?




2) Quale lettera indica correttamente -79?




3) Quale lettera indica correttamente -65?




4) Quale lettera indica correttamente -30?




5) Quale lettera indica correttamente -79?




6) Quale lettera indica correttamente -29?



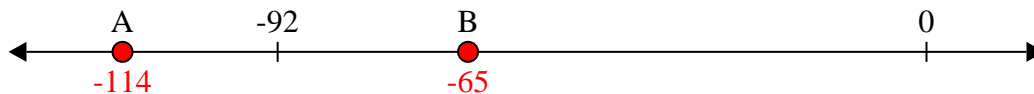
7) Quale lettera indica correttamente -105?



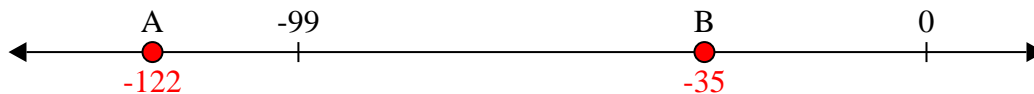
8) Quale lettera indica correttamente -39?



9) Quale lettera indica correttamente -114?



10) Quale lettera indica correttamente -122?



Risposte

1. A

2. A

3. B

4. B

5. A

6. B

7. A

8. B

9. A

10. A