


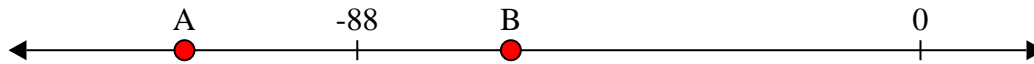


Risolvi ogni problema.


1) Quale lettera indica correttamente -15?




2) Quale lettera indica correttamente -64?




3) Quale lettera indica correttamente -50?




4) Quale lettera indica correttamente -110?



5) Quale lettera indica correttamente -79?



6) Quale lettera indica correttamente -76?



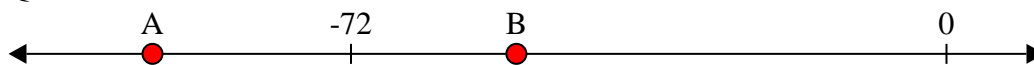
7) Quale lettera indica correttamente -96?




8) Quale lettera indica correttamente -110?



9) Quale lettera indica correttamente -52?



10) Quale lettera indica correttamente -21?



Risposte

1. _____

2. _____

3. _____

4. _____

5. _____

6. _____

7. _____

8. _____

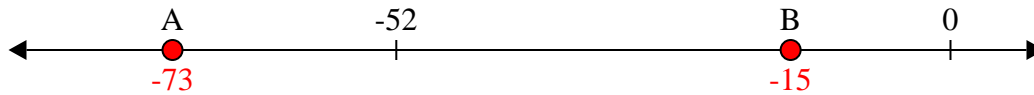
9. _____

10. _____

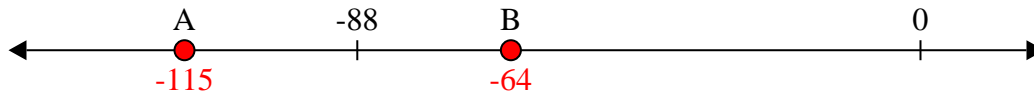


Risolvi ogni problema.


1) Quale lettera indica correttamente -15?




2) Quale lettera indica correttamente -64?



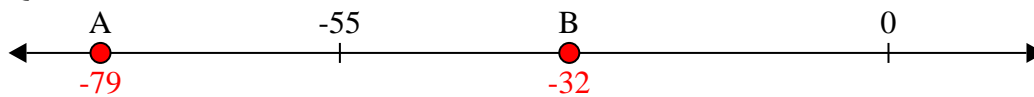
3) Quale lettera indica correttamente -50?




4) Quale lettera indica correttamente -110?




5) Quale lettera indica correttamente -79?



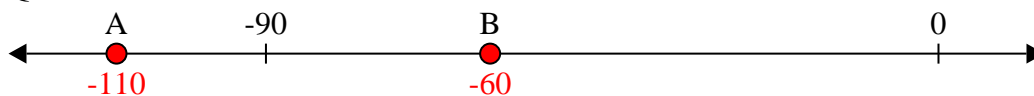
6) Quale lettera indica correttamente -76?



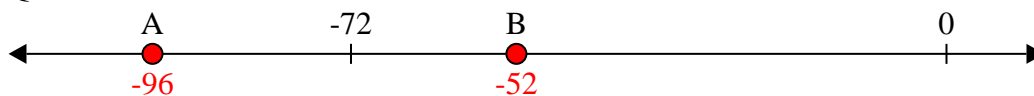
7) Quale lettera indica correttamente -96?



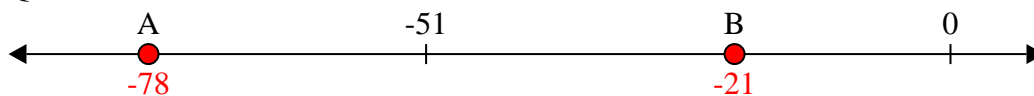
8) Quale lettera indica correttamente -110?



9) Quale lettera indica correttamente -52?



10) Quale lettera indica correttamente -21?



Risposte

1. B

2. B

3. B

4. A

5. A

6. B

7. A

8. A

9. B

10. B