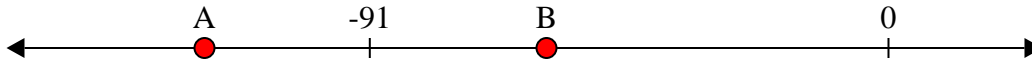





Risolvi ogni problema.


1) Quale lettera indica correttamente -60?




2) Quale lettera indica correttamente -49?




3) Quale lettera indica correttamente -43?




4) Quale lettera indica correttamente -15?




5) Quale lettera indica correttamente -116?




6) Quale lettera indica correttamente -19?




7) Quale lettera indica correttamente -107?




8) Quale lettera indica correttamente -80?



9) Quale lettera indica correttamente -120?



10) Quale lettera indica correttamente -110?



Risposte

1. _____

2. _____

3. _____

4. _____

5. _____

6. _____

7. _____

8. _____

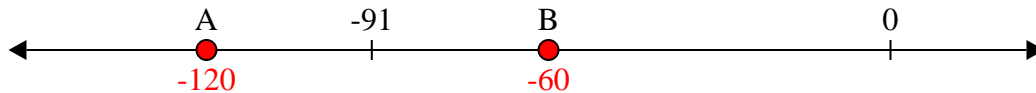
9. _____

10. _____

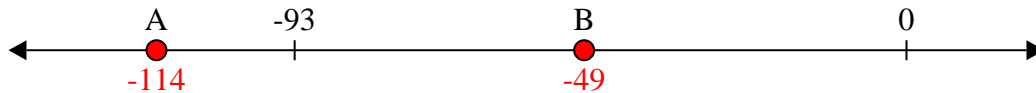


Risolvi ogni problema.


1) Quale lettera indica correttamente -60?




2) Quale lettera indica correttamente -49?




3) Quale lettera indica correttamente -43?




4) Quale lettera indica correttamente -15?




5) Quale lettera indica correttamente -116?




6) Quale lettera indica correttamente -19?




7) Quale lettera indica correttamente -107?



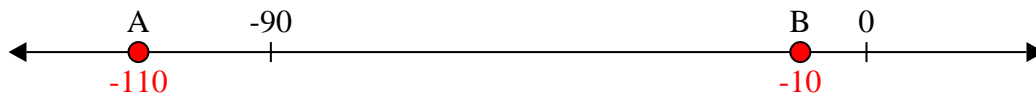
8) Quale lettera indica correttamente -80?



9) Quale lettera indica correttamente -120?



10) Quale lettera indica correttamente -110?



Risposte

1. **B**

2. **B**

3. **B**

4. **B**

5. **A**

6. **B**

7. **A**

8. **A**

9. **A**

10. **A**