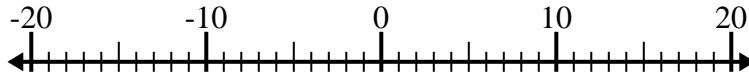


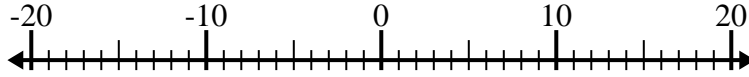


Risolvi ogni operazione. Usa la linea numerata se necessario.

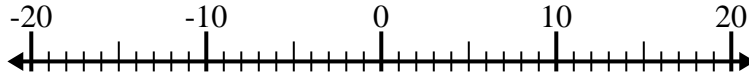
1) $(-8) + (-6) =$ _____



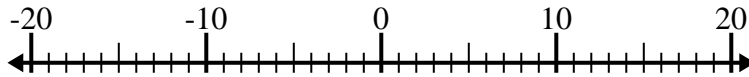
2) $(-12) - (-1) =$ _____



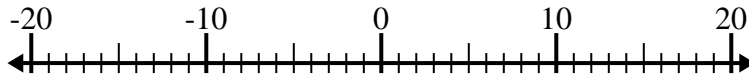
3) $(-15) - (-12) =$ _____



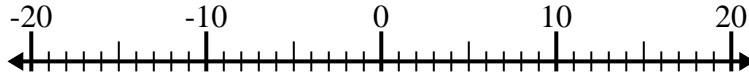
4) $(-11) - 8 =$ _____



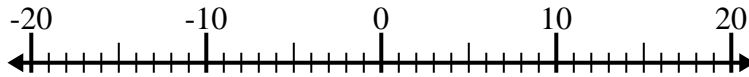
5) $10 + (-2) =$ _____



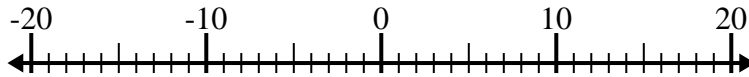
6) $2 - (-4) =$ _____



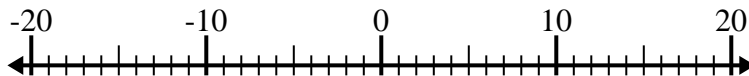
7) $12 - (-3) =$ _____



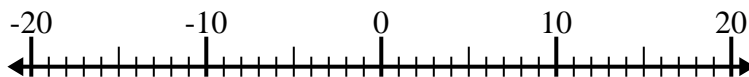
8) $11 + (-9) =$ _____



9) $(-3) + (-11) =$ _____



10) $(-4) - 1 =$ _____

**Risposte**

1. _____

2. _____

3. _____

4. _____

5. _____

6. _____

7. _____

8. _____

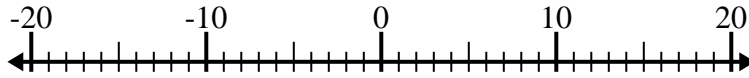
9. _____

10. _____

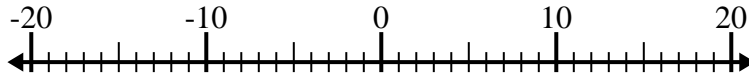


Risolvi ogni operazione. Usa la linea numerata se necessario.

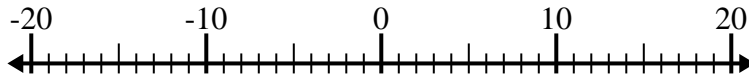
1) $(-8) + (-6) = \underline{-14}$



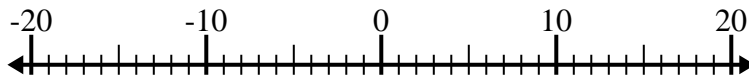
2) $(-12) - (-1) = \underline{-11}$



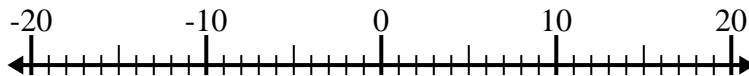
3) $(-15) - (-12) = \underline{-3}$



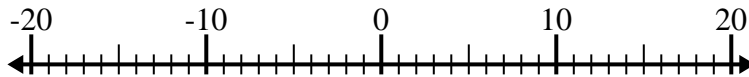
4) $(-11) - 8 = \underline{-19}$



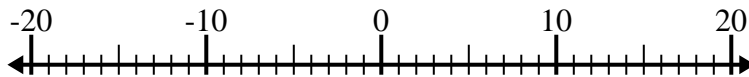
5) $10 + (-2) = \underline{8}$



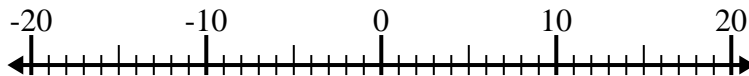
6) $2 - (-4) = \underline{6}$



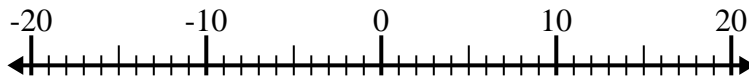
7) $12 - (-3) = \underline{15}$



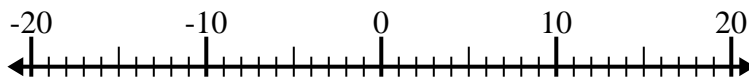
8) $11 + (-9) = \underline{2}$



9) $(-3) + (-11) = \underline{-14}$



10) $(-4) - 1 = \underline{-5}$

**Risposte**1. **-14**2. **-11**3. **-3**4. **-19**5. **8**6. **6**7. **15**8. **2**9. **-14**10. **-5**