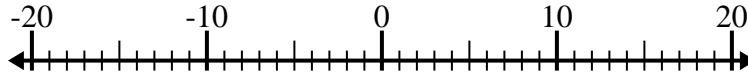


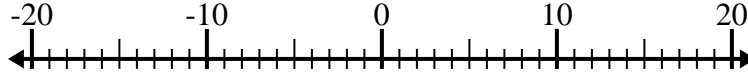


Risolvi ogni operazione. Usa la linea numerata se necessario.

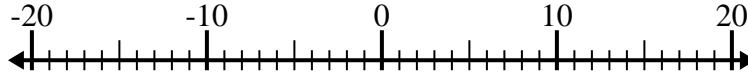
1) $10 - (-7) =$ _____



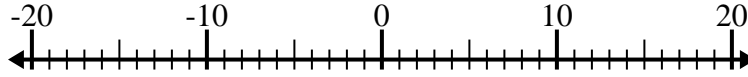
2) $(-12) - 5 =$ _____



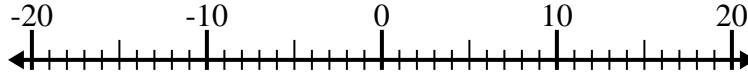
3) $(-8) + 15 =$ _____



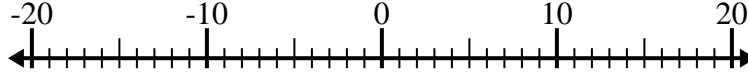
4) $(-7) + (-1) =$ _____



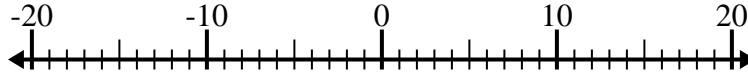
5) $5 + (-13) =$ _____



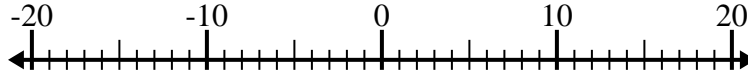
6) $2 - (-11) =$ _____



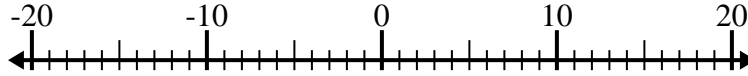
7) $(-4) + (-9) =$ _____



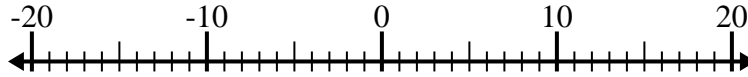
8) $(-12) - 3 =$ _____



9) $13 + (-3) =$ _____



10) $(-13) - (-15) =$ _____



Risposte

1. _____

2. _____

3. _____

4. _____

5. _____

6. _____

7. _____

8. _____

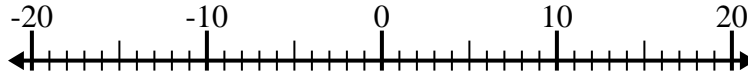
9. _____

10. _____

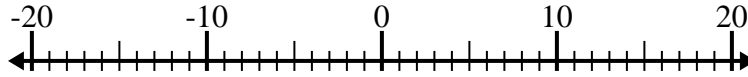


Risolvi ogni operazione. Usa la linea numerata se necessario.

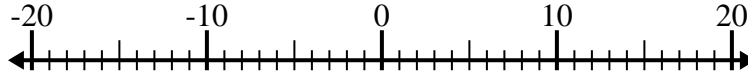
1) $10 - (-7) = \underline{17}$



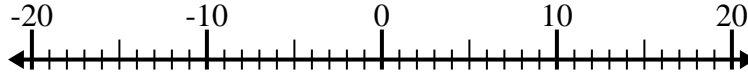
2) $(-12) - 5 = \underline{-17}$



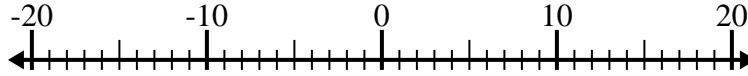
3) $(-8) + 15 = \underline{7}$



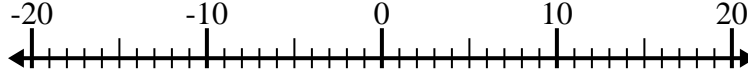
4) $(-7) + (-1) = \underline{-8}$



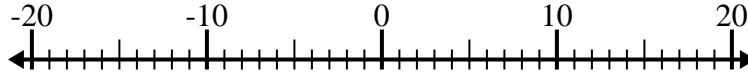
5) $5 + (-13) = \underline{-8}$



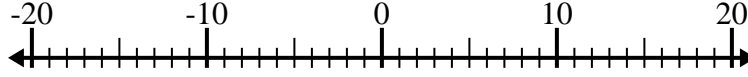
6) $2 - (-11) = \underline{13}$



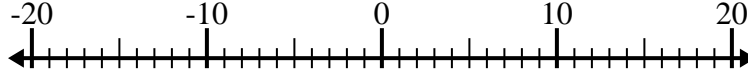
7) $(-4) + (-9) = \underline{-13}$



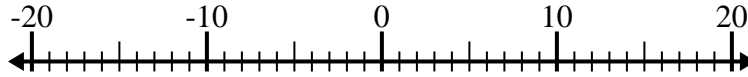
8) $(-12) - 3 = \underline{-15}$



9) $13 + (-3) = \underline{10}$



10) $(-13) - (-15) = \underline{2}$



Risposte

1. 17

2. -17

3. 7

4. -8

5. -8

6. 13

7. -13

8. -15

9. 10

10. 2