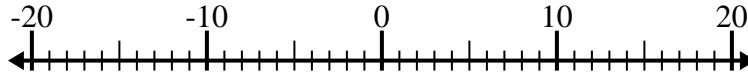


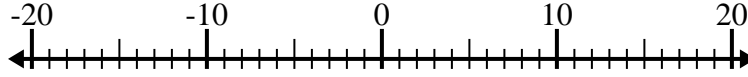


Risolvi ogni operazione. Usa la linea numerata se necessario.

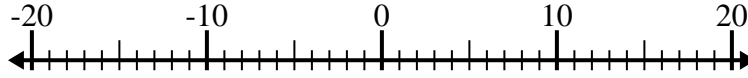
1) $(-12) - (-2) =$ _____



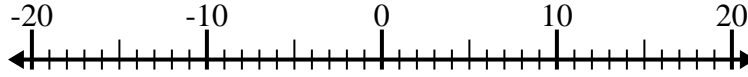
2) $(-5) - (-7) =$ _____



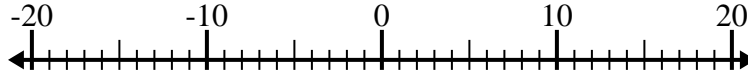
3) $11 + (-4) =$ _____



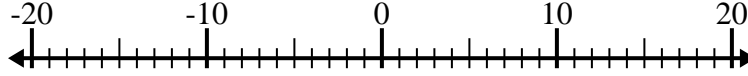
4) $(-5) + (-2) =$ _____



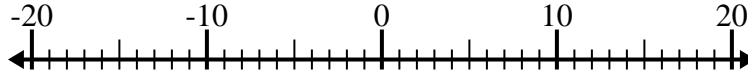
5) $14 - (-2) =$ _____



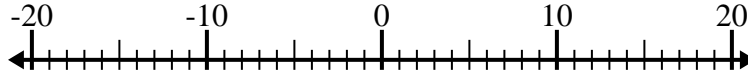
6) $(-15) - (-7) =$ _____



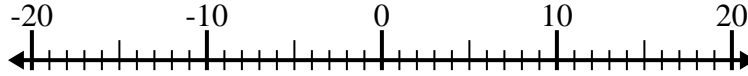
7) $2 - (-1) =$ _____



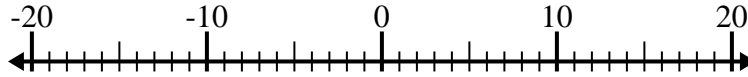
8) $13 + (-9) =$ _____



9) $(-13) + (-3) =$ _____



10) $(-12) + 2 =$ _____



Risposte

1. _____

2. _____

3. _____

4. _____

5. _____

6. _____

7. _____

8. _____

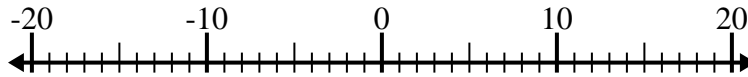
9. _____

10. _____

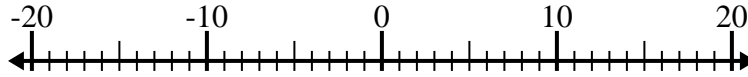


Risolvi ogni operazione. Usa la linea numerata se necessario.

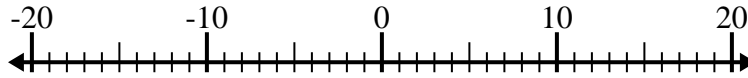
1) $(-12) - (-2) = \underline{-10}$



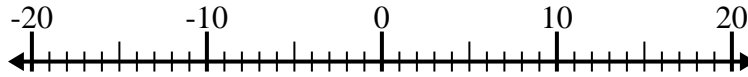
2) $(-5) - (-7) = \underline{2}$



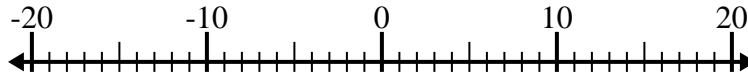
3) $11 + (-4) = \underline{7}$



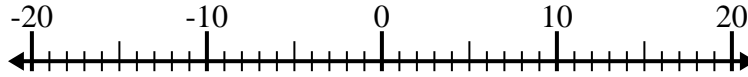
4) $(-5) + (-2) = \underline{-7}$



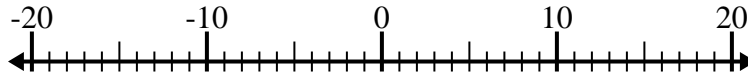
5) $14 - (-2) = \underline{16}$



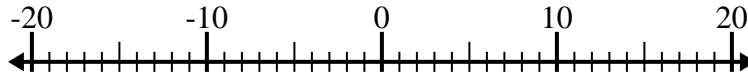
6) $(-15) - (-7) = \underline{-8}$



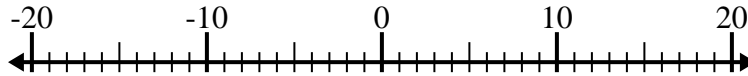
7) $2 - (-1) = \underline{3}$



8) $13 + (-9) = \underline{4}$



9) $(-13) + (-3) = \underline{-16}$



10) $(-12) + 2 = \underline{-10}$



Risposte

1. **-10**

2. **2**

3. **7**

4. **-7**

5. **16**

6. **-8**

7. **3**

8. **4**

9. **-16**

10. **-10**