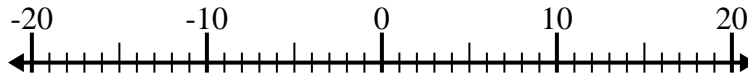


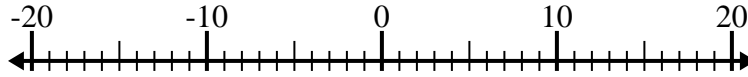


Risolvi ogni operazione. Usa la linea numerata se necessario.

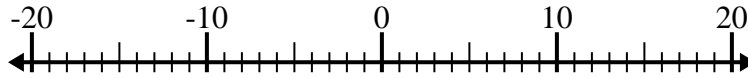
1) $(-14) + 12 =$ _____



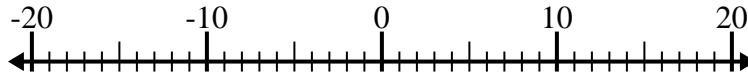
2) $(-3) - (-11) =$ _____



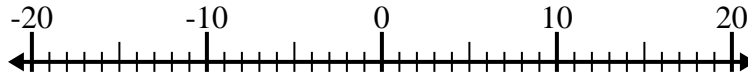
3) $3 + (-12) =$ _____



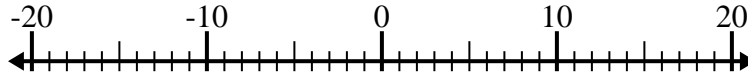
4) $(-12) - (-9) =$ _____



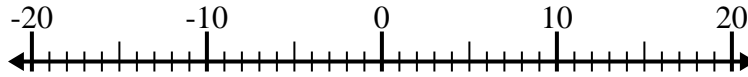
5) $2 - (-9) =$ _____



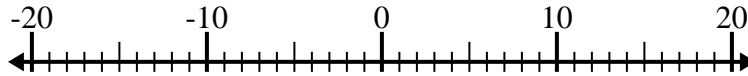
6) $(-5) + 14 =$ _____



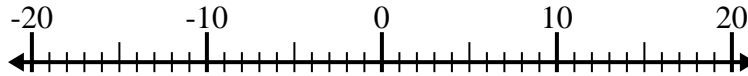
7) $(-1) + (-11) =$ _____



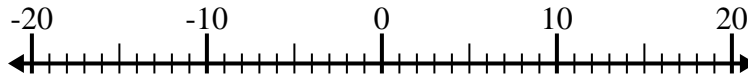
8) $(-8) - 10 =$ _____



9) $(-9) + 7 =$ _____



10) $(-5) + (-3) =$ _____



Risposte

1. _____

2. _____

3. _____

4. _____

5. _____

6. _____

7. _____

8. _____

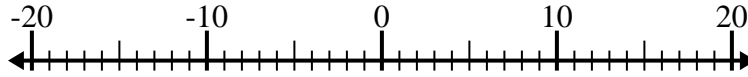
9. _____

10. _____

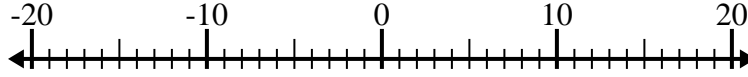


Risolvi ogni operazione. Usa la linea numerata se necessario.

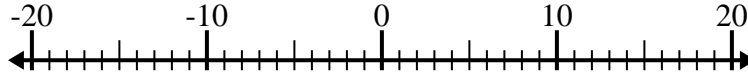
1) $(-14) + 12 = \underline{-2}$



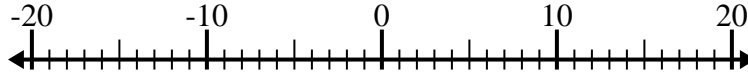
2) $(-3) - (-11) = \underline{8}$



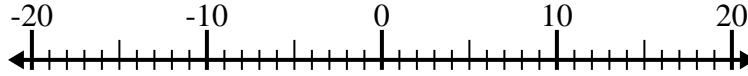
3) $3 + (-12) = \underline{-9}$



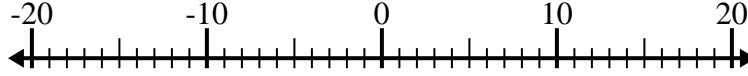
4) $(-12) - (-9) = \underline{-3}$



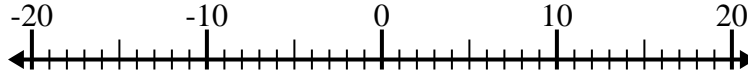
5) $2 - (-9) = \underline{11}$



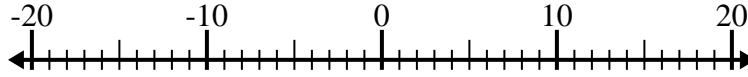
6) $(-5) + 14 = \underline{9}$



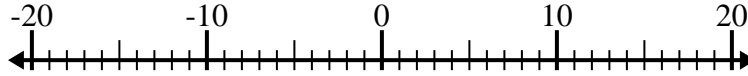
7) $(-1) + (-11) = \underline{-12}$



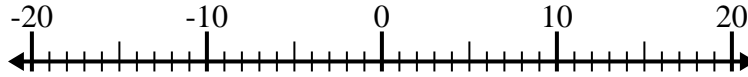
8) $(-8) - 10 = \underline{-18}$



9) $(-9) + 7 = \underline{-2}$



10) $(-5) + (-3) = \underline{-8}$



Risposte

1. -2

2. 8

3. -9

4. -3

5. 11

6. 9

7. -12

8. -18

9. -2

10. -8