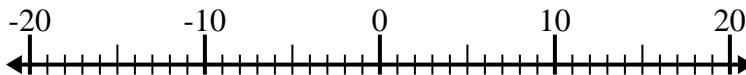


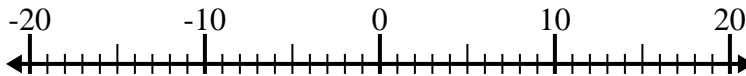


Risolvi ogni operazione. Usa la linea numerata se necessario.

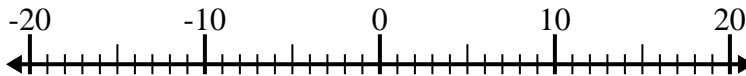
1) $(-10) - (-15) =$ _____



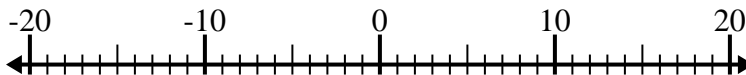
2) $11 - (-4) =$ _____



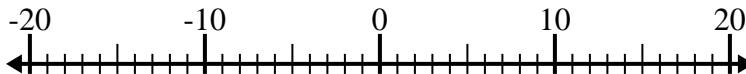
3) $12 + (-7) =$ _____



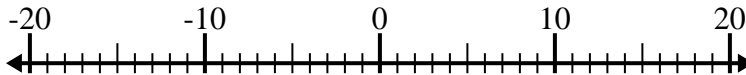
4) $(-1) - 8 =$ _____



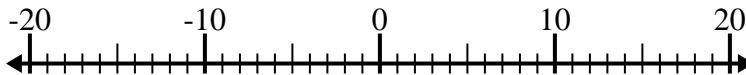
5) $10 - (-8) =$ _____



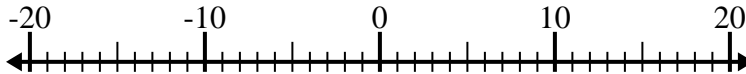
6) $(-9) - (-7) =$ _____



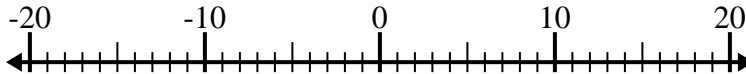
7) $4 + (-6) =$ _____



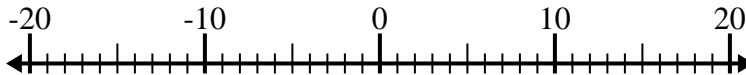
8) $(-7) + 6 =$ _____



9) $14 - (-5) =$ _____



10) $(-14) + 13 =$ _____



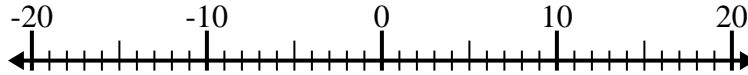
Risposte

1. _____
2. _____
3. _____
4. _____
5. _____
6. _____
7. _____
8. _____
9. _____
10. _____

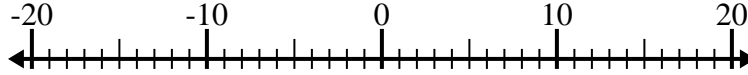


Risolvi ogni operazione. Usa la linea numerata se necessario.

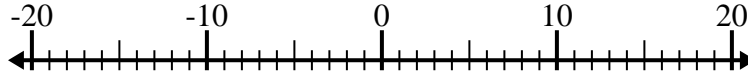
1) $(-10) - (-15) = \underline{5}$



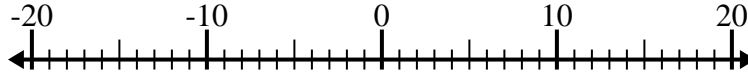
2) $11 - (-4) = \underline{15}$



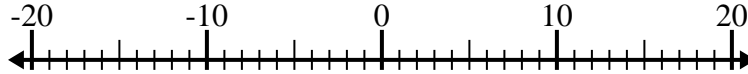
3) $12 + (-7) = \underline{5}$



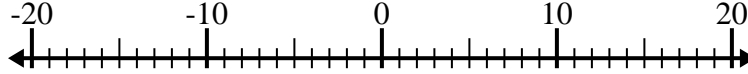
4) $(-1) - 8 = \underline{-9}$



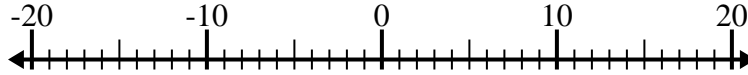
5) $10 - (-8) = \underline{18}$



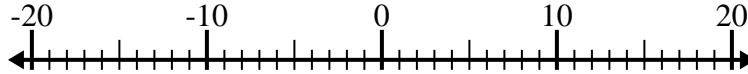
6) $(-9) - (-7) = \underline{-2}$



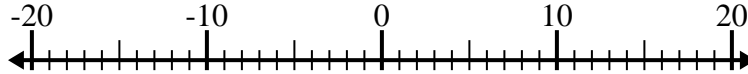
7) $4 + (-6) = \underline{-2}$



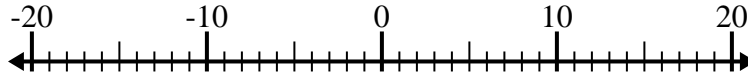
8) $(-7) + 6 = \underline{-1}$



9) $14 - (-5) = \underline{19}$



10) $(-14) + 13 = \underline{-1}$



Risposte

1. 5

2. 15

3. 5

4. -9

5. 18

6. -2

7. -2

8. -1

9. 19

10. -1