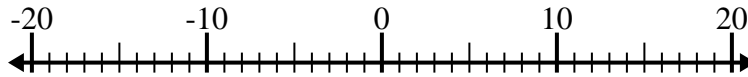


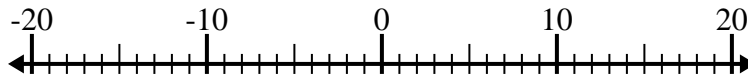


Risolvi ogni operazione. Usa la linea numerata se necessario.

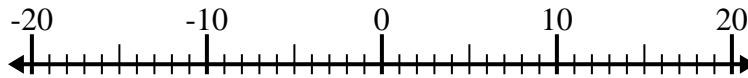
1) $1 + (-13) =$ _____



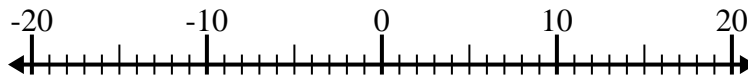
2) $(-15) + 5 =$ _____



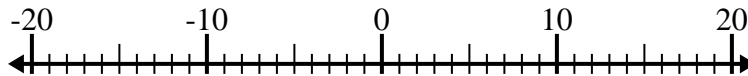
3) $14 - (-1) =$ _____



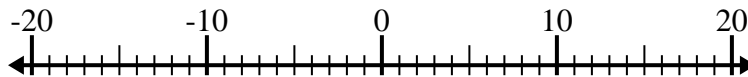
4) $(-8) - (-2) =$ _____



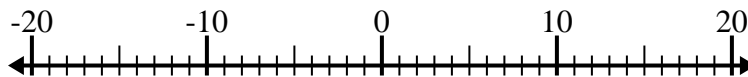
5) $4 + (-15) =$ _____



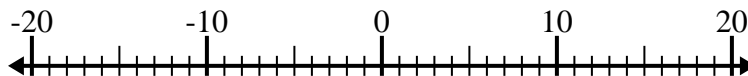
6) $7 - (-1) =$ _____



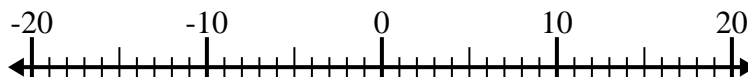
7) $(-5) + (-1) =$ _____



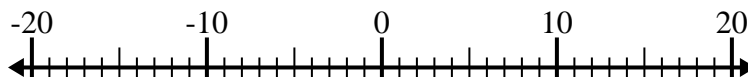
8) $(-11) + (-2) =$ _____



9) $9 - (-5) =$ _____



10) $(-1) - (-4) =$ _____



Risposte

1. _____

2. _____

3. _____

4. _____

5. _____

6. _____

7. _____

8. _____

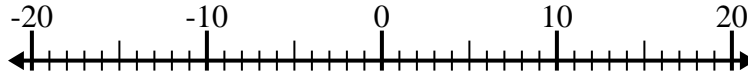
9. _____

10. _____

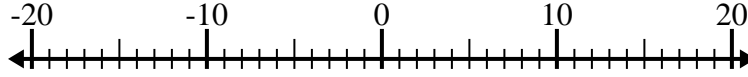


Risolvi ogni operazione. Usa la linea numerata se necessario.

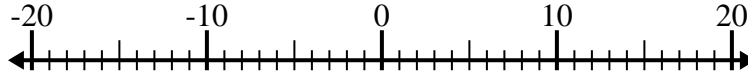
1) $1 + (-13) = \underline{-12}$



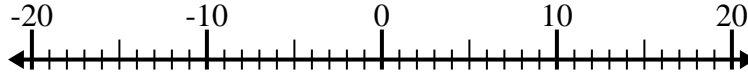
2) $(-15) + 5 = \underline{-10}$



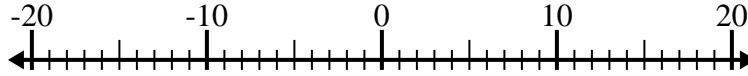
3) $14 - (-1) = \underline{15}$



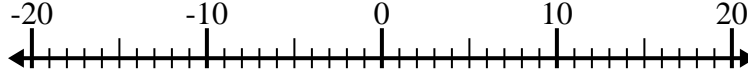
4) $(-8) - (-2) = \underline{-6}$



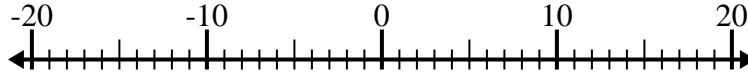
5) $4 + (-15) = \underline{-11}$



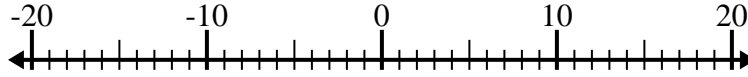
6) $7 - (-1) = \underline{8}$



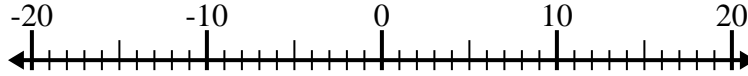
7) $(-5) + (-1) = \underline{-6}$



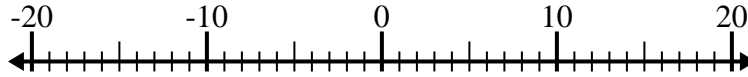
8) $(-11) + (-2) = \underline{-13}$



9) $9 - (-5) = \underline{14}$



10) $(-1) - (-4) = \underline{3}$



Risposte

1. -12

2. -10

3. 15

4. -6

5. -11

6. 8

7. -6

8. -13

9. 14

10. 3