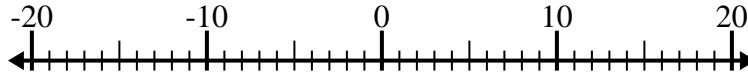


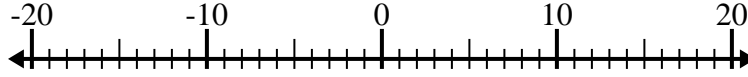


Risolvi ogni operazione. Usa la linea numerata se necessario.

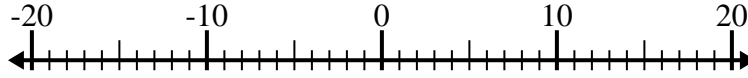
1) $(-9) - 2 =$ _____



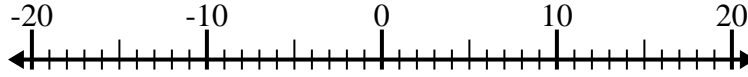
2) $4 - (-6) =$ _____



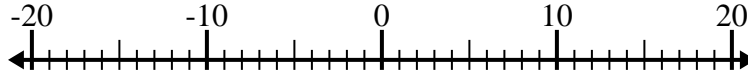
3) $(-14) - 1 =$ _____



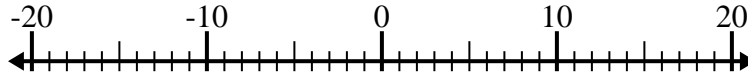
4) $3 - (-7) =$ _____



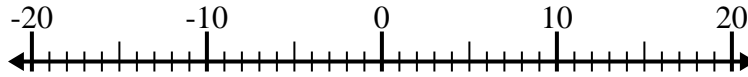
5) $(-6) - (-14) =$ _____



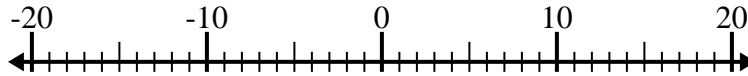
6) $4 + (-15) =$ _____



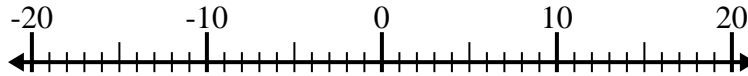
7) $(-11) + 9 =$ _____



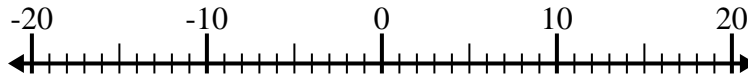
8) $12 - (-8) =$ _____



9) $(-5) + (-12) =$ _____



10) $(-12) + 2 =$ _____



Risposte

1. _____

2. _____

3. _____

4. _____

5. _____

6. _____

7. _____

8. _____

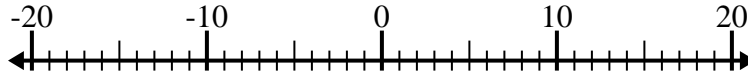
9. _____

10. _____

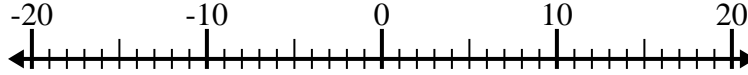


Risolvi ogni operazione. Usa la linea numerata se necessario.

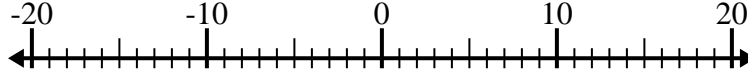
1) $(-9) - 2 = \underline{-11}$



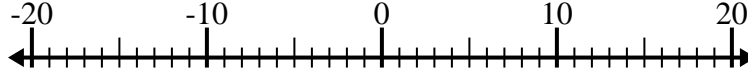
2) $4 - (-6) = \underline{10}$



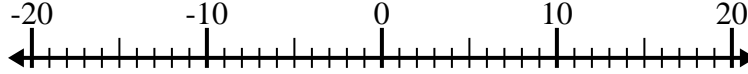
3) $(-14) - 1 = \underline{-15}$



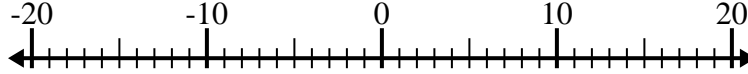
4) $3 - (-7) = \underline{10}$



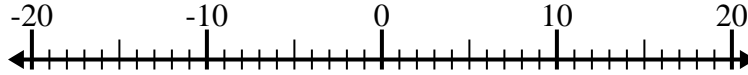
5) $(-6) - (-14) = \underline{8}$



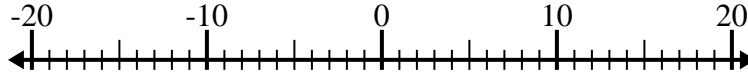
6) $4 + (-15) = \underline{-11}$



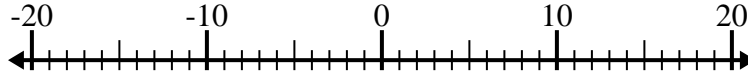
7) $(-11) + 9 = \underline{-2}$



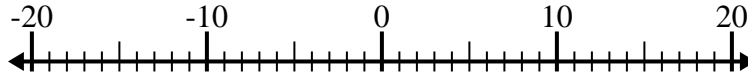
8) $12 - (-8) = \underline{20}$



9) $(-5) + (-12) = \underline{-17}$



10) $(-12) + 2 = \underline{-10}$



Risposte

1. **-11**

2. **10**

3. **-15**

4. **10**

5. **8**

6. **-11**

7. **-2**

8. **20**

9. **-17**

10. **-10**