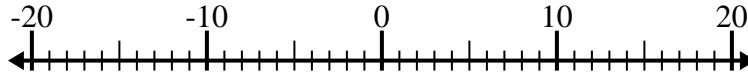


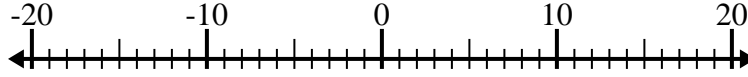


Risolvi ogni operazione. Usa la linea numerata se necessario.

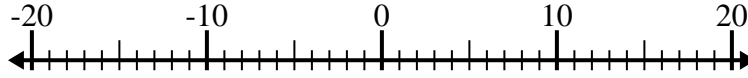
1) $7 + (-12) =$ _____



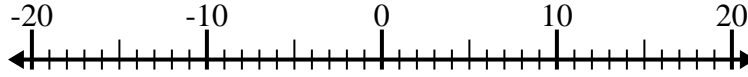
2) $(-6) - (-12) =$ _____



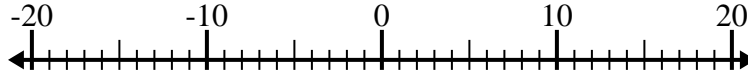
3) $(-5) + 1 =$ _____



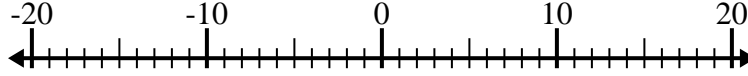
4) $12 - (-3) =$ _____



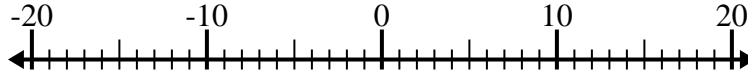
5) $10 + (-12) =$ _____



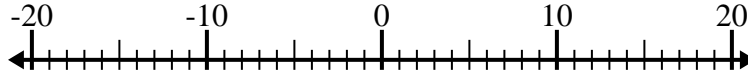
6) $(-15) + 7 =$ _____



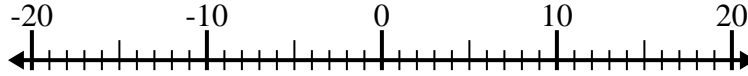
7) $(-13) - 2 =$ _____



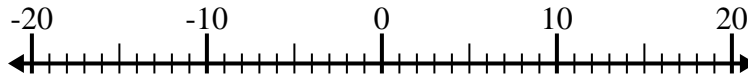
8) $1 - (-6) =$ _____



9) $(-13) + (-5) =$ _____



10) $(-6) - (-8) =$ _____



Risposte

1. _____

2. _____

3. _____

4. _____

5. _____

6. _____

7. _____

8. _____

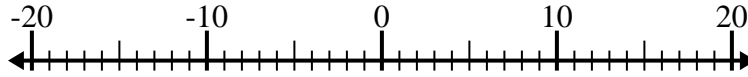
9. _____

10. _____

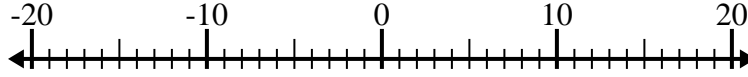


Risolvi ogni operazione. Usa la linea numerata se necessario.

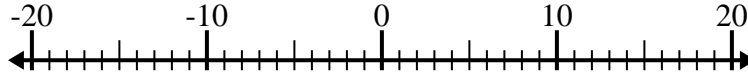
1) $7 + (-12) = \underline{-5}$



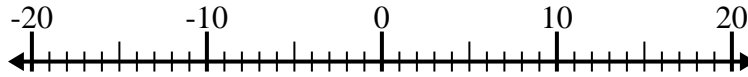
2) $(-6) - (-12) = \underline{6}$



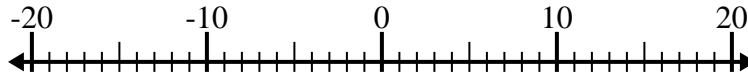
3) $(-5) + 1 = \underline{-4}$



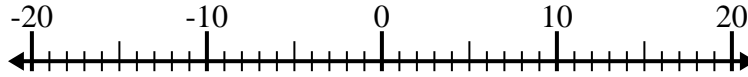
4) $12 - (-3) = \underline{15}$



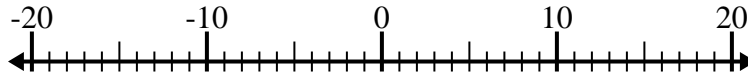
5) $10 + (-12) = \underline{-2}$



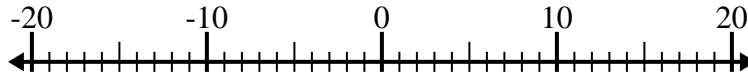
6) $(-15) + 7 = \underline{-8}$



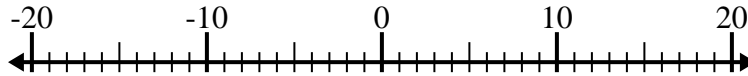
7) $(-13) - 2 = \underline{-15}$



8) $1 - (-6) = \underline{7}$



9) $(-13) + (-5) = \underline{-18}$



10) $(-6) - (-8) = \underline{2}$



Risposte

1. -5

2. 6

3. -4

4. 15

5. -2

6. -8

7. -15

8. 7

9. -18

10. 2