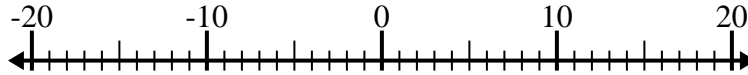


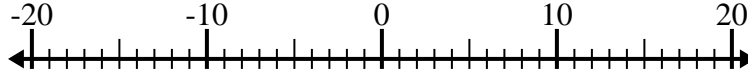


Risolvi ogni operazione. Usa la linea numerata se necessario.

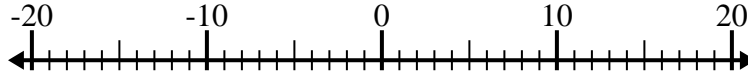
1) $(-3) - 9 =$ _____



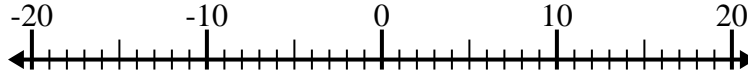
2) $(-9) - 6 =$ _____



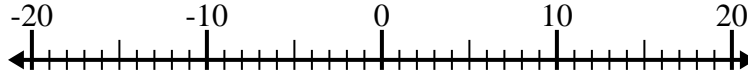
3) $(-11) - (-12) =$ _____



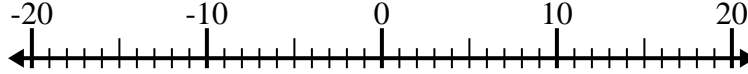
4) $(-12) + (-6) =$ _____



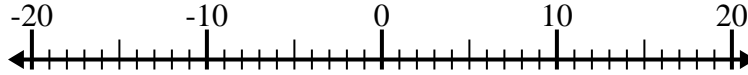
5) $(-13) - (-10) =$ _____



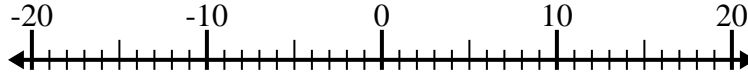
6) $(-6) + 1 =$ _____



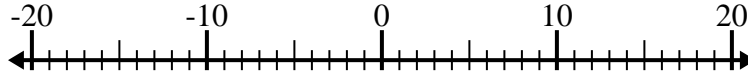
7) $(-6) + 3 =$ _____



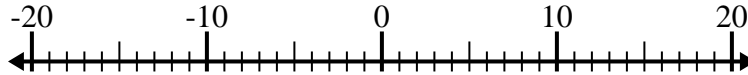
8) $13 + (-2) =$ _____



9) $5 - (-13) =$ _____



10) $9 - (-7) =$ _____



Risposte

1. _____

2. _____

3. _____

4. _____

5. _____

6. _____

7. _____

8. _____

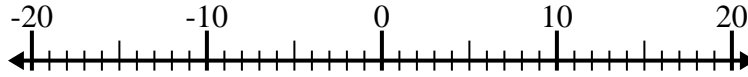
9. _____

10. _____

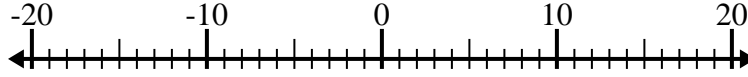


Risolvi ogni operazione. Usa la linea numerata se necessario.

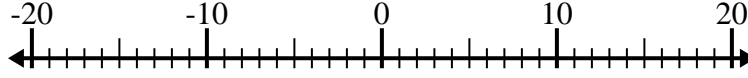
1) $(-3) - 9 = \underline{-12}$



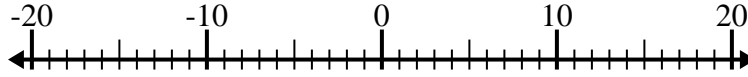
2) $(-9) - 6 = \underline{-15}$



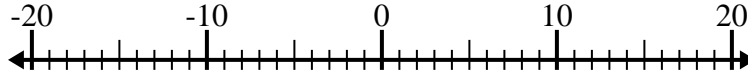
3) $(-11) - (-12) = \underline{1}$



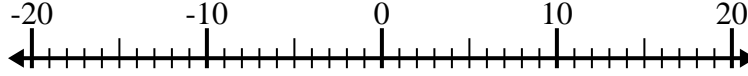
4) $(-12) + (-6) = \underline{-18}$



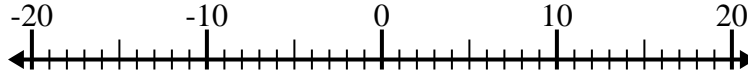
5) $(-13) - (-10) = \underline{-3}$



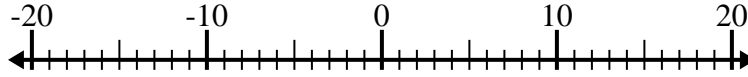
6) $(-6) + 1 = \underline{-5}$



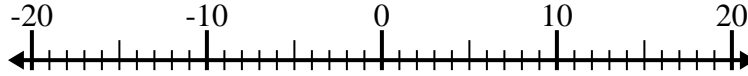
7) $(-6) + 3 = \underline{-3}$



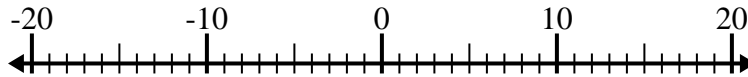
8) $13 + (-2) = \underline{11}$



9) $5 - (-13) = \underline{18}$



10) $9 - (-7) = \underline{16}$



Risposte

1. -12

2. -15

3. 1

4. -18

5. -3

6. -5

7. -3

8. 11

9. 18

10. 16