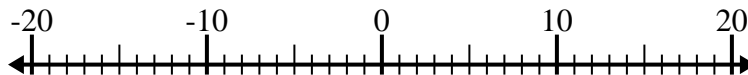


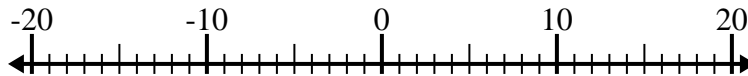


Risolvi ogni operazione. Usa la linea numerata se necessario.

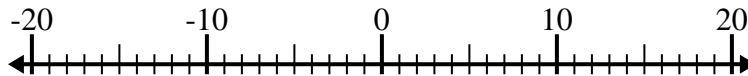
1) $13 - (-2) =$ _____



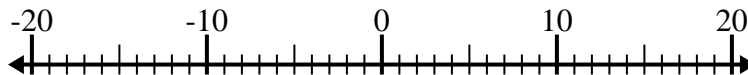
2) $(-4) - (-10) =$ _____



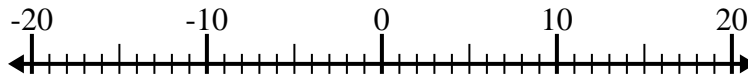
3) $(-13) - (-9) =$ _____



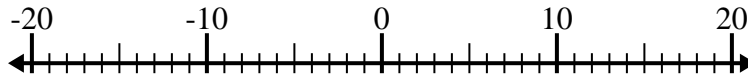
4) $12 + (-15) =$ _____



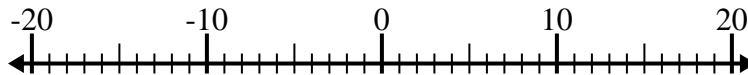
5) $4 + (-14) =$ _____



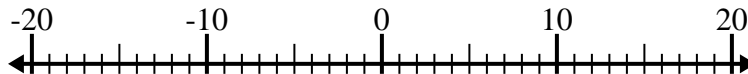
6) $(-2) + 14 =$ _____



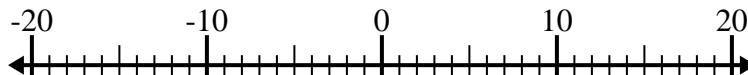
7) $1 - (-5) =$ _____



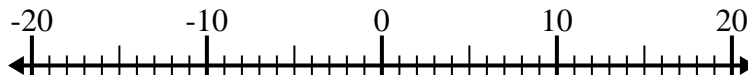
8) $(-11) - 2 =$ _____



9) $9 + (-15) =$ _____



10) $11 - (-9) =$ _____



Risposte

1. _____

2. _____

3. _____

4. _____

5. _____

6. _____

7. _____

8. _____

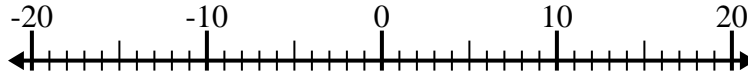
9. _____

10. _____

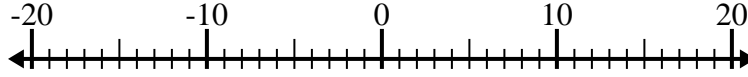


Risolvi ogni operazione. Usa la linea numerata se necessario.

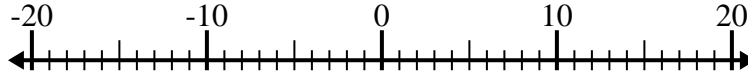
1) $13 - (-2) = \underline{15}$



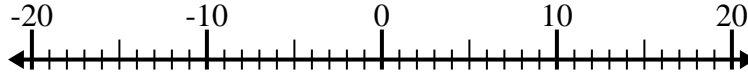
2) $(-4) - (-10) = \underline{6}$



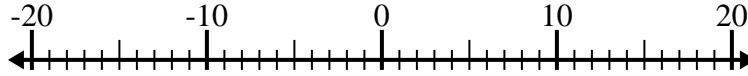
3) $(-13) - (-9) = \underline{-4}$



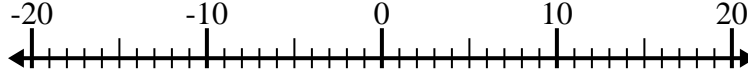
4) $12 + (-15) = \underline{-3}$



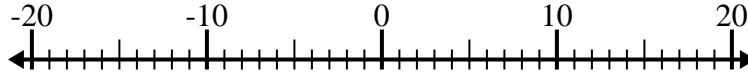
5) $4 + (-14) = \underline{-10}$



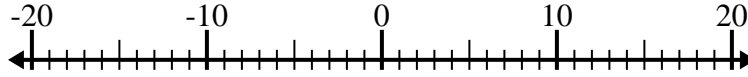
6) $(-2) + 14 = \underline{12}$



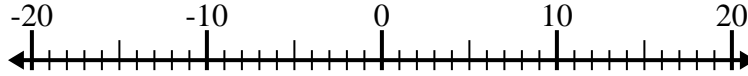
7) $1 - (-5) = \underline{6}$



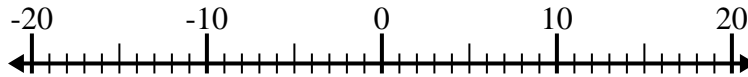
8) $(-11) - 2 = \underline{-13}$



9) $9 + (-15) = \underline{-6}$



10) $11 - (-9) = \underline{20}$



Risposte

1. 15

2. 6

3. -4

4. -3

5. -10

6. 12

7. 6

8. -13

9. -6

10. 20