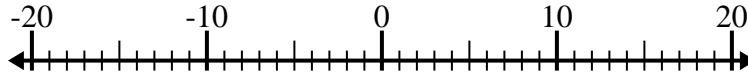


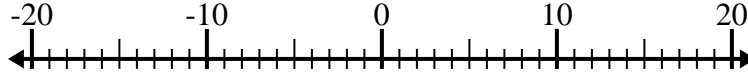


Risolvi ogni operazione. Usa la linea numerata se necessario.

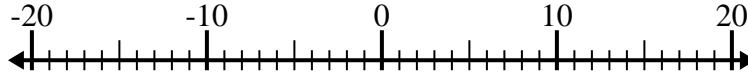
1) $(-5) - (-7) =$ _____



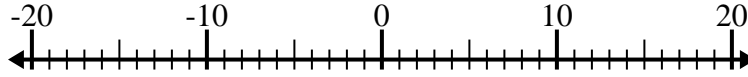
2) $11 - (-5) =$ _____



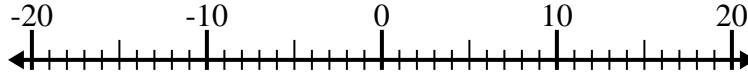
3) $(-7) + (-13) =$ _____



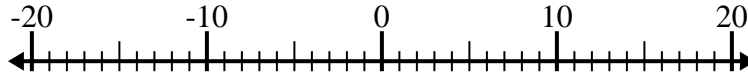
4) $(-10) + 12 =$ _____



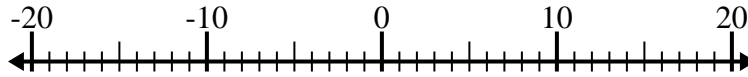
5) $(-3) - 10 =$ _____



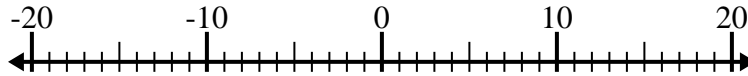
6) $9 - (-6) =$ _____



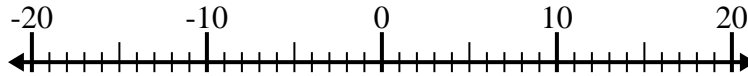
7) $(-11) + (-5) =$ _____



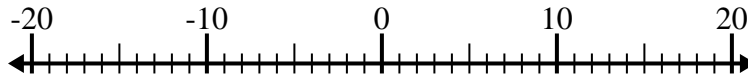
8) $(-7) - 4 =$ _____



9) $(-6) + 1 =$ _____



10) $7 - (-10) =$ _____



Risposte

1. _____

2. _____

3. _____

4. _____

5. _____

6. _____

7. _____

8. _____

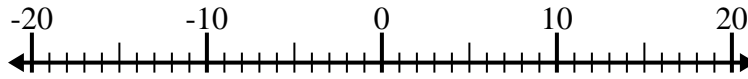
9. _____

10. _____

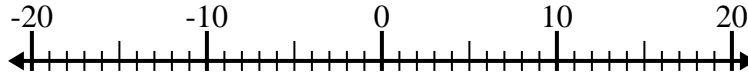


Risolvi ogni operazione. Usa la linea numerata se necessario.

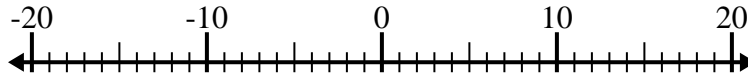
1) $(-5) - (-7) = \underline{2}$



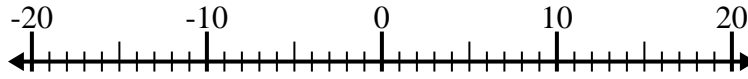
2) $11 - (-5) = \underline{16}$



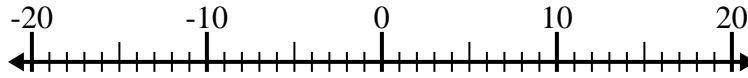
3) $(-7) + (-13) = \underline{-20}$



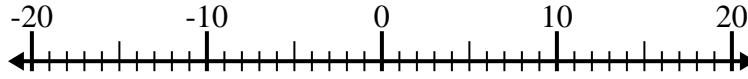
4) $(-10) + 12 = \underline{2}$



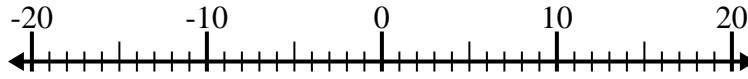
5) $(-3) - 10 = \underline{-13}$



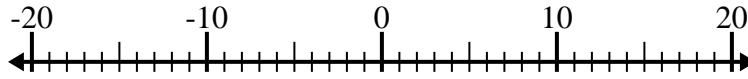
6) $9 - (-6) = \underline{15}$



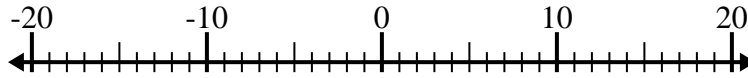
7) $(-11) + (-5) = \underline{-16}$



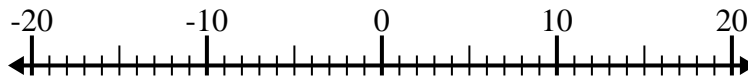
8) $(-7) - 4 = \underline{-11}$



9) $(-6) + 1 = \underline{-5}$



10) $7 - (-10) = \underline{17}$



Risposte

1. 2

2. 16

3. -20

4. 2

5. -13

6. 15

7. -16

8. -11

9. -5

10. 17