



Determina come scriveresti ogni gruppo sotto forma di moltiplicazione.

Es)

**Risposte**

Es.  $3 \times 6 = 18$

1. \_\_\_\_\_

2. \_\_\_\_\_

3. \_\_\_\_\_

4. \_\_\_\_\_

5. \_\_\_\_\_

6. \_\_\_\_\_

7. \_\_\_\_\_

8. \_\_\_\_\_

1)

2)

3)

4)

5)

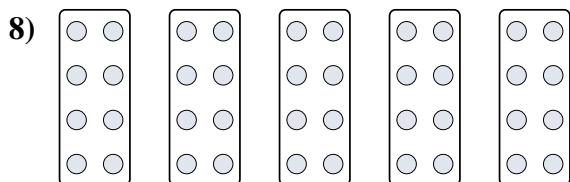
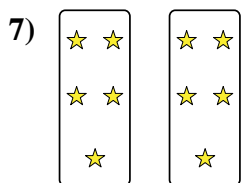


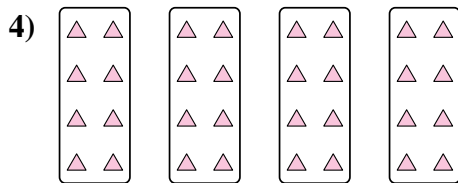
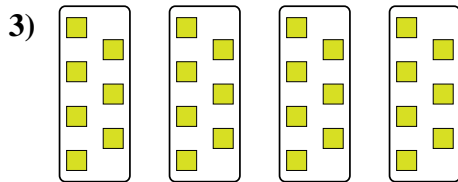
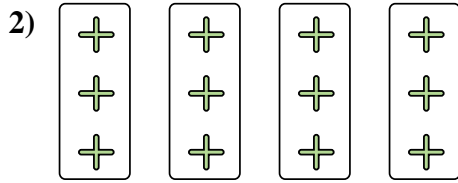
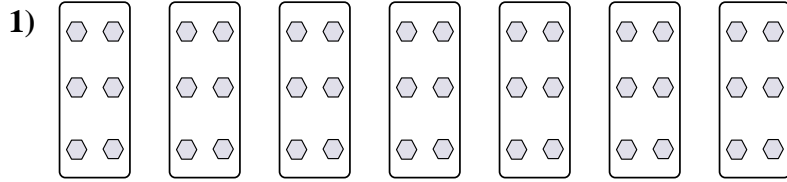
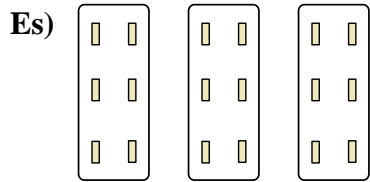
6)

7)

8)



Determina come scriveresti ogni gruppo sotto forma di moltiplicazione.



**Risposte**

Es.  $3 \times 6 = 18$

1.  $7 \times 6 = 42$

2.  $4 \times 3 = 12$

3.  $4 \times 7 = 28$

4.  $4 \times 8 = 32$

5.  $2 \times 6 = 12$

6.  $6 \times 5 = 30$

7.  $2 \times 5 = 10$

8.  $5 \times 8 = 40$