



Determina come scriveresti ogni gruppo sotto forma di moltiplicazione.

**Risposte**

Es)

Es.  $10 \times 10 = 100$

1. \_\_\_\_\_

1)

2. \_\_\_\_\_

2)

3. \_\_\_\_\_

3)

4. \_\_\_\_\_

5. \_\_\_\_\_

6. \_\_\_\_\_

7. \_\_\_\_\_

8. \_\_\_\_\_

4)

5)


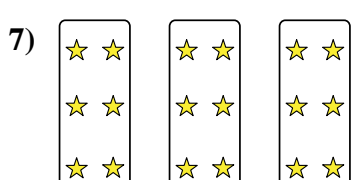

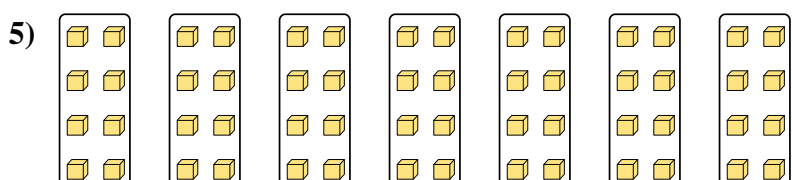
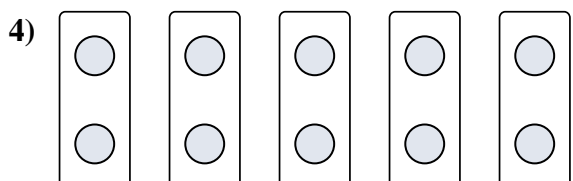
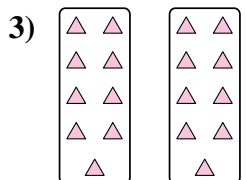
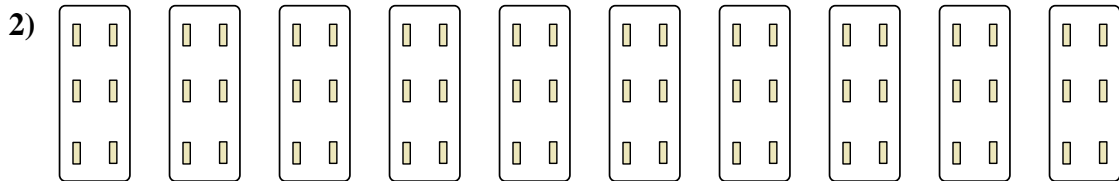

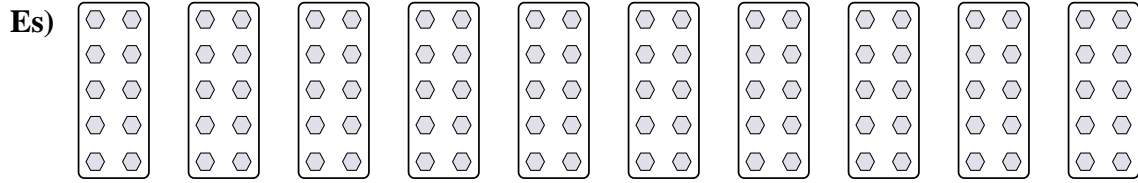
6)

7)

8)



Determina come scriveresti ogni gruppo sotto forma di moltiplicazione.



**Risposte**

Es.  $10 \times 10 = 100$

1.  $5 \times 3 = 15$

2.  $10 \times 6 = 60$

3.  $2 \times 9 = 18$

4.  $5 \times 2 = 10$

5.  $7 \times 8 = 56$

6.  $2 \times 7 = 14$

7.  $3 \times 6 = 18$

8.  $4 \times 6 = 24$