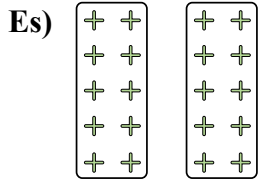


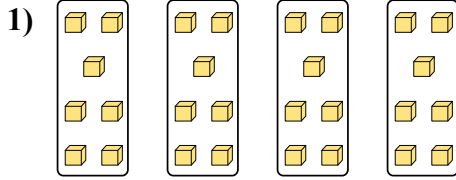


Determina come scriveresti ogni gruppo sotto forma di moltiplicazione.

Risposte



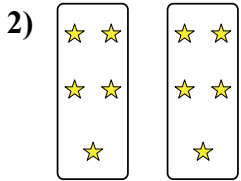
Es. $2 \times 10 = 20$



1. _____


2. _____

3. _____



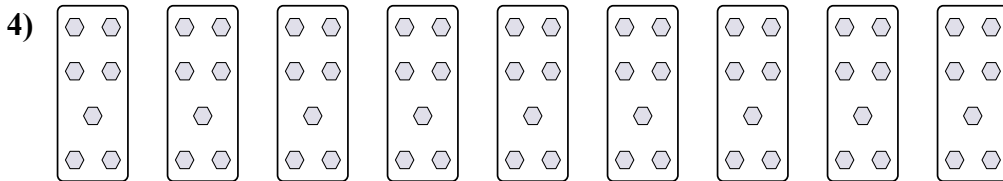
4. _____

5. _____


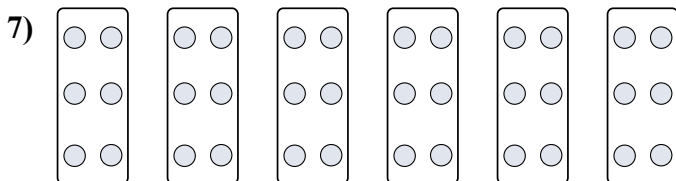
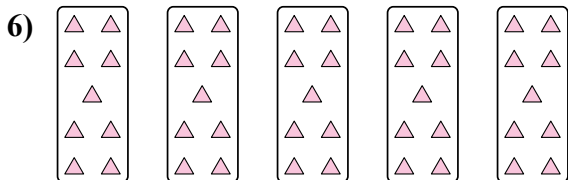



6. _____

7. _____


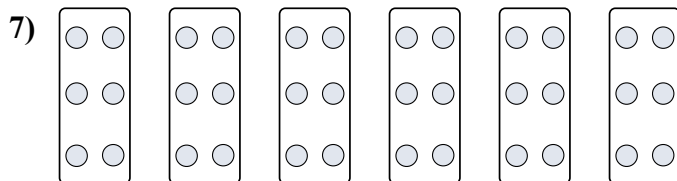
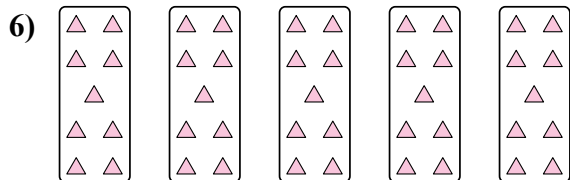

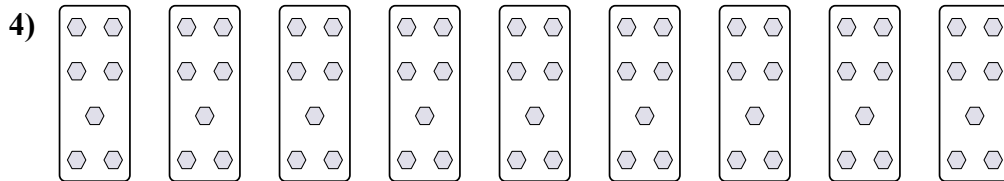

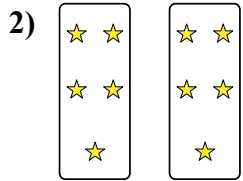
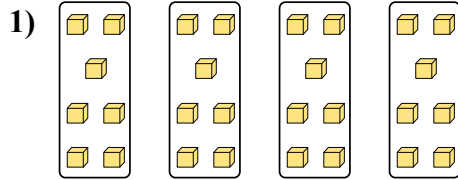
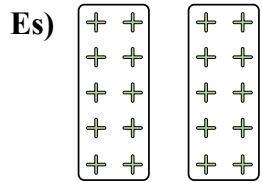


8. _____





Determina come scriveresti ogni gruppo sotto forma di moltiplicazione.



Risposte

Es. $2 \times 10 = 20$

1. $4 \times 7 = 28$

2. $2 \times 5 = 10$

3. $2 \times 6 = 12$

4. $9 \times 7 = 63$

5. $3 \times 8 = 24$

6. $5 \times 9 = 45$

7. $6 \times 6 = 36$

8. $4 \times 3 = 12$