



Determina come scriveresti ogni gruppo sotto forma di moltiplicazione.

**Risposte**

Es)

Es.  $8 \times 9 = 72$

1. \_\_\_\_\_

1)

2. \_\_\_\_\_

3. \_\_\_\_\_

2)

4. \_\_\_\_\_

5. \_\_\_\_\_

3)

6. \_\_\_\_\_

7. \_\_\_\_\_

4)

8. \_\_\_\_\_

5)


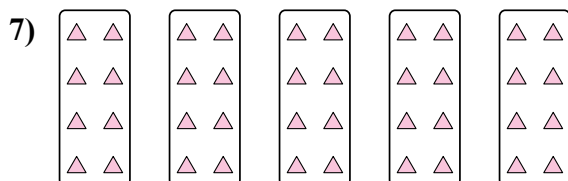
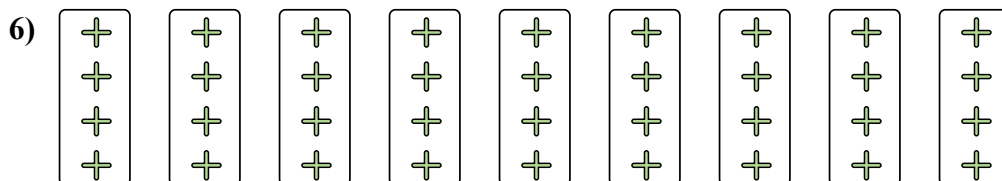
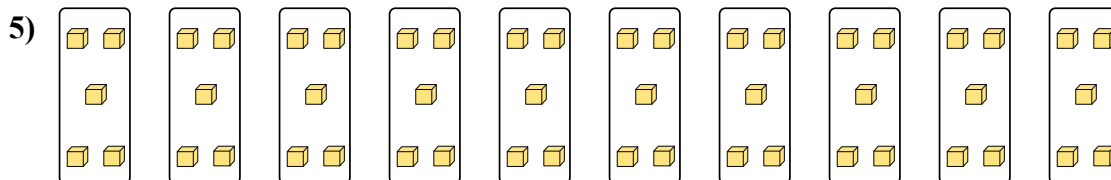
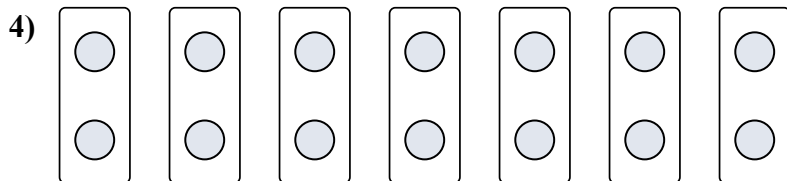

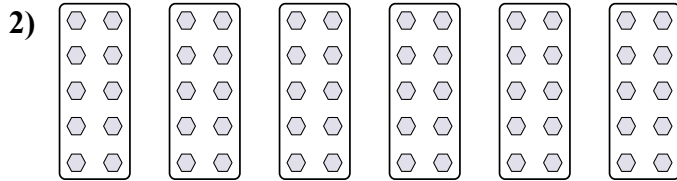

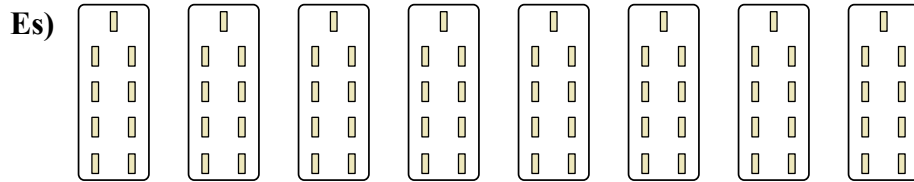
6)

7)

8)



Determina come scriveresti ogni gruppo sotto forma di moltiplicazione.



**Risposte**

Es.  $8 \times 9 = 72$

1.  $5 \times 3 = 15$

2.  $6 \times 10 = 60$

3.  $5 \times 6 = 30$

4.  $7 \times 2 = 14$

5.  $10 \times 5 = 50$

6.  $9 \times 4 = 36$

7.  $5 \times 8 = 40$

8.  $4 \times 9 = 36$