




Determina come scriveresti ogni gruppo sotto forma di moltiplicazione.


**Risposte**

Es)



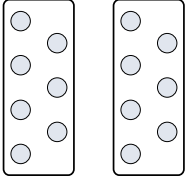
Es.  $2 \times 4 = 8$

1)



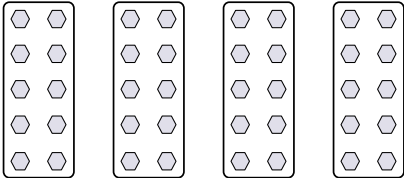
1. \_\_\_\_\_

2)




2. \_\_\_\_\_

3)



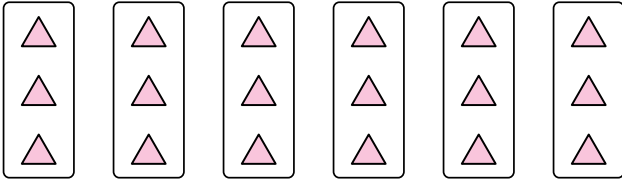
3. \_\_\_\_\_

4)



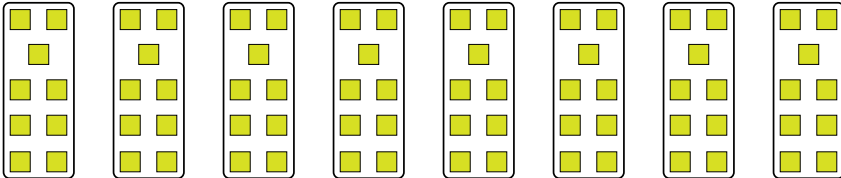
4. \_\_\_\_\_

5)



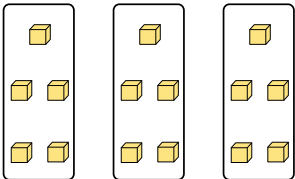
5. \_\_\_\_\_

6)



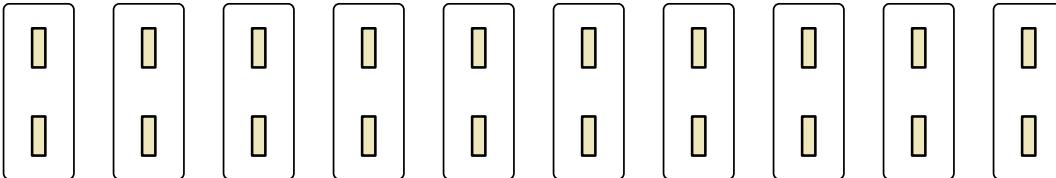
6. \_\_\_\_\_

7)



7. \_\_\_\_\_

8)




8. \_\_\_\_\_




Determina come scriveresti ogni gruppo sotto forma di moltiplicazione.

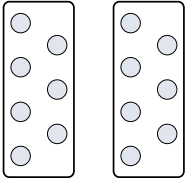
Es)



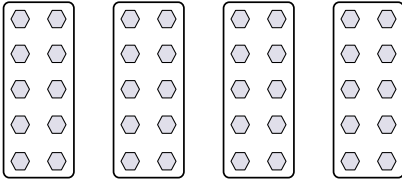
1)




2)



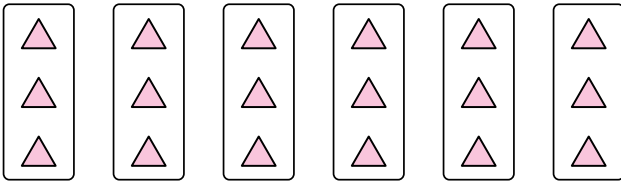
3)



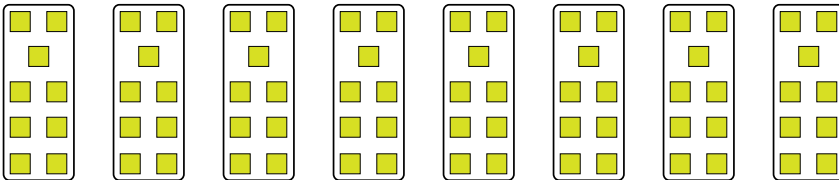
4)



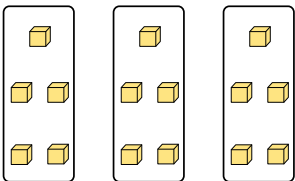
5)




6)



7)



8)



**Risposte**

Es.  $2 \times 4 = 8$

1.  $2 \times 9 = 18$

2.  $2 \times 7 = 14$

3.  $4 \times 10 = 40$

4.  $9 \times 10 = 90$

5.  $6 \times 3 = 18$

6.  $8 \times 9 = 72$

7.  $3 \times 5 = 15$

8.  $10 \times 2 = 20$