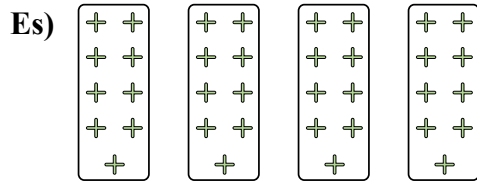


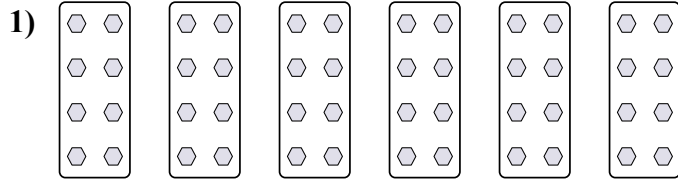


Determina come scriveresti ogni gruppo sotto forma di moltiplicazione.

Risposte




Es. $4 \times 9 = 36$



1. _____

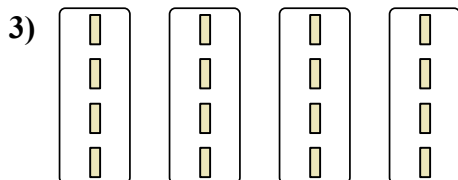
2. _____



3. _____

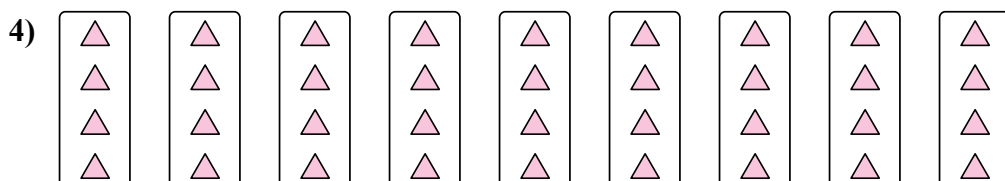
4. _____

5. _____

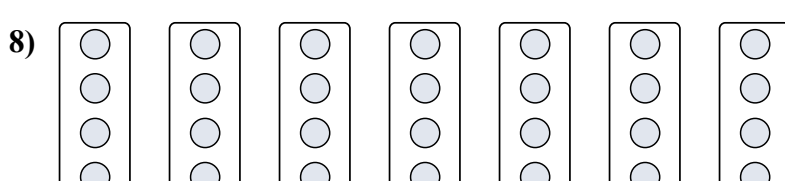


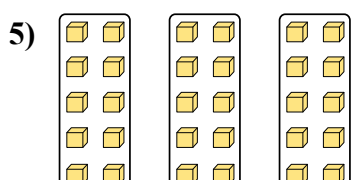


6. _____

7. _____

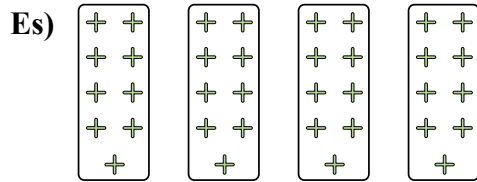


8. _____



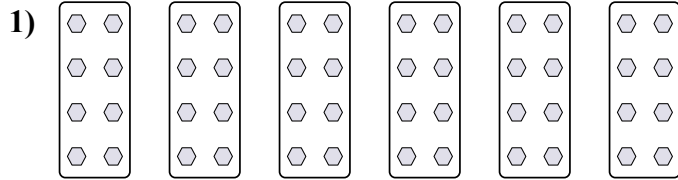


Determina come scriveresti ogni gruppo sotto forma di moltiplicazione.




Risposte

Es. $4 \times 9 = 36$

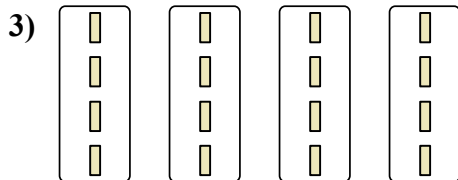


1. $6 \times 8 = 48$



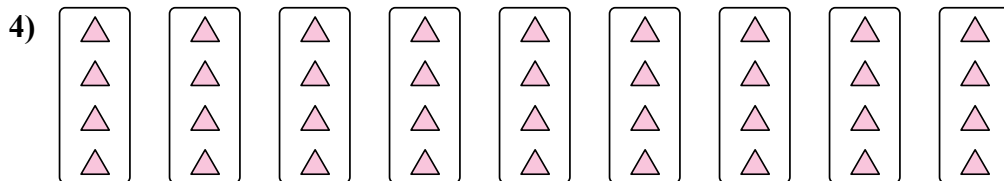
2. $2 \times 4 = 8$

3. $4 \times 4 = 16$



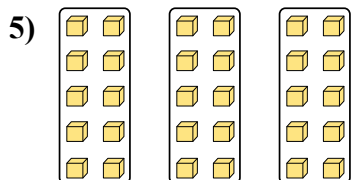
4. $9 \times 4 = 36$

5. $3 \times 10 = 30$



6. $3 \times 3 = 9$

7. $2 \times 3 = 6$



8. $7 \times 4 = 28$

