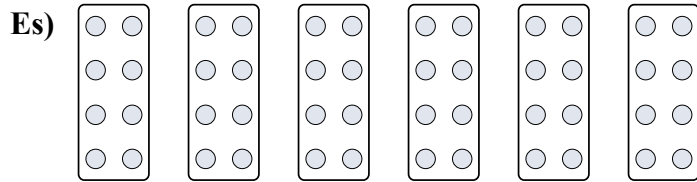


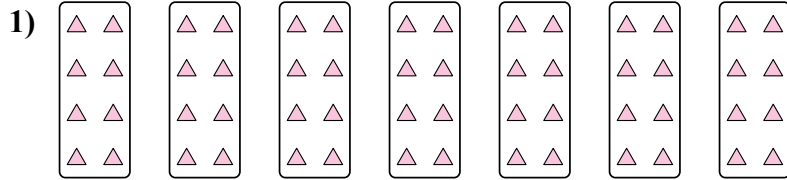


Determina come scriveresti ogni gruppo sotto forma di moltiplicazione.


**Risposte**




Es.  $6 \times 8 = 48$




1. \_\_\_\_\_



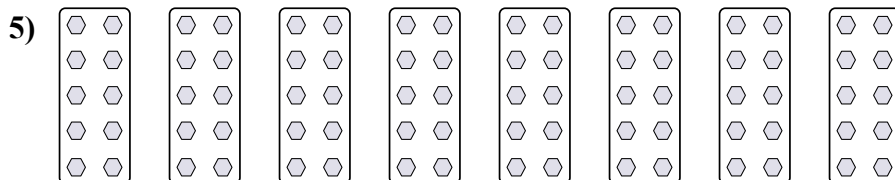
2. \_\_\_\_\_



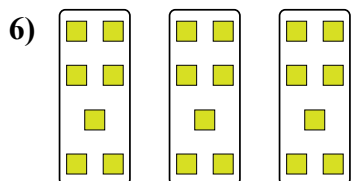
3. \_\_\_\_\_



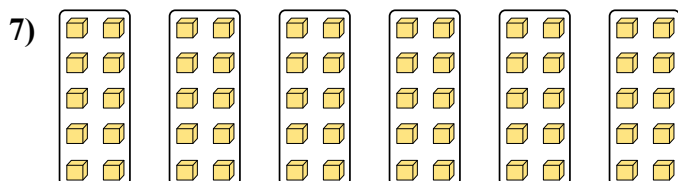
4. \_\_\_\_\_



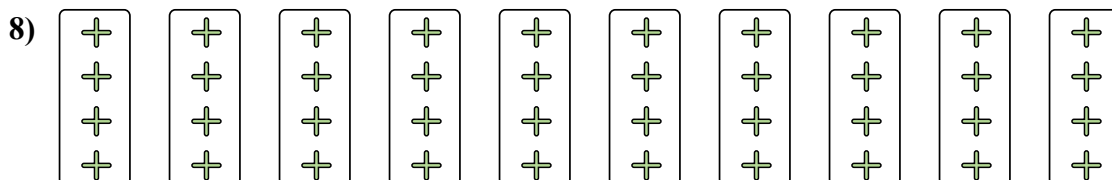
5. \_\_\_\_\_



6. \_\_\_\_\_



7. \_\_\_\_\_

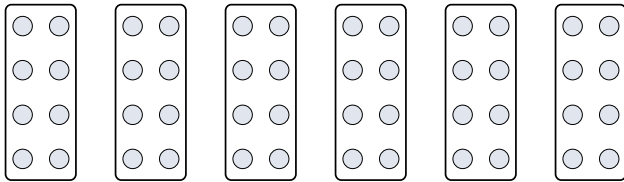


8. \_\_\_\_\_



Determina come scriveresti ogni gruppo sotto forma di moltiplicazione.

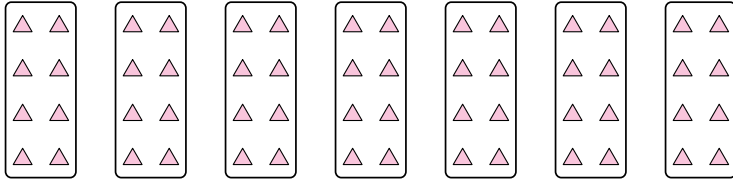
Es)



**Risposte**

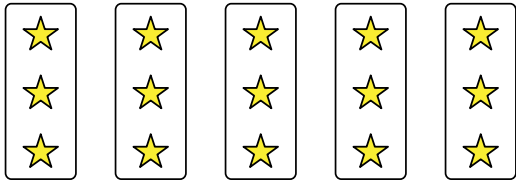
Es.  $6 \times 8 = 48$

1)




1.  $7 \times 8 = 56$

2)




2.  $5 \times 3 = 15$

3)



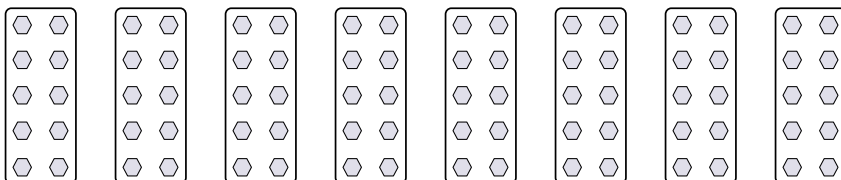
3.  $8 \times 8 = 64$

4)



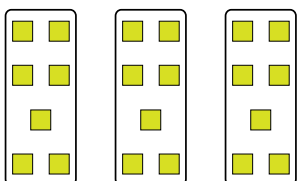
4.  $2 \times 2 = 4$

5)



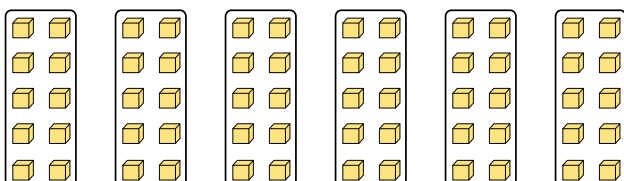
5.  $8 \times 10 = 80$

6)



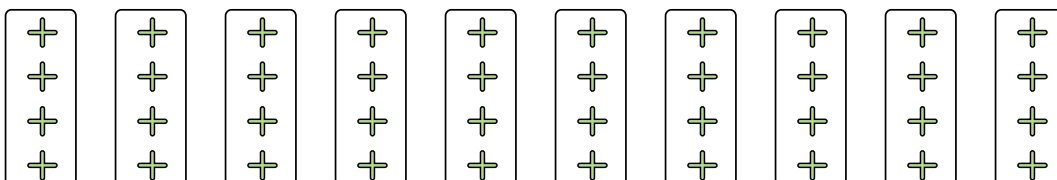
6.  $3 \times 7 = 21$

7)



7.  $6 \times 10 = 60$

8)



8.  $10 \times 4 = 40$