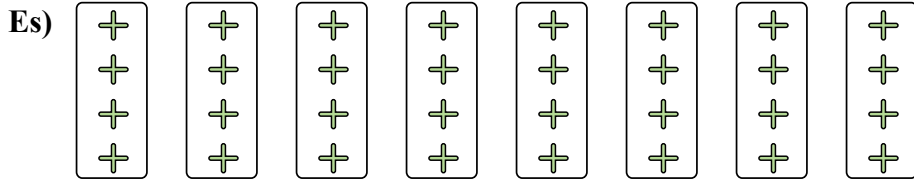


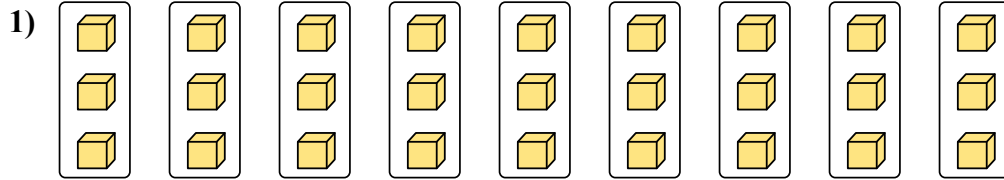


Determina come scriveresti ogni gruppo sotto forma di moltiplicazione.

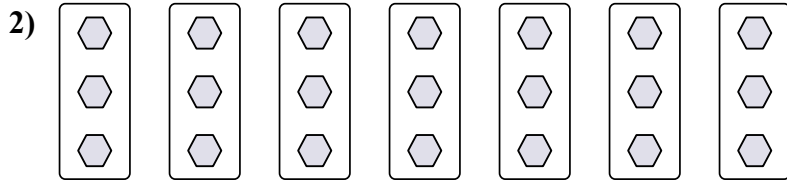
**Risposte**




Es.  $8 \times 4 = 32$



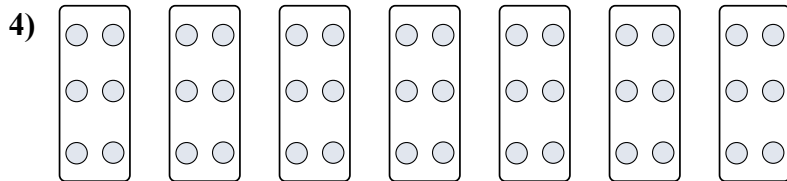
1. \_\_\_\_\_



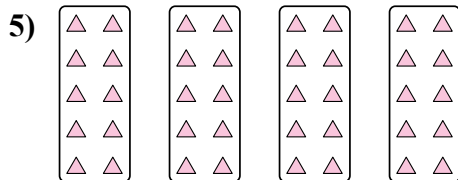
2. \_\_\_\_\_



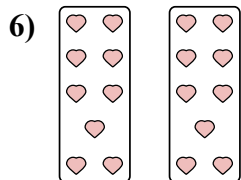
3. \_\_\_\_\_



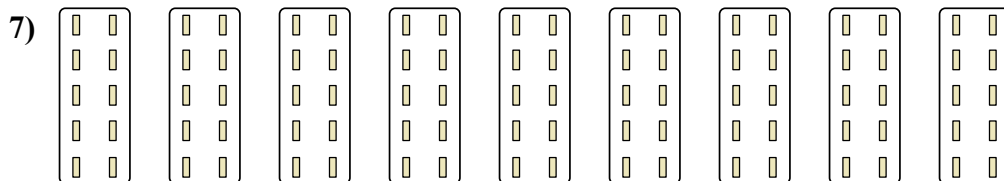
4. \_\_\_\_\_




5. \_\_\_\_\_



6. \_\_\_\_\_



7. \_\_\_\_\_

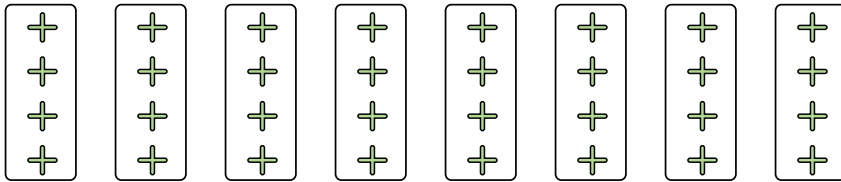


8. \_\_\_\_\_



Determina come scriveresti ogni gruppo sotto forma di moltiplicazione.

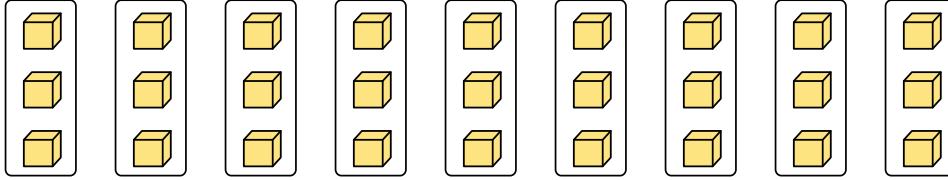
Es)



Es.

$8 \times 4 = 32$

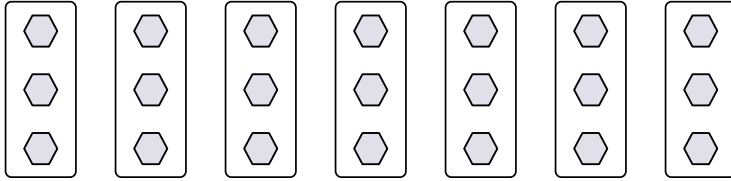
1)



1.

$9 \times 3 = 27$

2)



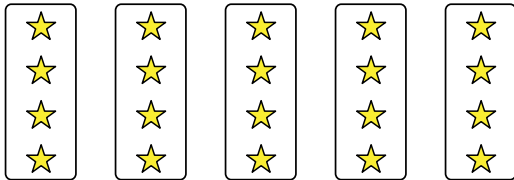
2.

$7 \times 3 = 21$

3.

$5 \times 4 = 20$

3)



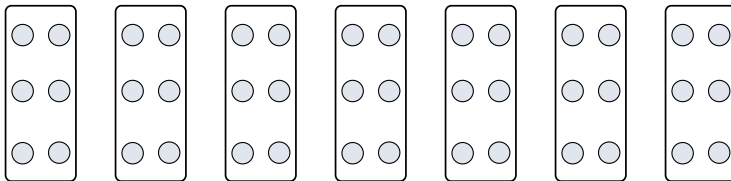
4.

$7 \times 6 = 42$

5.

$4 \times 10 = 40$

4)



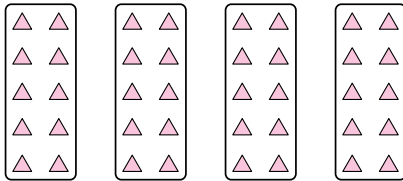
6.

$2 \times 9 = 18$

7.

$9 \times 10 = 90$


5)



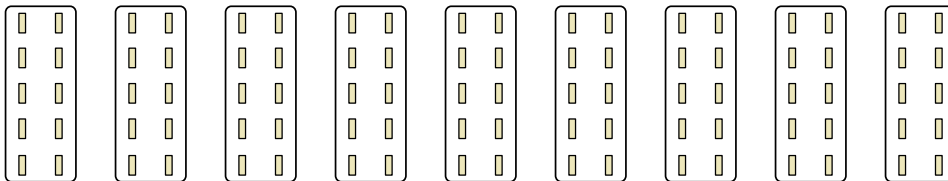
8.

$3 \times 5 = 15$

6)



7)



8)

