
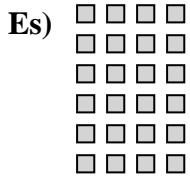




Scrivi ogni blocco sotto forma di moltiplicazione e calcola il risultato.

**Risposte**



Es. 6 × 4 = 24

1. \_\_\_\_\_

2. \_\_\_\_\_

3. \_\_\_\_\_

4. \_\_\_\_\_

5. \_\_\_\_\_

6. \_\_\_\_\_






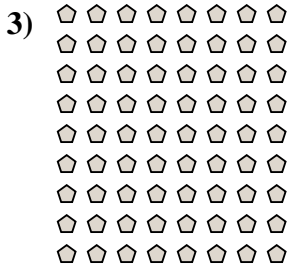
7. \_\_\_\_\_

8. \_\_\_\_\_

9. \_\_\_\_\_


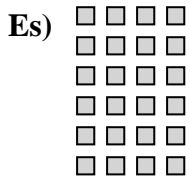
10. \_\_\_\_\_

11. \_\_\_\_\_





Scrivi ogni blocco sotto forma di moltiplicazione e calcola il risultato.



**Risposte**

Es.  $6 \times 4 = 24$

1.  $8 \times 2 = 16$

2.  $6 \times 5 = 30$

3.  $9 \times 8 = 72$

4.  $10 \times 8 = 80$

5.  $2 \times 9 = 18$

6.  $4 \times 9 = 36$

7.  $7 \times 3 = 21$

8.  $3 \times 6 = 18$

9.  $5 \times 3 = 15$

10.  $10 \times 6 = 60$

11.  $5 \times 10 = 50$

