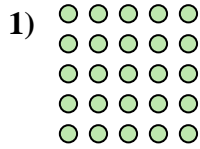
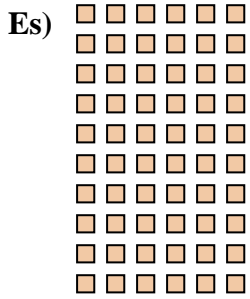




Scrivi ogni blocco sotto forma di moltiplicazione e calcola il risultato.

Risposte




Es. 10 × 6 = 60

1. _____

2. _____

3. _____

4. _____

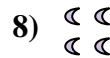


5. _____

6. _____

7. _____

8. _____



9. _____

10. _____

11. _____

