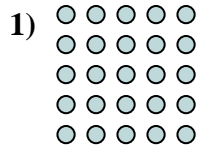





Scrivi ogni blocco sotto forma di moltiplicazione e calcola il risultato.



Risposte

Es. 5 × 7 = 35

1. _____

2. _____

3. _____

4. _____

5. _____

6. _____









7. _____

8. _____

9. _____


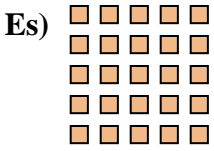
10. _____

11. _____





Scrivi ogni blocco sotto forma di moltiplicazione e calcola il risultato.



Risposte

Es. 5 × 5 = 25

1. 8 × 10 = 80

2. 10 × 4 = 40

3. 10 × 9 = 90

4. 5 × 9 = 45

5. 8 × 4 = 32

6. 7 × 9 = 63

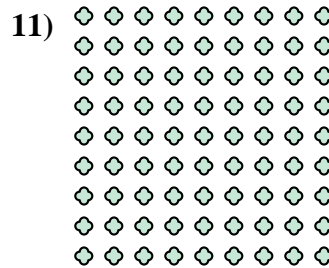

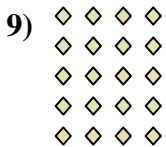

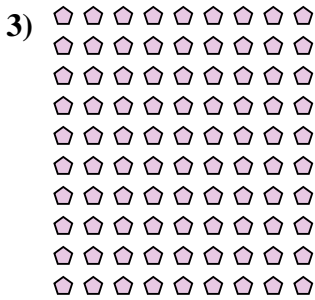
7. 9 × 2 = 18

8. 2 × 8 = 16

9. 5 × 4 = 20


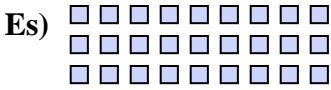
10. 5 × 7 = 35

11. 9 × 9 = 81





Scrivi ogni blocco sotto forma di moltiplicazione e calcola il risultato.



Risposte

Es. $3 \times 9 = 27$

1. $9 \times 3 = 27$

2. $4 \times 10 = 40$

3. $9 \times 6 = 54$

4. $8 \times 7 = 56$

5. $9 \times 4 = 36$

6. $10 \times 5 = 50$



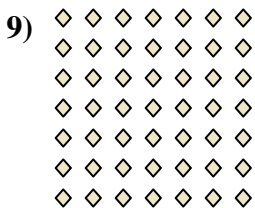

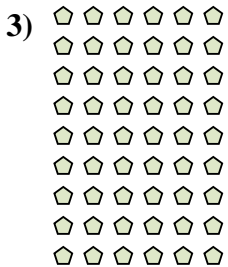
7. $8 \times 8 = 64$

8. $4 \times 5 = 20$

9. $7 \times 7 = 49$


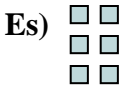
10. $5 \times 9 = 45$

11. $4 \times 6 = 24$





Scrivi ogni blocco sotto forma di moltiplicazione e calcola il risultato.



Risposte

Es. $3 \times 2 = 6$

1. $6 \times 2 = 12$

2. $9 \times 10 = 90$

3. $7 \times 5 = 35$

4. $8 \times 5 = 40$

5. $10 \times 6 = 60$

6. $10 \times 9 = 90$

7. $4 \times 7 = 28$

8. $7 \times 4 = 28$

9. $6 \times 7 = 42$

10. $9 \times 4 = 36$

11. $7 \times 7 = 49$

