
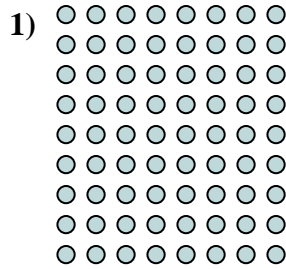







Scrivi ogni blocco sotto forma di moltiplicazione e calcola il risultato.



**Risposte**

Es.  $3 \times 9 = 27$

1.  $9 \times 8 = 72$

2.  $8 \times 10 = 80$

3.  $7 \times 8 = 56$

4.  $7 \times 4 = 28$

5.  $8 \times 4 = 32$

6.  $2 \times 3 = 6$

7.  $2 \times 6 = 12$

8.  $9 \times 9 = 81$

9.  $5 \times 3 = 15$

10.  $6 \times 5 = 30$

11.  $8 \times 5 = 40$

