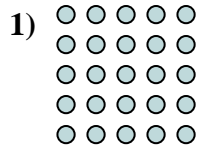





Scrivi ogni blocco sotto forma di moltiplicazione e calcola il risultato.



**Risposte**

Es. 5 x 7 = 35

1. \_\_\_\_\_

2. \_\_\_\_\_

3. \_\_\_\_\_

4. \_\_\_\_\_

5. \_\_\_\_\_

6. \_\_\_\_\_









7. \_\_\_\_\_

8. \_\_\_\_\_

9. \_\_\_\_\_

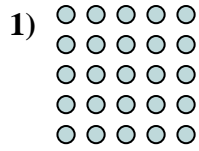

10. \_\_\_\_\_

11. \_\_\_\_\_





Scrivi ogni blocco sotto forma di moltiplicazione e calcola il risultato.



Risposte

Es. 5 × 7 = 35

1. 5 × 5 = 25

2. 3 × 8 = 24

3. 7 × 8 = 56

4. 8 × 7 = 56

5. 7 × 10 = 70

6. 4 × 6 = 24

7. 5 × 6 = 30

8. 9 × 7 = 63

9. 7 × 4 = 28

10. 6 × 7 = 42

11. 2 × 10 = 20

