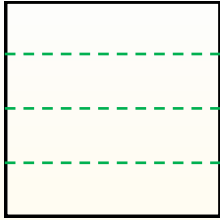


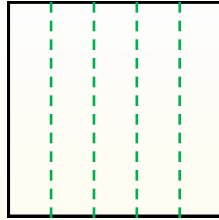


Dividi i rettangoli come descritto e poi conta per trovare il numero delle divisioni.

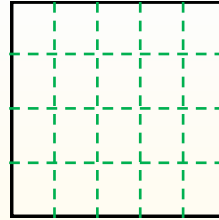
Le righe vanno da destra a sinistra.




Le colonne vanno dall'alto in basso.




Questo ha 4 righe e 5 colonne.
E' stato diviso in 20 quadrati in tutto.




1) 2 righe
3 colonne




2) 3 righe
5 colonne




3) 4 righe
2 colonne




4) 4 righe
3 colonne




5) 3 righe
2 colonne



6) 2 righe
5 colonne




7) 3 righe
4 colonne



8) 2 righe
2 colonne



9) 5 righe
5 colonne



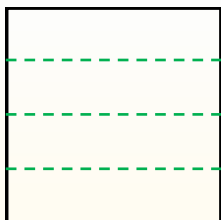
Risposte

- 1. _____
- 2. _____
- 3. _____
- 4. _____
- 5. _____
- 6. _____
- 7. _____
- 8. _____
- 9. _____

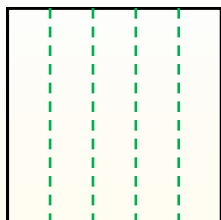


Dividi i rettangoli come descritto e poi conta per trovare il numero delle divisioni.

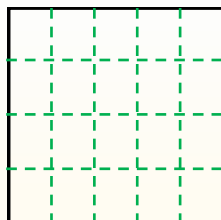
Le righe vanno da destra a sinistra.



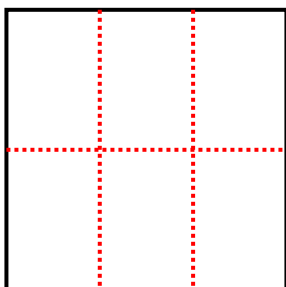
Le colonne vanno dall'alto in basso.



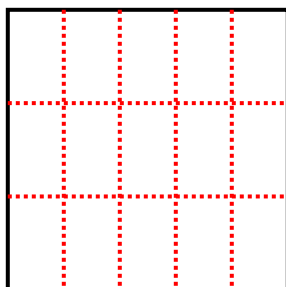
Questo ha 4 righe e 5 colonne. E' stato diviso in 20 quadrati in tutto.



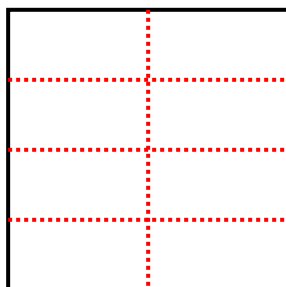
1) 2 righe
3 colonne




2) 3 righe
5 colonne



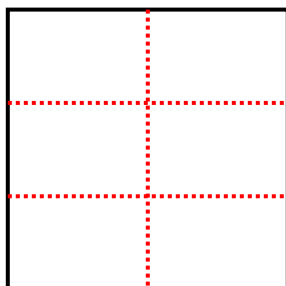
3) 4 righe
2 colonne



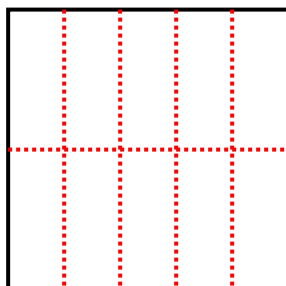
4) 4 righe
3 colonne



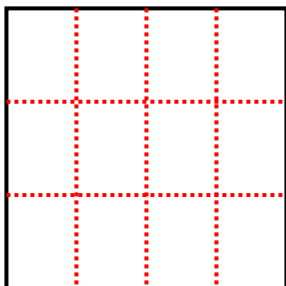
5) 3 righe
2 colonne



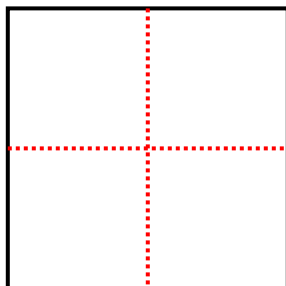
6) 2 righe
5 colonne



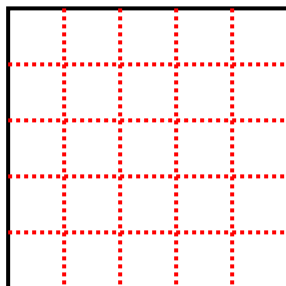
7) 3 righe
4 colonne



8) 2 righe
2 colonne



9) 5 righe
5 colonne



Risposte

1. 6

2. 15

3. 8

4. 12

5. 6

6. 10

7. 12

8. 4

9. 25