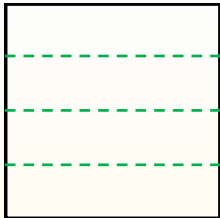


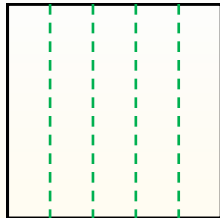


Dividi i rettangoli come descritto e poi conta per trovare il numero delle divisioni.

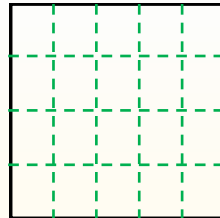
Le righe vanno da destra a sinistra.



Le colonne vanno dall'alto in basso.




Questo ha 4 righe e 5 colonne.
E' stato diviso in 20 quadrati in tutto.




Risposte

- 1. _____
- 2. _____
- 3. _____
- 4. _____
- 5. _____
- 6. _____
- 7. _____
- 8. _____
- 9. _____


1) 5 righe
5 colonne




2) 3 righe
3 colonne




3) 5 righe
2 colonne




4) 5 righe
4 colonne




5) 3 righe
4 colonne




6) 2 righe
5 colonne




7) 4 righe
4 colonne



8) 2 righe
3 colonne



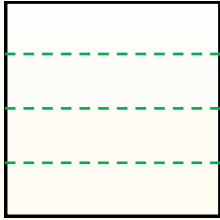
9) 5 righe
3 colonne



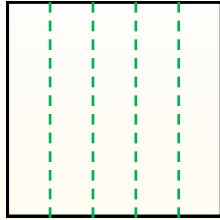


Dividi i rettangoli come descritto e poi conta per trovare il numero delle divisioni.

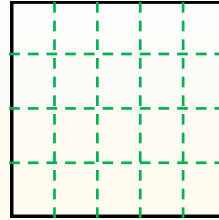
Le righe vanno da destra a sinistra.



Le colonne vanno dall'alto in basso.



Questo ha 4 righe e 5 colonne. E' stato diviso in 20 quadrati in tutto.



Risposte

1. 25

2. 9

3. 10

4. 20

5. 12

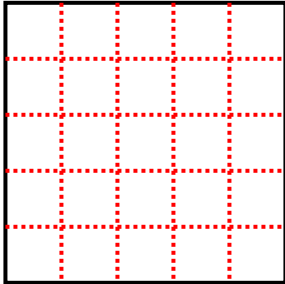
6. 10

7. 16

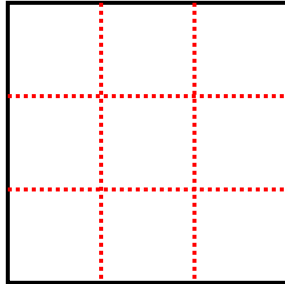
8. 6

9. 15

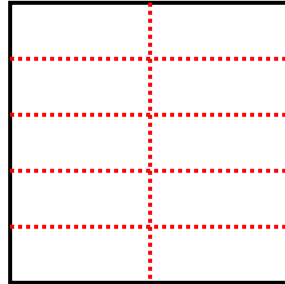
1) 5 righe
5 colonne



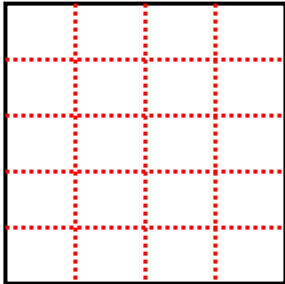
2) 3 righe
3 colonne



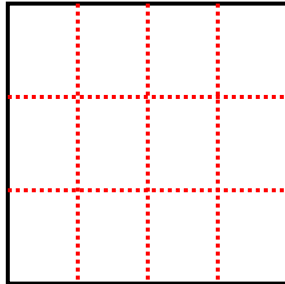
3) 5 righe
2 colonne



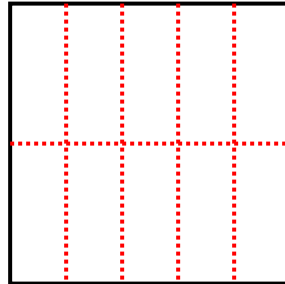
4) 5 righe
4 colonne



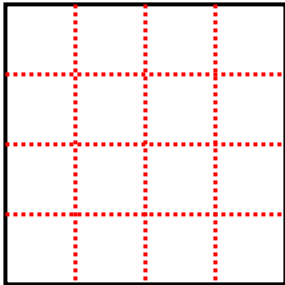
5) 3 righe
4 colonne



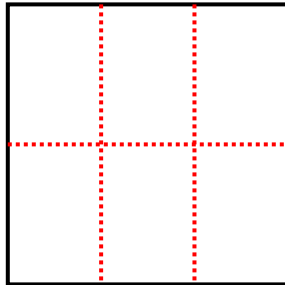
6) 2 righe
5 colonne



7) 4 righe
4 colonne



8) 2 righe
3 colonne



9) 5 righe
3 colonne

