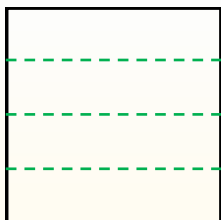


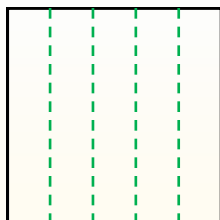


Dividi i rettangoli come descritto e poi conta per trovare il numero delle divisioni.

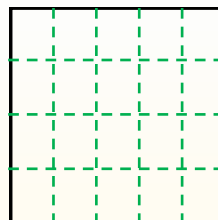
Le righe vanno da destra a sinistra.



Le colonne vanno dall'alto in basso.




Questo ha 4 righe e 5 colonne.
E' stato diviso in 20 quadrati in tutto.




Risposte

- 1. _____
- 2. _____
- 3. _____
- 4. _____
- 5. _____
- 6. _____
- 7. _____
- 8. _____
- 9. _____


**1) 2 righe
2 colonne**




**2) 3 righe
4 colonne**




**3) 5 righe
4 colonne**




**4) 3 righe
3 colonne**




**5) 2 righe
3 colonne**




**6) 3 righe
5 colonne**



**7) 5 righe
2 colonne**



**8) 4 righe
2 colonne**



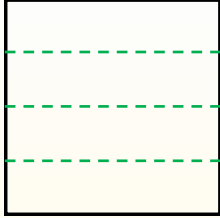
**9) 2 righe
5 colonne**



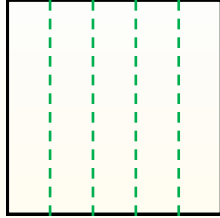


Dividi i rettangoli come descritto e poi conta per trovare il numero delle divisioni.

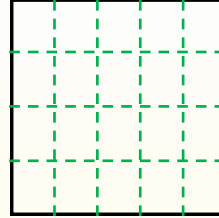
Le righe vanno da destra a sinistra.



Le colonne vanno dall'alto in basso.



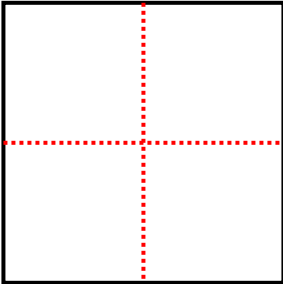
Questo ha 4 righe e 5 colonne. E' stato diviso in 20 quadrati in tutto.



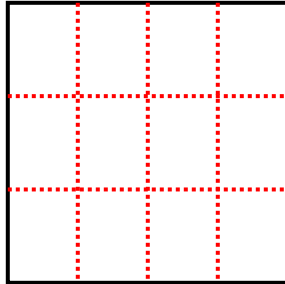
Risposte

- 1. 4
- 2. 12
- 3. 20
- 4. 9
- 5. 6
- 6. 15
- 7. 10
- 8. 8
- 9. 10

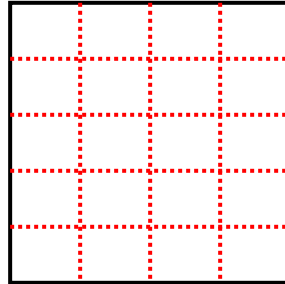
1) 2 righe
2 colonne



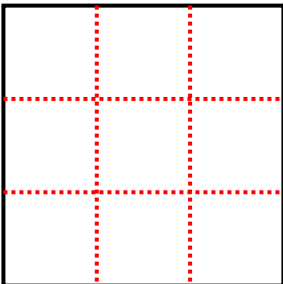
2) 3 righe
4 colonne



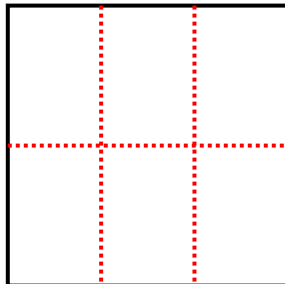
3) 5 righe
4 colonne



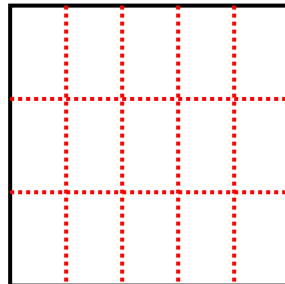
4) 3 righe
3 colonne



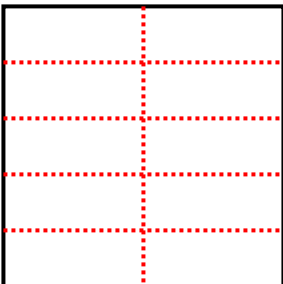
5) 2 righe
3 colonne



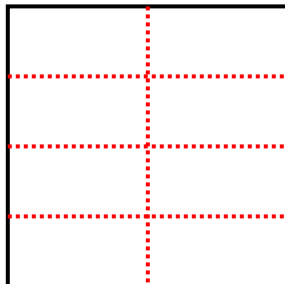
6) 3 righe
5 colonne



7) 5 righe
2 colonne



8) 4 righe
2 colonne



9) 2 righe
5 colonne

