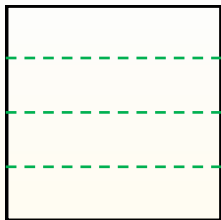


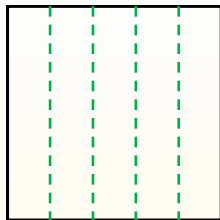


Dividi i rettangoli come descritto e poi conta per trovare il numero delle divisioni.

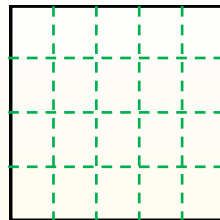
Le righe vanno da destra a sinistra.



Le colonne vanno dall'alto in basso.




Questo ha 4 righe e 5 colonne.
E' stato diviso in 20 quadrati in tutto.




Risposte

- 1. _____
- 2. _____
- 3. _____
- 4. _____
- 5. _____
- 6. _____
- 7. _____
- 8. _____
- 9. _____


1) 4 righe
3 colonne




2) 4 righe
2 colonne




3) 2 righe
4 colonne




4) 4 righe
4 colonne




5) 3 righe
5 colonne




6) 5 righe
3 colonne




7) 5 righe
2 colonne



8) 2 righe
3 colonne



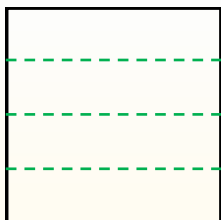
9) 5 righe
4 colonne



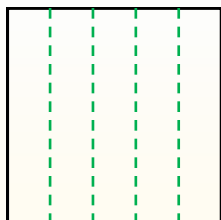


Dividi i rettangoli come descritto e poi conta per trovare il numero delle divisioni.

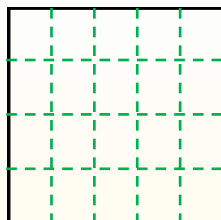
Le righe vanno da destra a sinistra.



Le colonne vanno dall'alto in basso.



Questo ha 4 righe e 5 colonne. E' stato diviso in 20 quadrati in tutto.



Risposte

1. 12

2. 8

3. 8

4. 16

5. 15

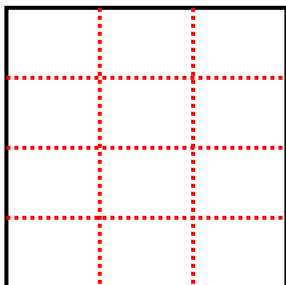
6. 15

7. 10

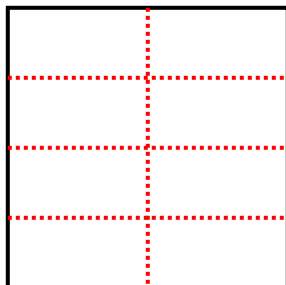
8. 6

9. 20

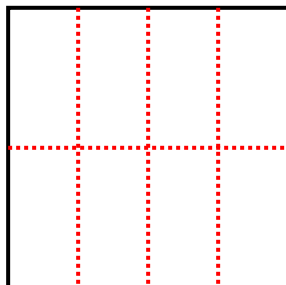
1) 4 righe
3 colonne




2) 4 righe
2 colonne



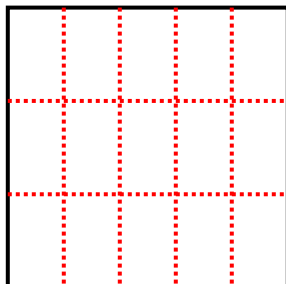
3) 2 righe
4 colonne



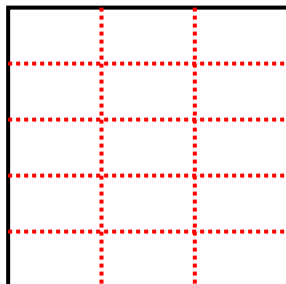
4) 4 righe
4 colonne



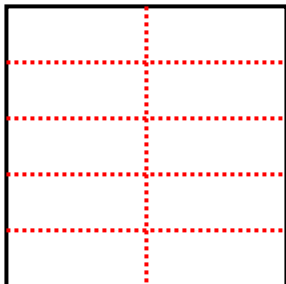
5) 3 righe
5 colonne



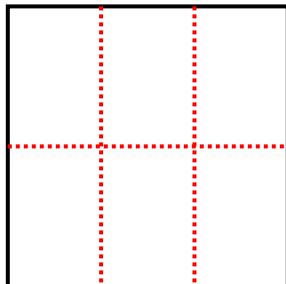
6) 5 righe
3 colonne



7) 5 righe
2 colonne



8) 2 righe
3 colonne



9) 5 righe
4 colonne

