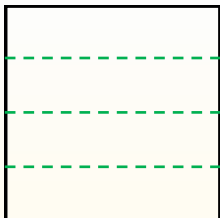


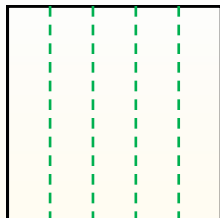


Dividi i rettangoli come descritto e poi conta per trovare il numero delle divisioni.

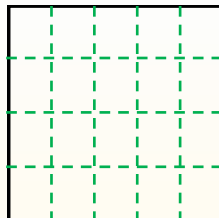
Le righe vanno da destra a sinistra.



Le colonne vanno dall'alto in basso.




Questo ha 4 righe e 5 colonne. E' stato diviso in 20 quadrati in tutto.




Risposte

- 1. _____
- 2. _____
- 3. _____
- 4. _____
- 5. _____
- 6. _____
- 7. _____
- 8. _____
- 9. _____


1) 4 righe
4 colonne




2) 3 righe
4 colonne




3) 4 righe
3 colonne




4) 2 righe
4 colonne




5) 4 righe
2 colonne




6) 5 righe
3 colonne




7) 3 righe
2 colonne



8) 5 righe
2 colonne



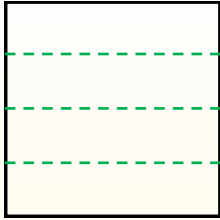
9) 5 righe
5 colonne



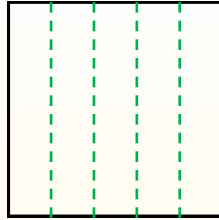


Dividi i rettangoli come descritto e poi conta per trovare il numero delle divisioni.

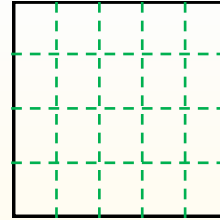
Le righe vanno da destra a sinistra.



Le colonne vanno dall'alto in basso.



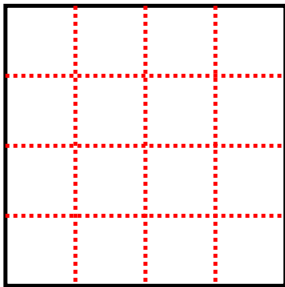
Questo ha 4 righe e 5 colonne. E' stato diviso in 20 quadrati in tutto.



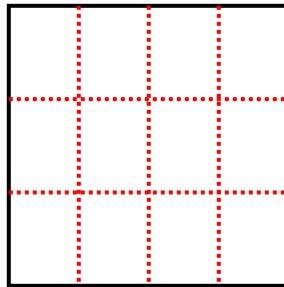
Risposte

1. 16
2. 12
3. 12
4. 8
5. 8
6. 15
7. 6
8. 10
9. 25

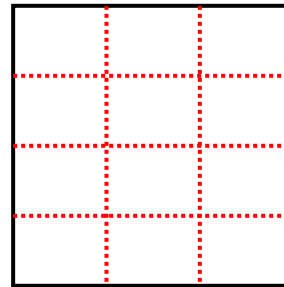
1) 4 righe
4 colonne



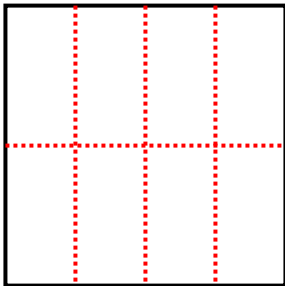
2) 3 righe
4 colonne



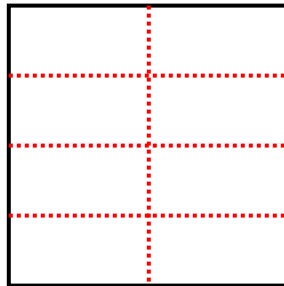
3) 4 righe
3 colonne



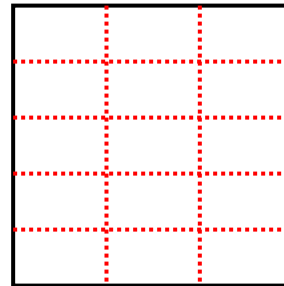
4) 2 righe
4 colonne



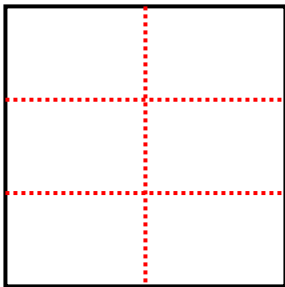
5) 4 righe
2 colonne



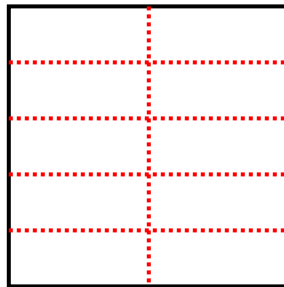
6) 5 righe
3 colonne



7) 3 righe
2 colonne



8) 5 righe
2 colonne



9) 5 righe
5 colonne

