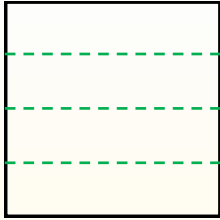




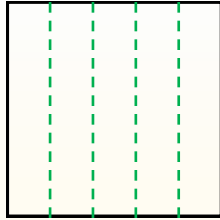
Dividi i rettangoli come descritto e poi conta per trovare il numero delle divisioni.

Risposte

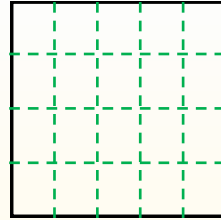
Le righe vanno da destra a sinistra.




Le colonne vanno dall'alto in basso.




Questo ha 4 righe e 5 colonne.
E' stato diviso in 20 quadrati in tutto.




1) 5 righe
2 colonne




2) 4 righe
4 colonne




3) 4 righe
2 colonne




4) 3 righe
4 colonne




5) 3 righe
2 colonne




6) 2 righe
5 colonne



7) 3 righe
3 colonne



8) 4 righe
3 colonne



9) 3 righe
5 colonne

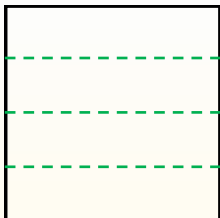


- 1. _____
- 2. _____
- 3. _____
- 4. _____
- 5. _____
- 6. _____
- 7. _____
- 8. _____
- 9. _____

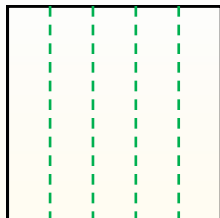


Dividi i rettangoli come descritto e poi conta per trovare il numero delle divisioni.

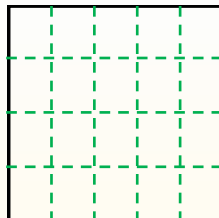
Le righe vanno da destra a sinistra.



Le colonne vanno dall'alto in basso.



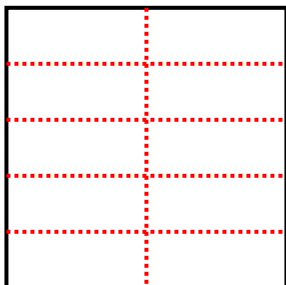
Questo ha 4 righe e 5 colonne. E' stato diviso in 20 quadrati in tutto.




Risposte

- 1. 10
- 2. 16
- 3. 8
- 4. 12
- 5. 6
- 6. 10
- 7. 9
- 8. 12
- 9. 15

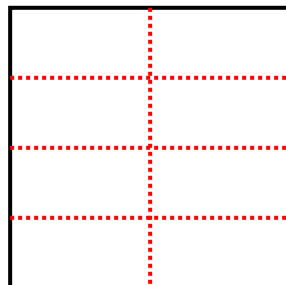
1) 5 righe
2 colonne




2) 4 righe
4 colonne



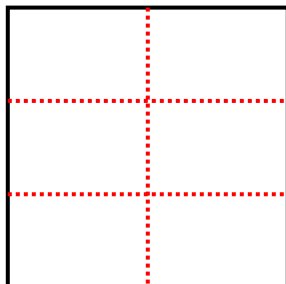
3) 4 righe
2 colonne



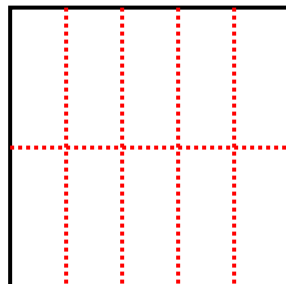
4) 3 righe
4 colonne



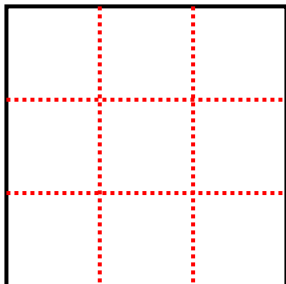
5) 3 righe
2 colonne



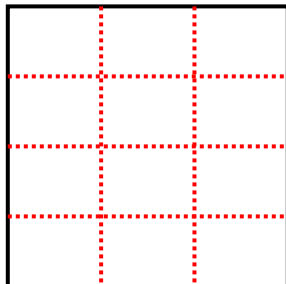
6) 2 righe
5 colonne



7) 3 righe
3 colonne



8) 4 righe
3 colonne



9) 3 righe
5 colonne

