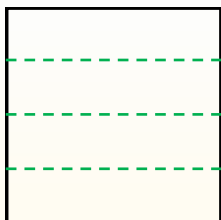


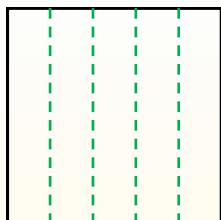


Dividi i rettangoli come descritto e poi conta per trovare il numero delle divisioni.

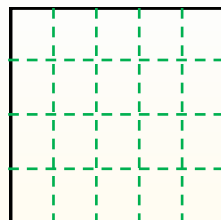
Le righe vanno da destra a sinistra.



Le colonne vanno dall'alto in basso.




Questo ha 4 righe e 5 colonne.
E' stato diviso in 20 quadrati in tutto.




Risposte

1. _____
2. _____
3. _____
4. _____
5. _____
6. _____
7. _____
8. _____
9. _____

1) 5 righe
2 colonne




2) 3 righe
2 colonne




3) 5 righe
5 colonne



4) 2 righe
4 colonne




5) 4 righe
4 colonne




6) 2 righe
5 colonne



7) 3 righe
3 colonne



8) 3 righe
4 colonne



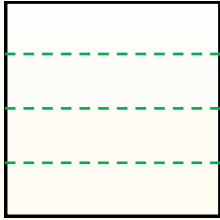
9) 2 righe
3 colonne



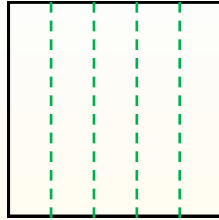


Dividi i rettangoli come descritto e poi conta per trovare il numero delle divisioni.

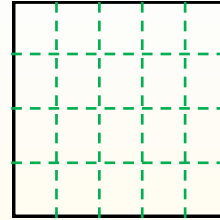
Le righe vanno da destra a sinistra.



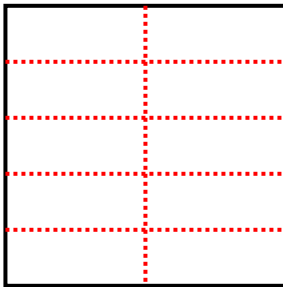
Le colonne vanno dall'alto in basso.



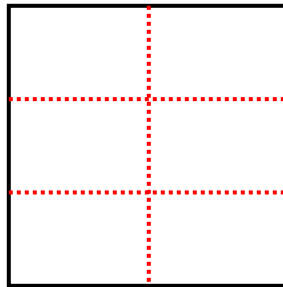
Questo ha 4 righe e 5 colonne. E' stato diviso in 20 quadrati in tutto.



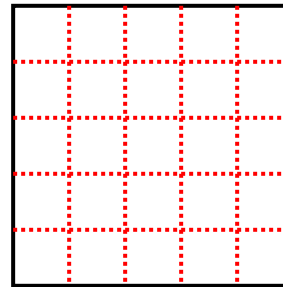
1) 5 righe
2 colonne



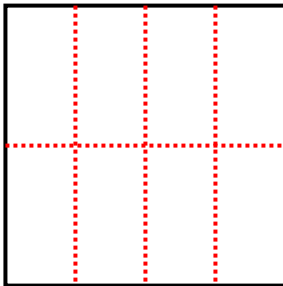
2) 3 righe
2 colonne



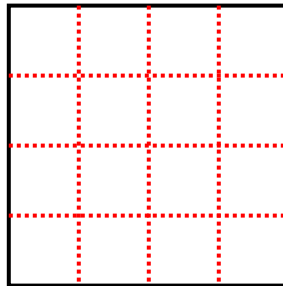
3) 5 righe
5 colonne



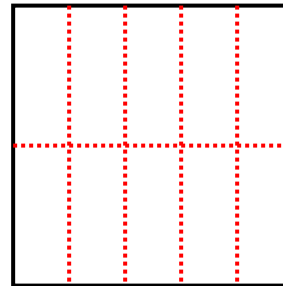
4) 2 righe
4 colonne



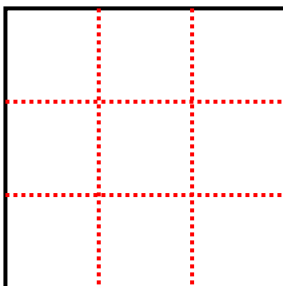
5) 4 righe
4 colonne



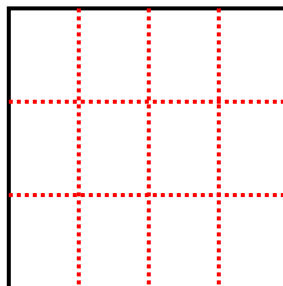
6) 2 righe
5 colonne



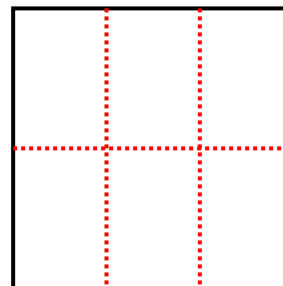
7) 3 righe
3 colonne



8) 3 righe
4 colonne



9) 2 righe
3 colonne



Risposte

- 1. 10
- 2. 6
- 3. 25
- 4. 8
- 5. 16
- 6. 10
- 7. 9
- 8. 12
- 9. 6