




Usa le griglie per risolvere ogni operazione.


1) $69 \times 55 =$




2) $66 \times 73 =$




3) $45 \times 42 =$



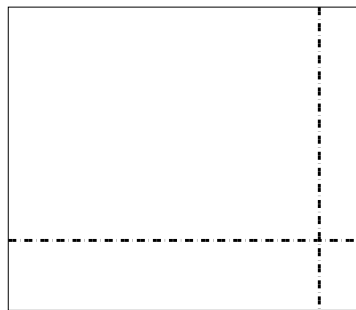
4) $34 \times 23 =$



5) $36 \times 14 =$



6) $39 \times 46 =$



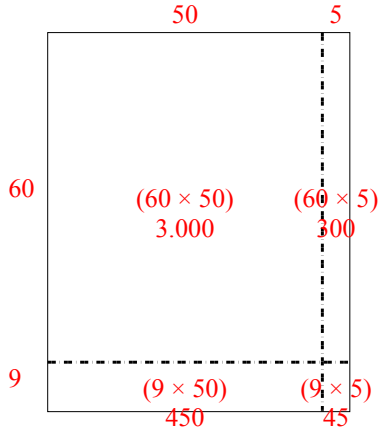
Risposte

- 1. _____
- 2. _____
- 3. _____
- 4. _____
- 5. _____
- 6. _____

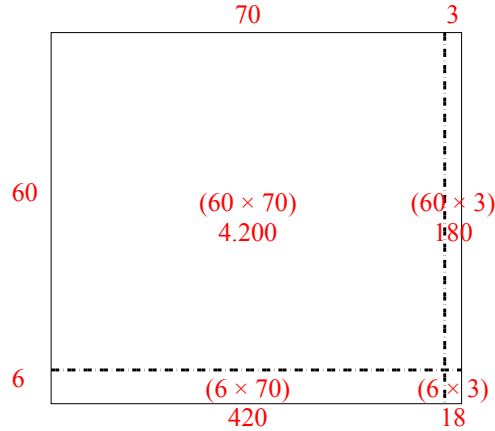


Usa le griglie per risolvere ogni operazione.

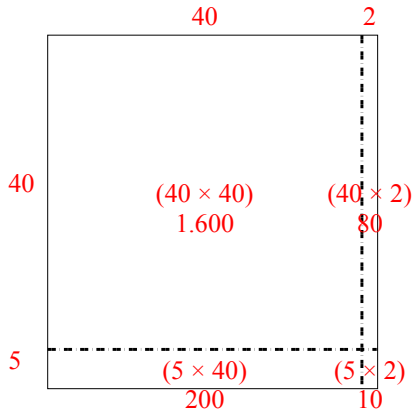
1) $69 \times 55 =$



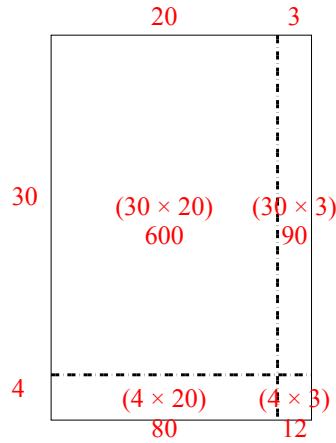
2) $66 \times 73 =$



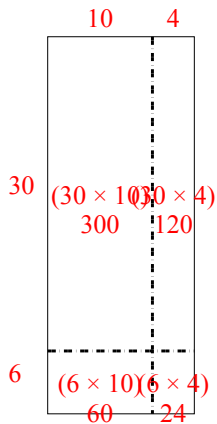
3) $45 \times 42 =$



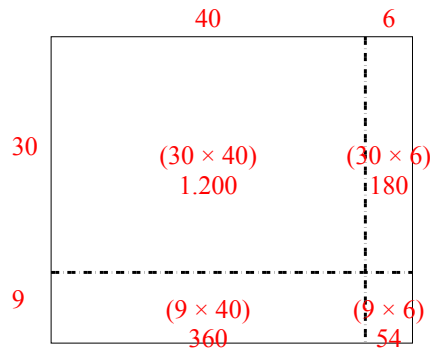
4) $34 \times 23 =$



5) $36 \times 14 =$



6) $39 \times 46 =$



Risposte

1. 3.795
2. 4.818
3. 1.890
4. 782
5. 504
6. 1.794