


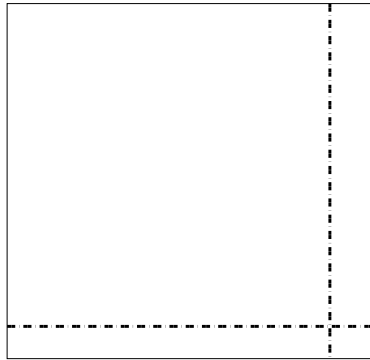


Usa le griglie per risolvere ogni operazione.


1) $69 \times 47 =$




2) $44 \times 46 =$




3) $35 \times 28 =$




4) $38 \times 13 =$



5) $32 \times 18 =$



6) $34 \times 14 =$



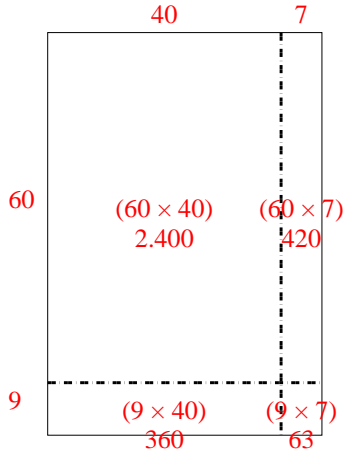
Risposte

- 1. _____
- 2. _____
- 3. _____
- 4. _____
- 5. _____
- 6. _____

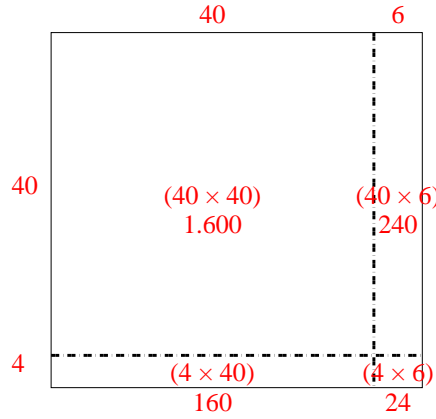


Usa le griglie per risolvere ogni operazione.

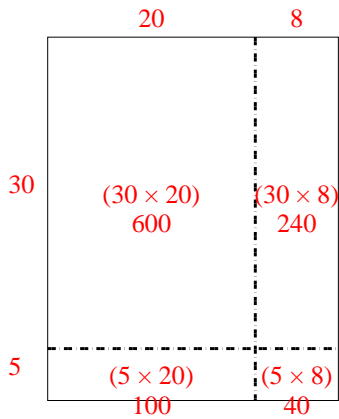
1) $69 \times 47 =$



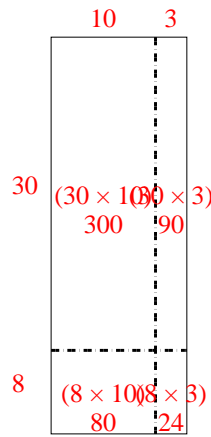
2) $44 \times 46 =$



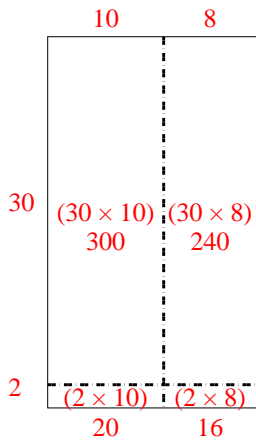
3) $35 \times 28 =$



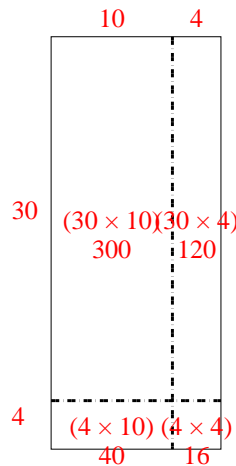
4) $38 \times 13 =$



5) $32 \times 18 =$



6) $34 \times 14 =$



Risposte

1. 3.243

2. 2.024

3. 980

4. 494

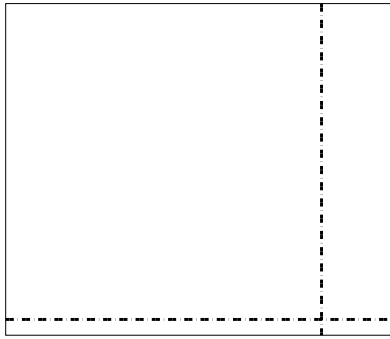
5. 576

6. 476




Usa le griglie per risolvere ogni operazione.

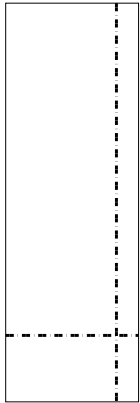
1) $42 \times 49 =$




2) $44 \times 47 =$




3) $36 \times 12 =$




4) $37 \times 33 =$



5) $32 \times 25 =$



6) $38 \times 35 =$



Risposte

1. _____

2. _____

3. _____

4. _____

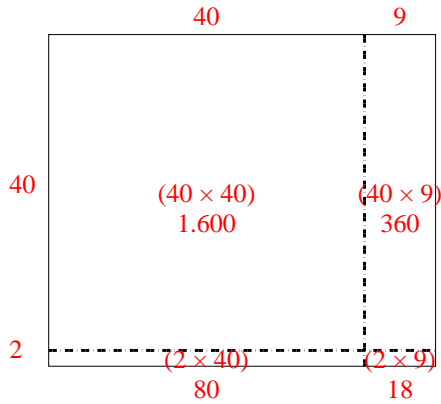
5. _____

6. _____

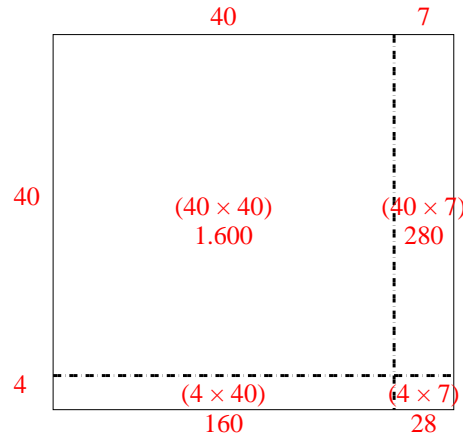


Usa le griglie per risolvere ogni operazione.

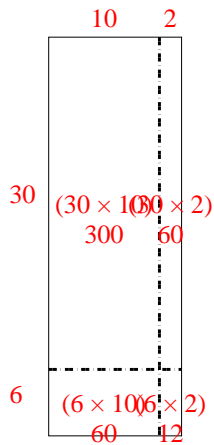
1) $42 \times 49 =$



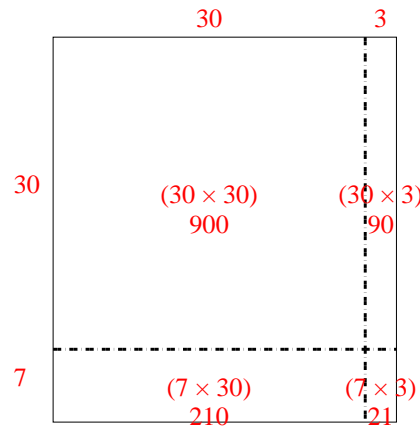
2) $44 \times 47 =$



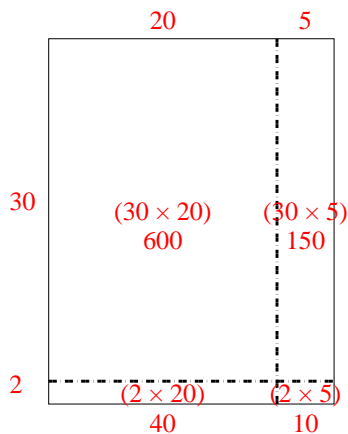
3) $36 \times 12 =$



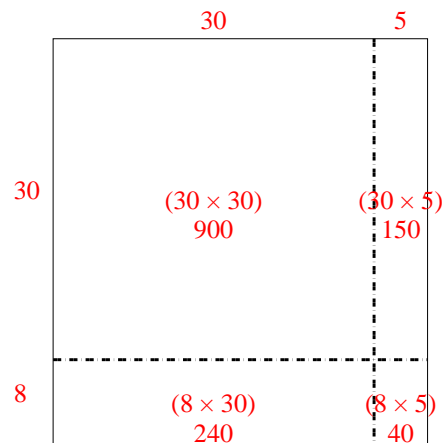
4) $37 \times 33 =$



5) $32 \times 25 =$



6) $38 \times 35 =$



Risposte

1. 2.058

2. 2.068

3. 432

4. 1.221


5. 800

6. 1.330




Usa le griglie per risolvere ogni operazione.


1) $47 \times 39 =$




2) $48 \times 34 =$



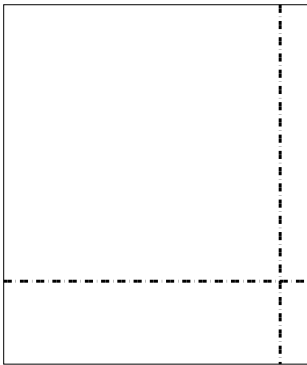
3) $37 \times 32 =$




4) $34 \times 13 =$



5) $39 \times 33 =$



6) $32 \times 36 =$

**Risposte**

1. _____

2. _____

3. _____

4. _____

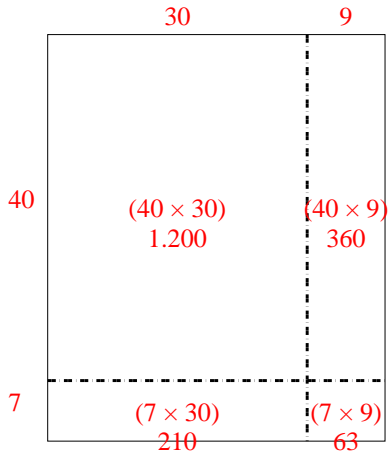
5. _____

6. _____

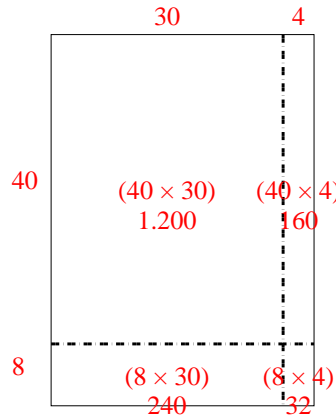


Usa le griglie per risolvere ogni operazione.

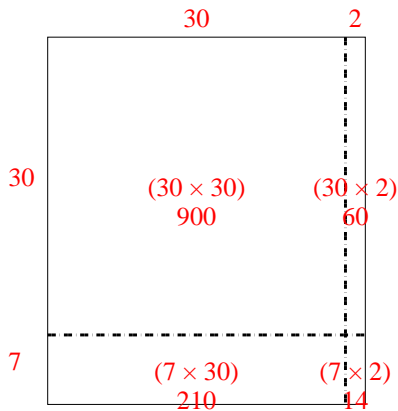
1) $47 \times 39 =$



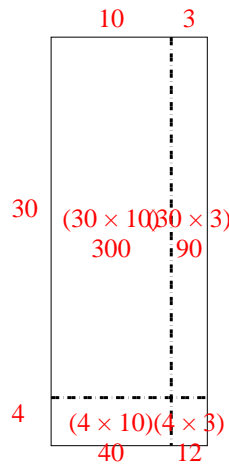
2) $48 \times 34 =$



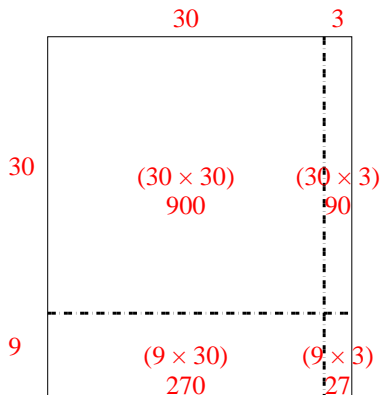
3) $37 \times 32 =$



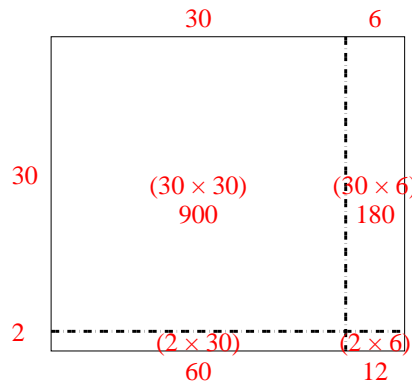
4) $34 \times 13 =$



5) $39 \times 33 =$



6) $32 \times 36 =$



Risposte

1. 1.833

2. 1.632

3. 1.184

4. 442


5. 1.287

6. 1.152




Usa le griglie per risolvere ogni operazione.


1) $66 \times 53 =$




2) $63 \times 45 =$




3) $42 \times 34 =$




4) $45 \times 36 =$



5) $37 \times 22 =$



6) $34 \times 56 =$

**Risposte**

1. _____

2. _____

3. _____

4. _____

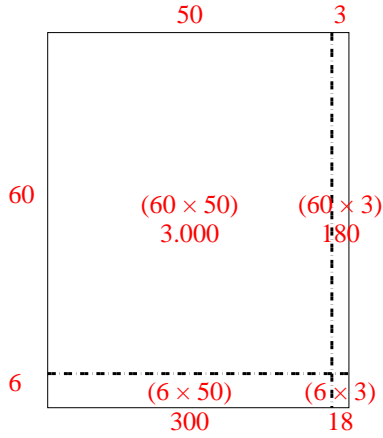
5. _____

6. _____

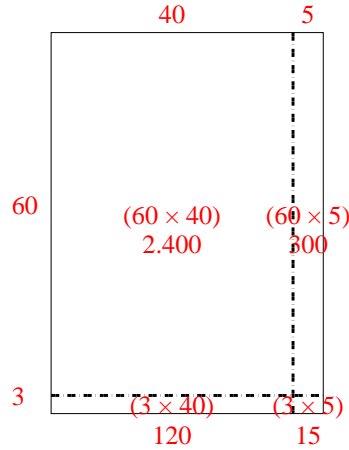


Usa le griglie per risolvere ogni operazione.

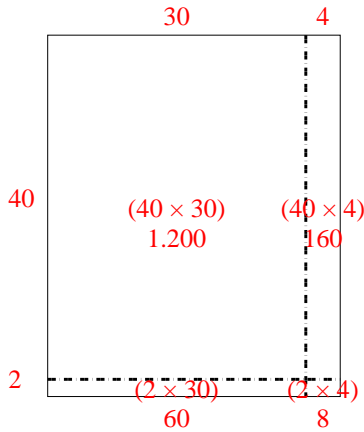
1) $66 \times 53 =$



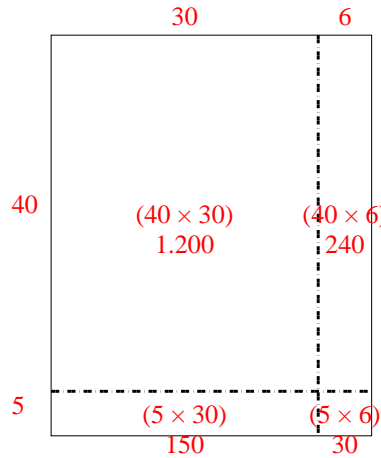
2) $63 \times 45 =$



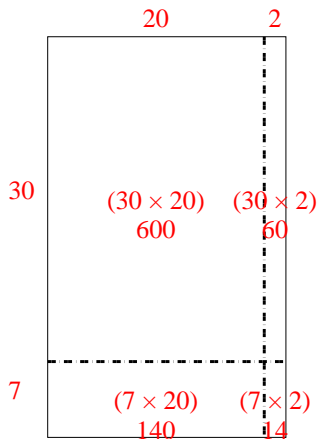
3) $42 \times 34 =$



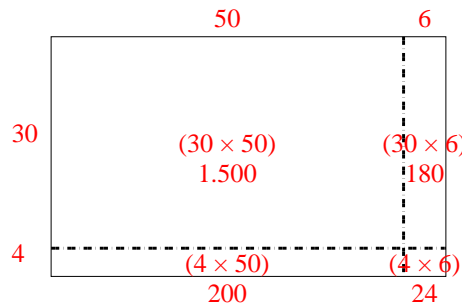
4) $45 \times 36 =$



5) $37 \times 22 =$



6) $34 \times 56 =$




Risposte

1. 3.498
2. 2.835
3. 1.428
4. 1.620
5. 814
6. 1.904




Usa le griglie per risolvere ogni operazione.


1) $33 \times 24 =$



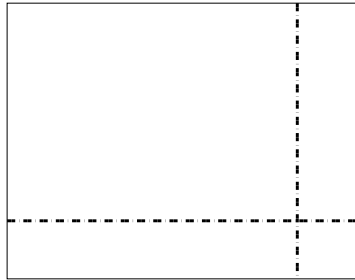
2) $35 \times 12 =$




3) $36 \times 34 =$




4) $38 \times 49 =$



5) $48 \times 27 =$



6) $45 \times 44 =$



Risposte

1. _____

2. _____

3. _____

4. _____

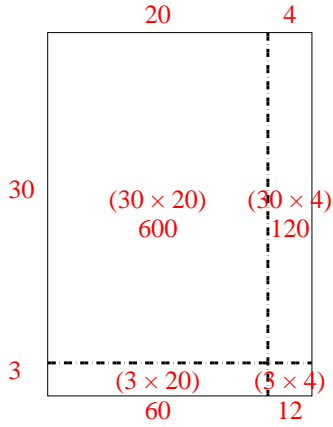
5. _____

6. _____

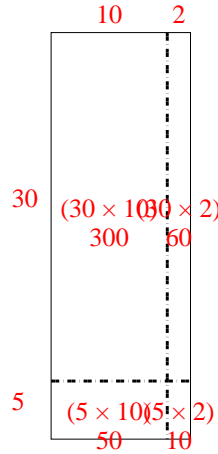


Usa le griglie per risolvere ogni operazione.

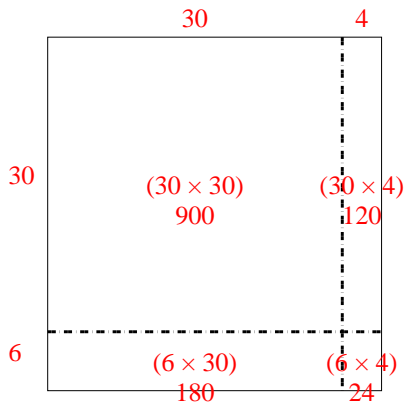
1) $33 \times 24 =$



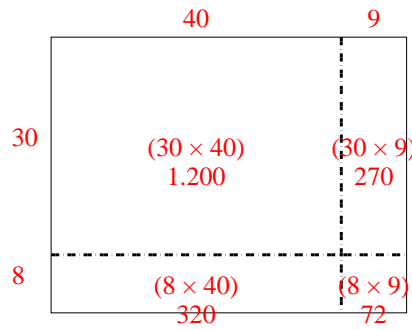
2) $35 \times 12 =$



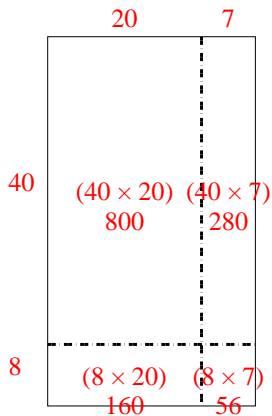
3) $36 \times 34 =$



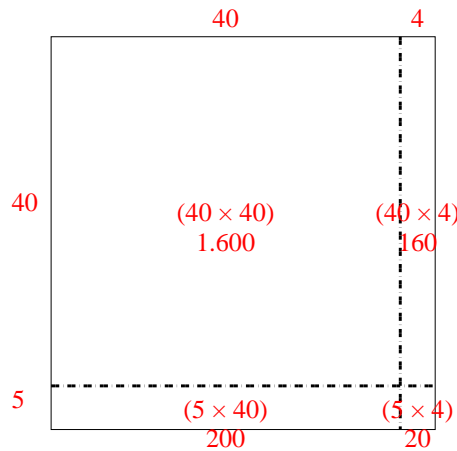
4) $38 \times 49 =$



5) $48 \times 27 =$



6) $45 \times 44 =$



Risposte

1. 792

2. 420

3. 1.224

4. 1.862


5. 1.296

6. 1.980




Usa le griglie per risolvere ogni operazione.


1) $43 \times 33 =$



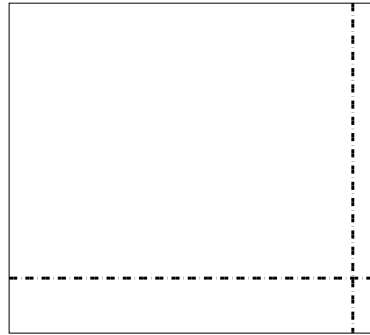
2) $33 \times 17 =$



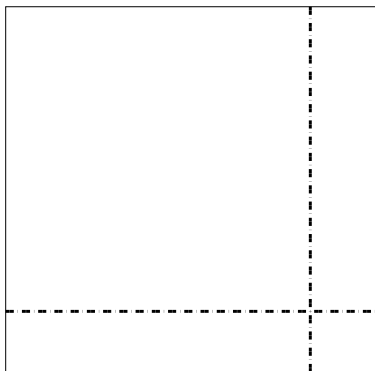
3) $35 \times 44 =$




4) $48 \times 54 =$



5) $48 \times 49 =$



6) $36 \times 32 =$



Risposte

1. _____

2. _____

3. _____

4. _____

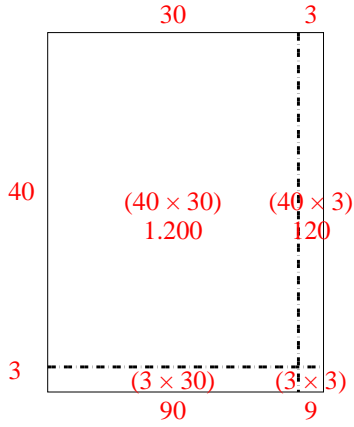
5. _____

6. _____

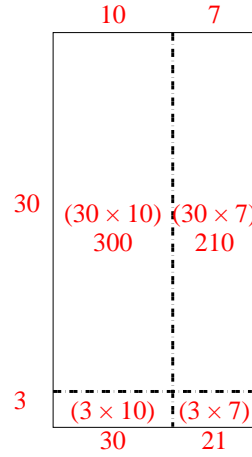


Usa le griglie per risolvere ogni operazione.

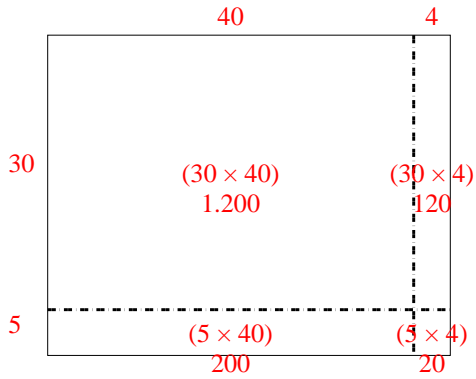
1) $43 \times 33 =$



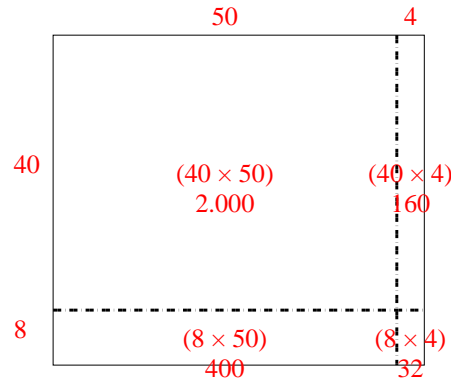
2) $33 \times 17 =$



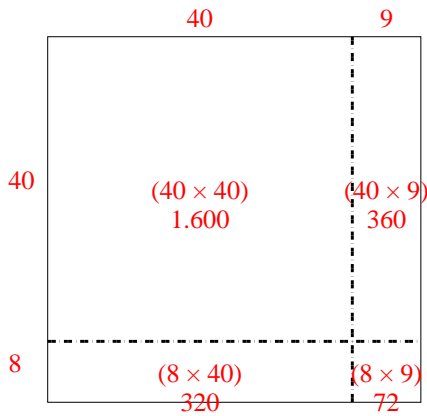
3) $35 \times 44 =$



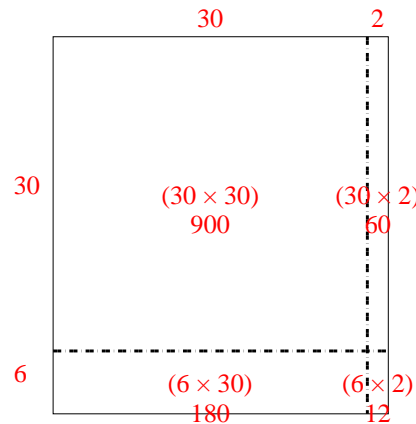
4) $48 \times 54 =$



5) $48 \times 49 =$



6) $36 \times 32 =$



Risposte

1. 1.419

2. 561

3. 1.540

4. 2.592


5. 2.352

6. 1.152




Usa le griglie per risolvere ogni operazione.


1) $43 \times 35 =$




2) $36 \times 14 =$



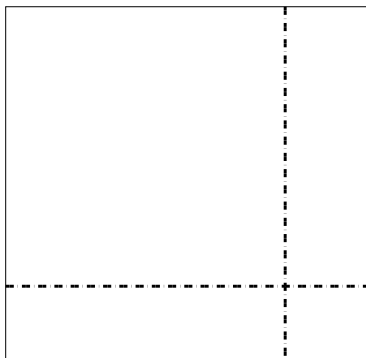
3) $34 \times 45 =$




4) $37 \times 59 =$



5) $38 \times 39 =$



6) $38 \times 14 =$



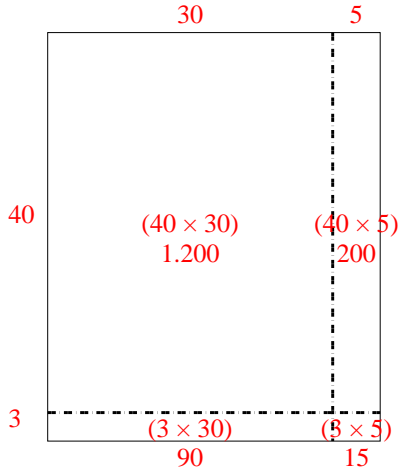
Risposte

- 1. _____
- 2. _____
- 3. _____
- 4. _____
- 5. _____
- 6. _____

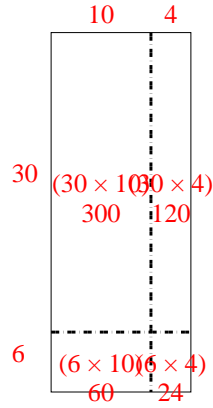


Usa le griglie per risolvere ogni operazione.

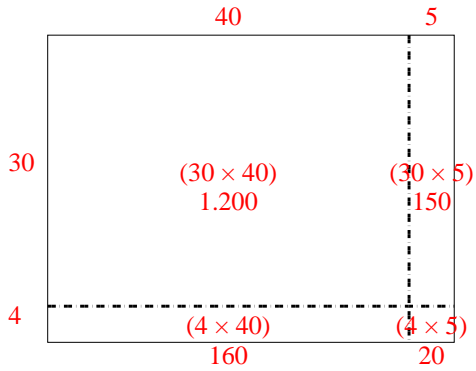
1) $43 \times 35 =$



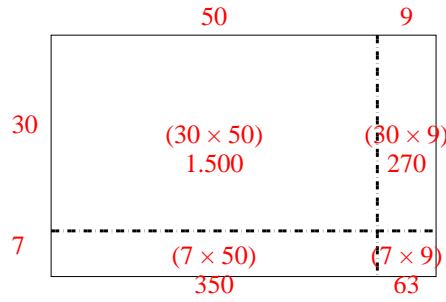
2) $36 \times 14 =$



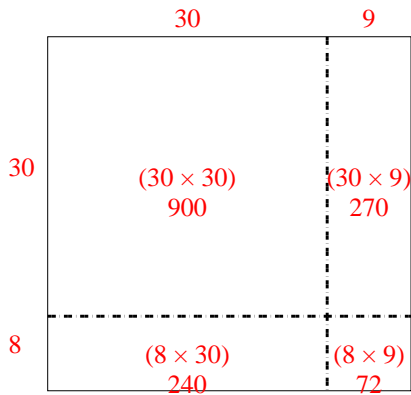
3) $34 \times 45 =$



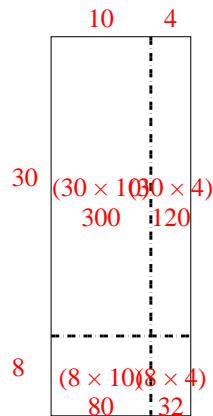
4) $37 \times 59 =$



5) $38 \times 39 =$



6) $38 \times 14 =$



Risposte

1. 1.505

2. 504

3. 1.530

4. 2.183


5. 1.482

6. 532




Usa le griglie per risolvere ogni operazione.


1) $63 \times 47 =$




2) $44 \times 42 =$




3) $32 \times 45 =$




4) $47 \times 23 =$



5) $47 \times 38 =$



6) $37 \times 43 =$



Risposte

1. _____

2. _____

3. _____

4. _____

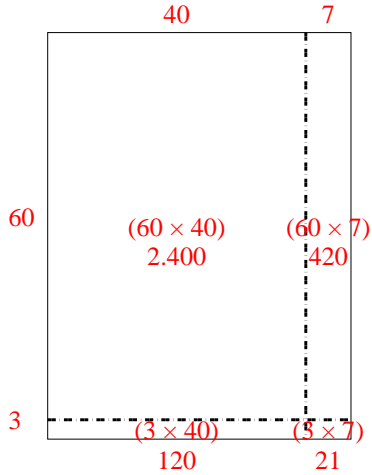
5. _____

6. _____

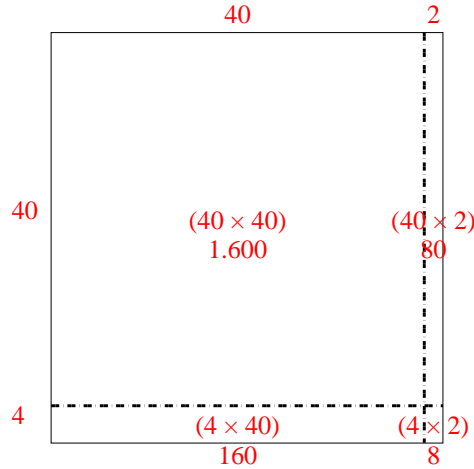


Usa le griglie per risolvere ogni operazione.

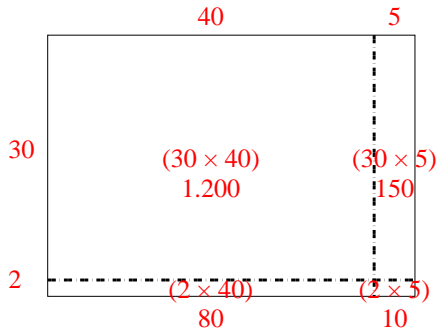
1) $63 \times 47 =$



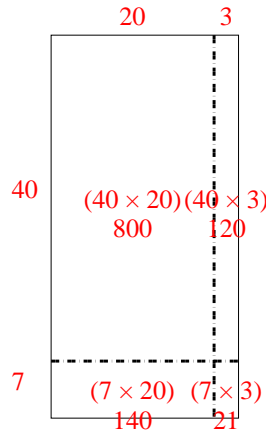
2) $44 \times 42 =$



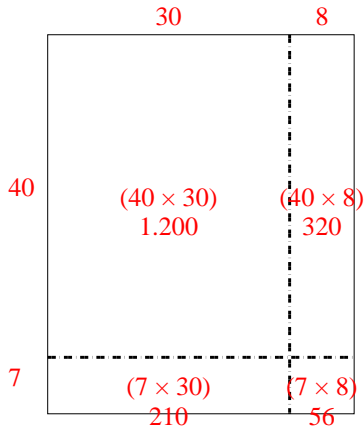
3) $32 \times 45 =$



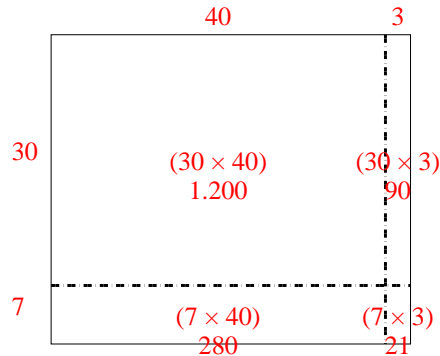
4) $47 \times 23 =$



5) $47 \times 38 =$



6) $37 \times 43 =$



Risposte

1. 2.961

2. 1.848

3. 1.440

4. 1.081

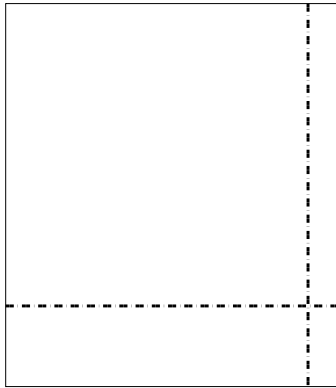
5. 1.786

6. 1.591




Usa le griglie per risolvere ogni operazione.


1) $38 \times 33 =$



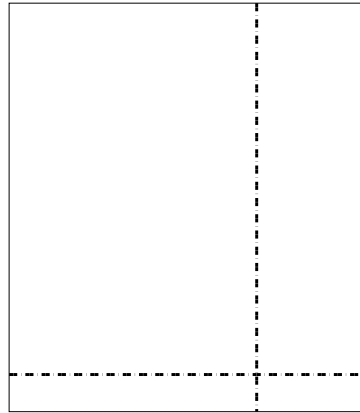
2) $39 \times 25 =$




3) $39 \times 19 =$




4) $33 \times 29 =$



5) $33 \times 32 =$



6) $37 \times 47 =$



Risposte

1. _____

2. _____

3. _____

4. _____

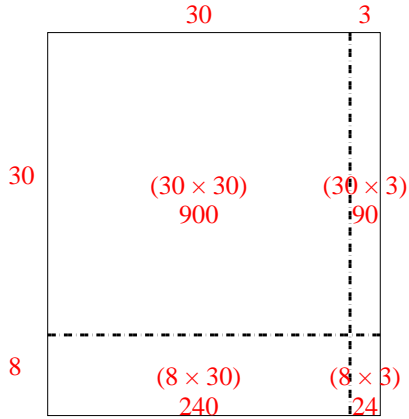
5. _____

6. _____

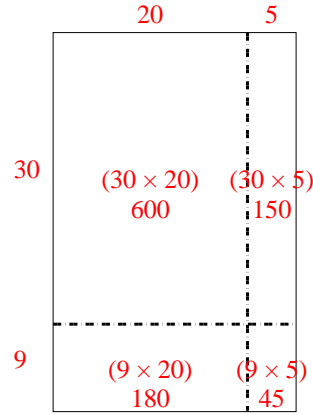


Usa le griglie per risolvere ogni operazione.

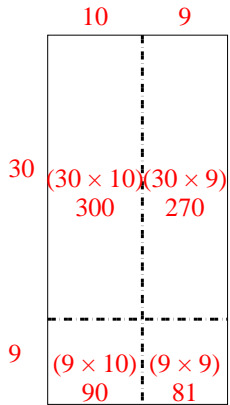
1) $38 \times 33 =$



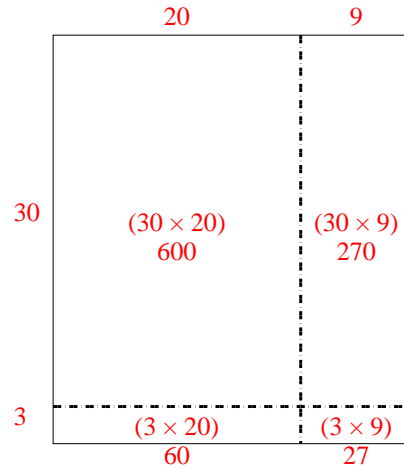
2) $39 \times 25 =$



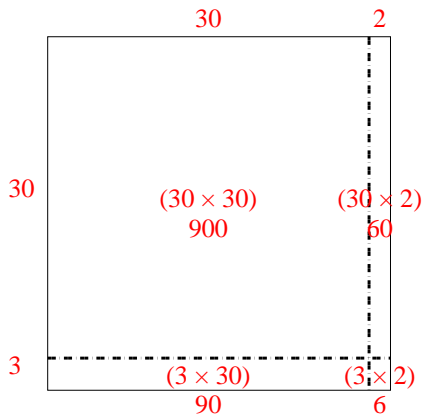
3) $39 \times 19 =$



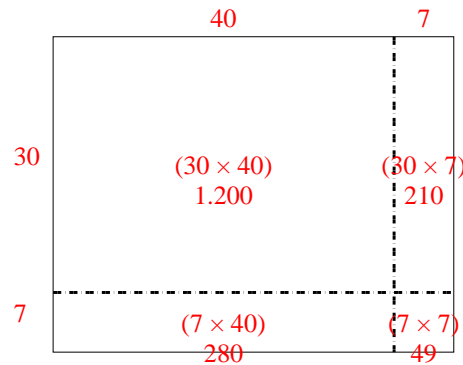
4) $33 \times 29 =$



5) $33 \times 32 =$



6) $37 \times 47 =$



Risposte

1. 1.254

2. 975

3. 741

4. 957


5. 1.056

6. 1.739




Usa le griglie per risolvere ogni operazione.


1) $64 \times 59 =$




2) $48 \times 44 =$




3) $43 \times 45 =$




4) $43 \times 54 =$



5) $33 \times 42 =$



6) $34 \times 24 =$



Risposte

1. _____

2. _____

3. _____

4. _____

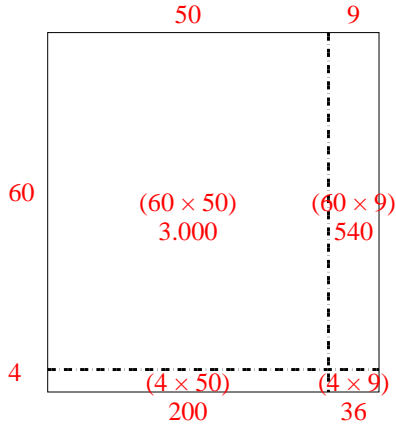
5. _____

6. _____

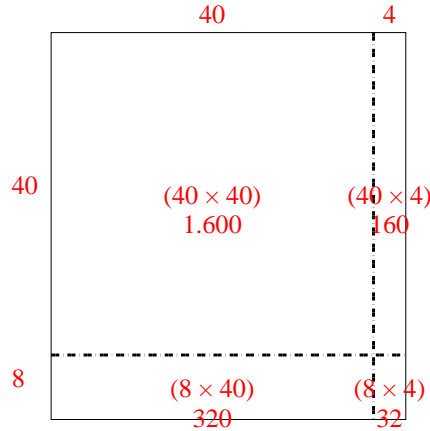


Usa le griglie per risolvere ogni operazione.

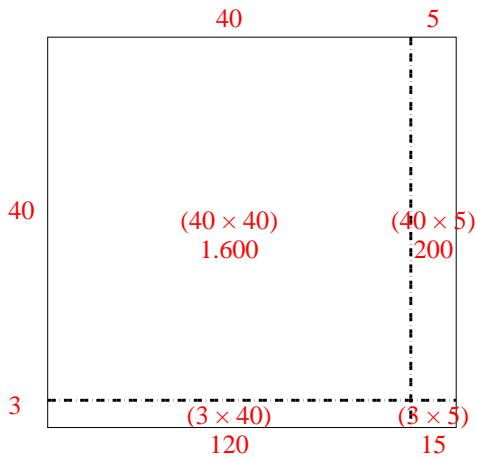
1) $64 \times 59 =$



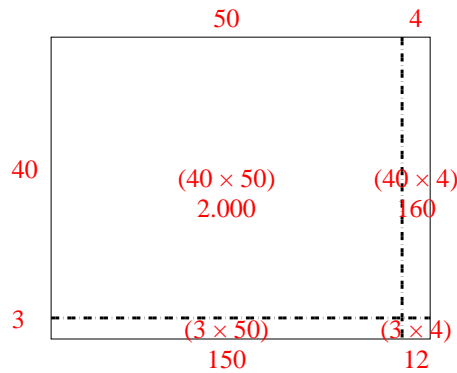
2) $48 \times 44 =$



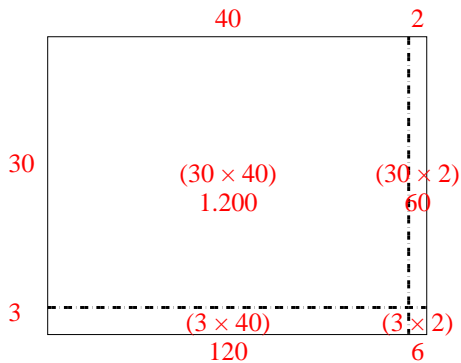
3) $43 \times 45 =$



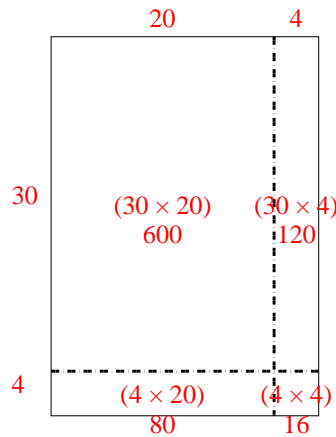
4) $43 \times 54 =$



5) $33 \times 42 =$



6) $34 \times 24 =$



Risposte

1. 3.776

2. 2.112

3. 1.935

4. 2.322

5. 1.386

6. 816