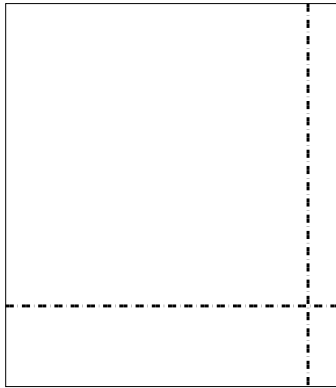





Usa le griglie per risolvere ogni operazione.


1) $38 \times 33 =$



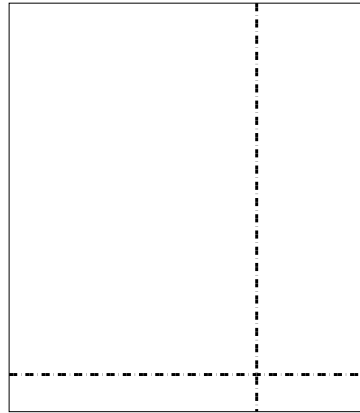
2) $39 \times 25 =$




3) $39 \times 19 =$




4) $33 \times 29 =$



5) $33 \times 32 =$



6) $37 \times 47 =$



Risposte

1. _____

2. _____

3. _____

4. _____

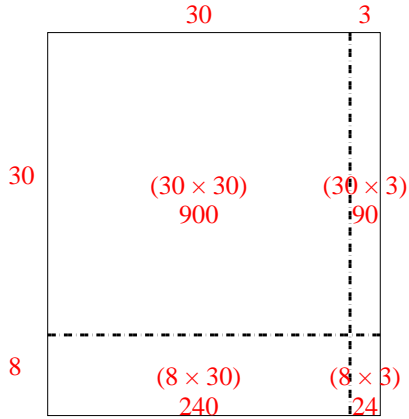
5. _____

6. _____

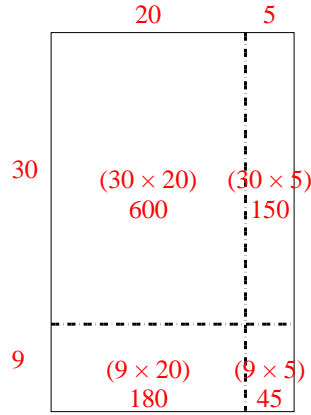


Usa le griglie per risolvere ogni operazione.

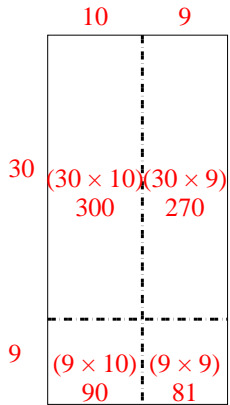
1) $38 \times 33 =$



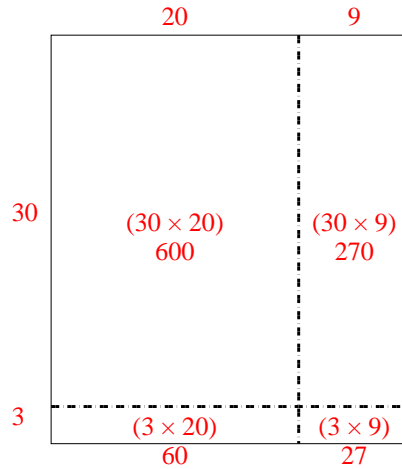
2) $39 \times 25 =$



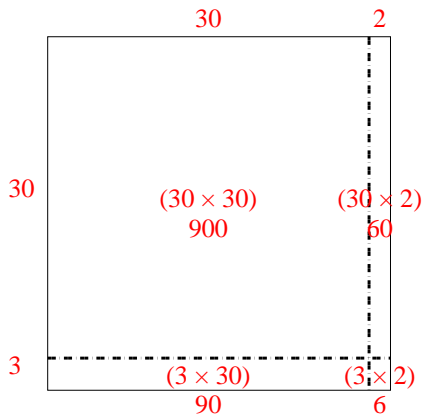
3) $39 \times 19 =$



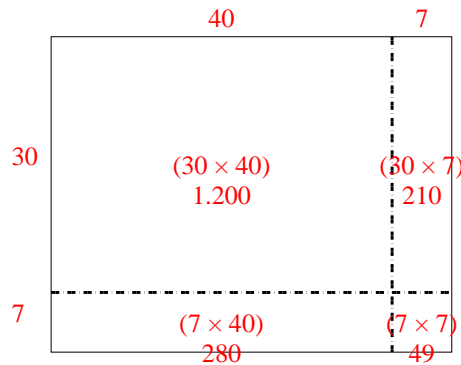
4) $33 \times 29 =$



5) $33 \times 32 =$



6) $37 \times 47 =$



Risposte

1. 1.254

2. 975

3. 741

4. 957

5. 1.056

6. 1.739