





Usa le griglie per risolvere ogni operazione.


1) $63 \times 47 =$




2) $44 \times 42 =$




3) $32 \times 45 =$




4) $47 \times 23 =$



5) $47 \times 38 =$



6) $37 \times 43 =$



Risposte

1. _____

2. _____

3. _____

4. _____

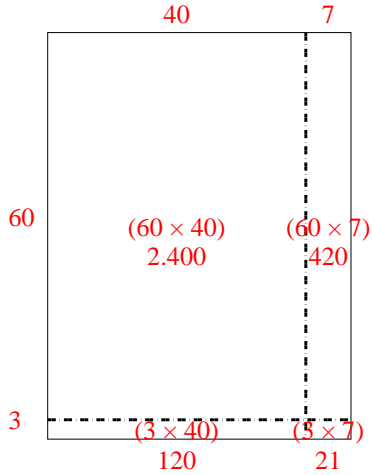
5. _____

6. _____

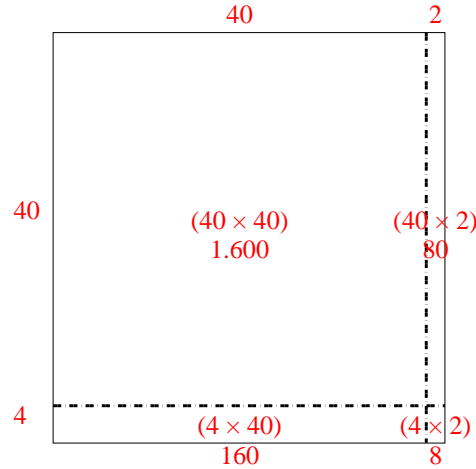


Usa le griglie per risolvere ogni operazione.

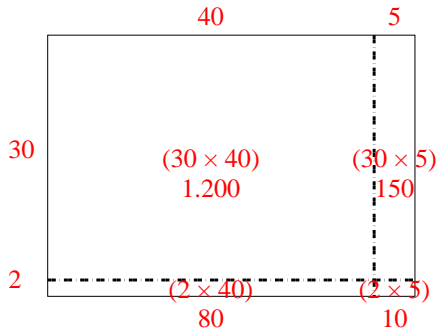
1) $63 \times 47 =$



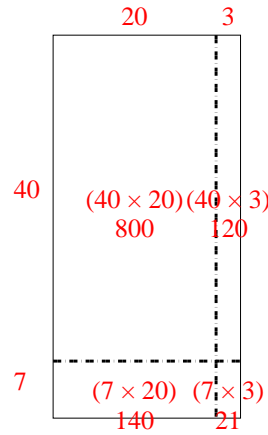
2) $44 \times 42 =$



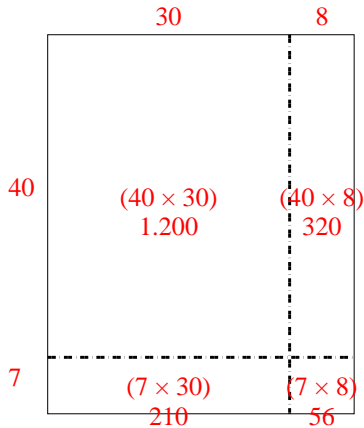
3) $32 \times 45 =$



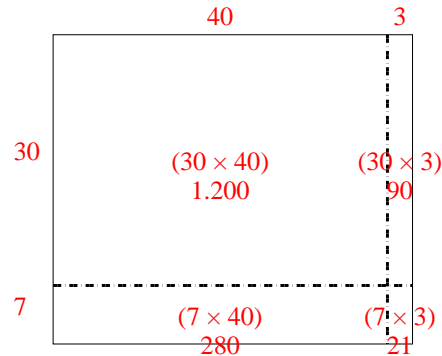
4) $47 \times 23 =$



5) $47 \times 38 =$



6) $37 \times 43 =$



Risposte

1. 2.961

2. 1.848

3. 1.440

4. 1.081

5. 1.786

6. 1.591