





Usa le griglie per risolvere ogni operazione.


1) $43 \times 35 =$




2) $36 \times 14 =$



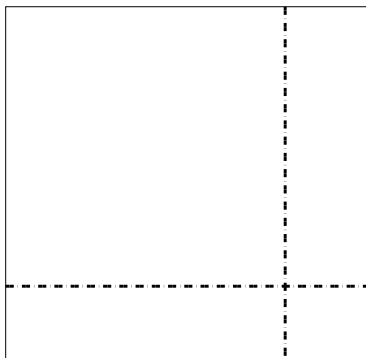
3) $34 \times 45 =$



4) $37 \times 59 =$



5) $38 \times 39 =$



6) $38 \times 14 =$



Risposte

1. _____

2. _____

3. _____

4. _____

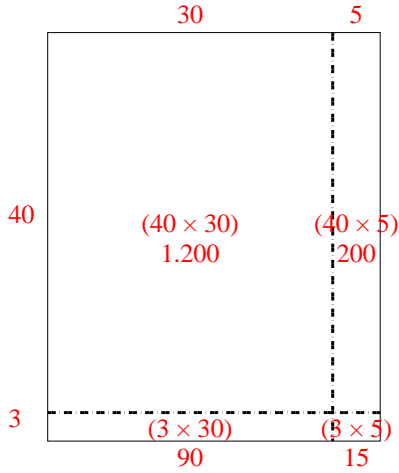
5. _____

6. _____

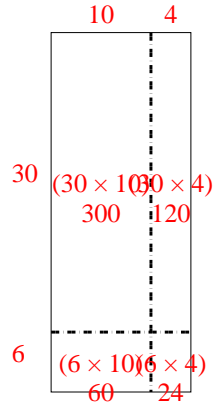


Usa le griglie per risolvere ogni operazione.

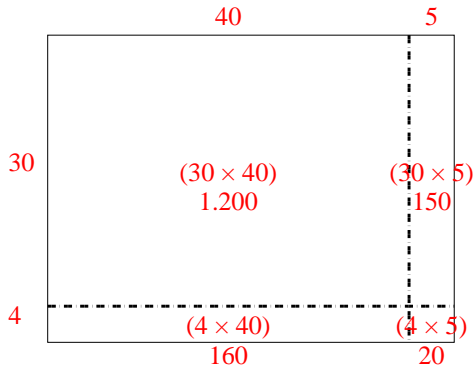
1) $43 \times 35 =$



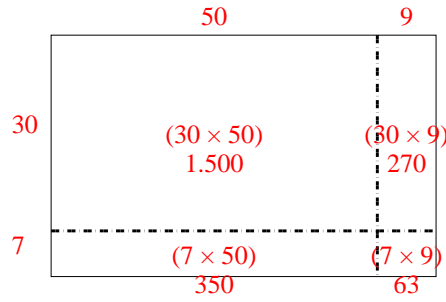
2) $36 \times 14 =$



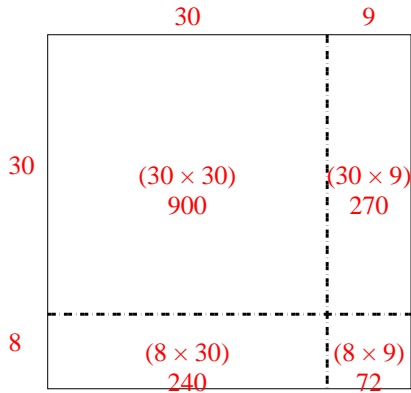
3) $34 \times 45 =$



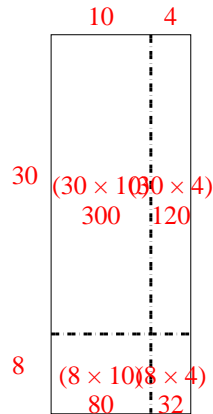
4) $37 \times 59 =$



5) $38 \times 39 =$



6) $38 \times 14 =$



Risposte

1. 1.505

2. 504

3. 1.530

4. 2.183

5. 1.482

6. 532