





Usa le griglie per risolvere ogni operazione.


1) $43 \times 33 =$



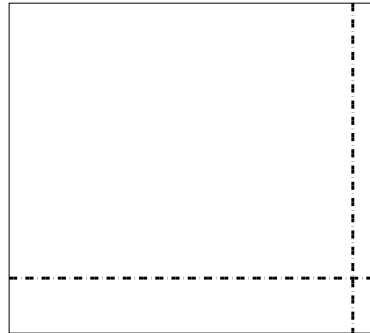
2) $33 \times 17 =$



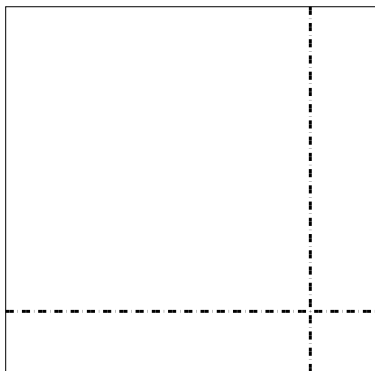
3) $35 \times 44 =$




4) $48 \times 54 =$



5) $48 \times 49 =$



6) $36 \times 32 =$



Risposte

1. _____

2. _____

3. _____

4. _____

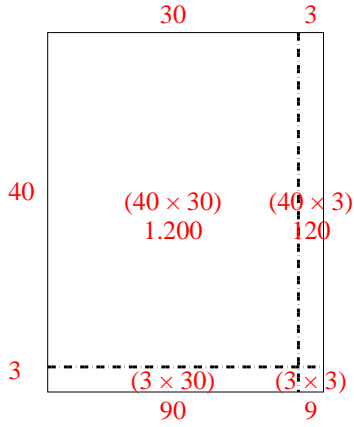
5. _____

6. _____

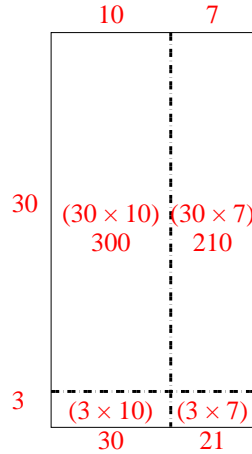


Usa le griglie per risolvere ogni operazione.

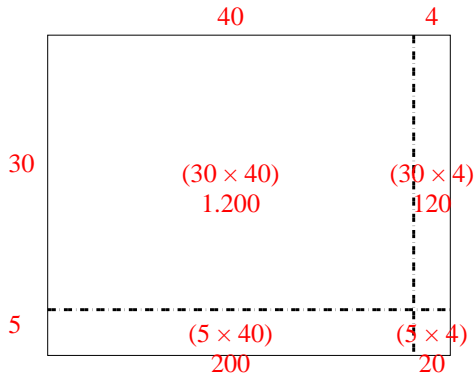
1) $43 \times 33 =$



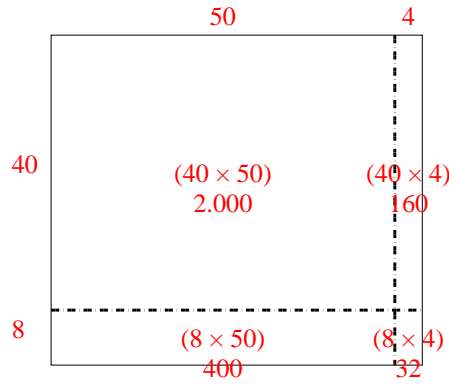
2) $33 \times 17 =$



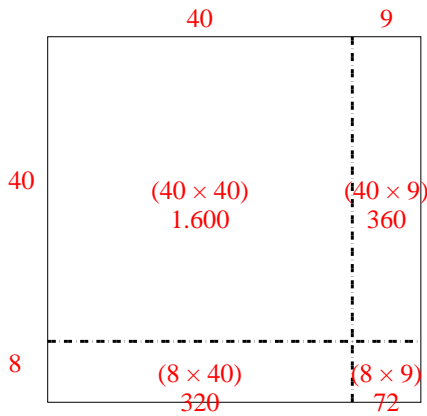
3) $35 \times 44 =$



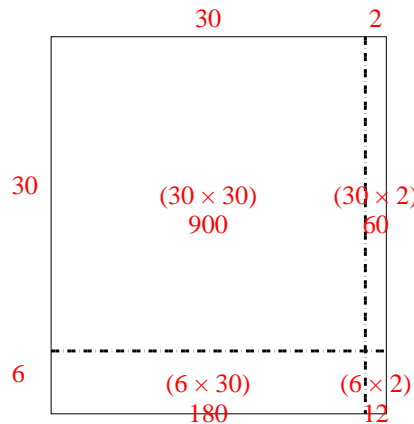
4) $48 \times 54 =$



5) $48 \times 49 =$



6) $36 \times 32 =$



Risposte

1. 1.419

2. 561

3. 1.540

4. 2.592

5. 2.352

6. 1.152