





Usa le griglie per risolvere ogni operazione.


1) $33 \times 24 =$



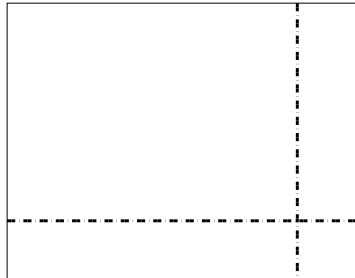
2) $35 \times 12 =$




3) $36 \times 34 =$




4) $38 \times 49 =$



5) $48 \times 27 =$



6) $45 \times 44 =$



Risposte

1. _____

2. _____

3. _____

4. _____

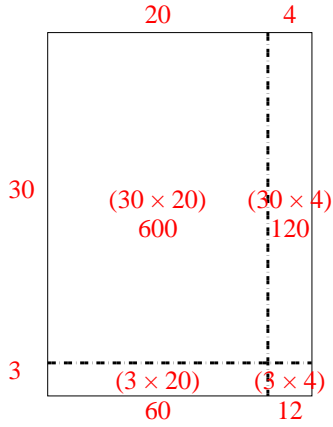
5. _____

6. _____

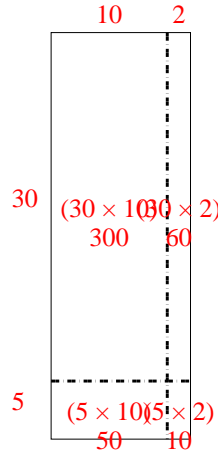


Usa le griglie per risolvere ogni operazione.

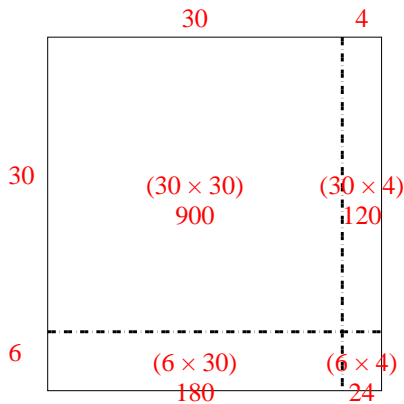
1) $33 \times 24 =$



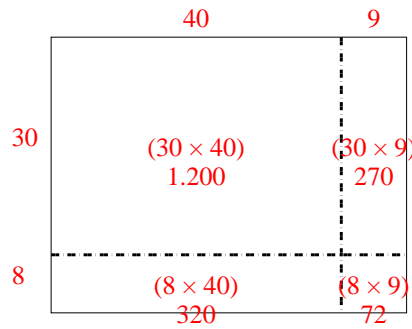
2) $35 \times 12 =$



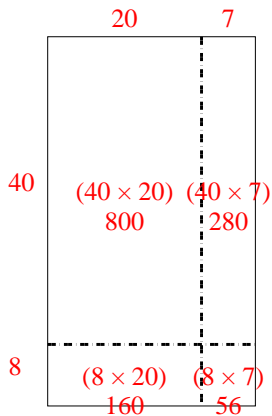
3) $36 \times 34 =$



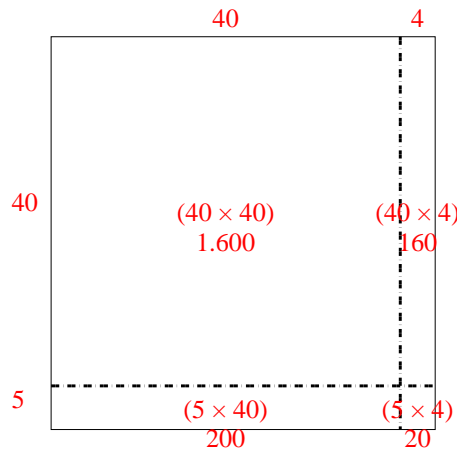
4) $38 \times 49 =$



5) $48 \times 27 =$



6) $45 \times 44 =$



Risposte

1. 792

2. 420

3. 1.224

4. 1.862

5. 1.296

6. 1.980