





Usa le griglie per risolvere ogni operazione.


1) $66 \times 53 =$




2) $63 \times 45 =$




3) $42 \times 34 =$




4) $45 \times 36 =$



5) $37 \times 22 =$



6) $34 \times 56 =$

**Risposte**

1. _____

2. _____

3. _____

4. _____

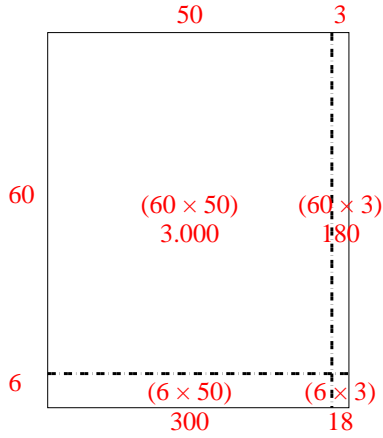
5. _____

6. _____

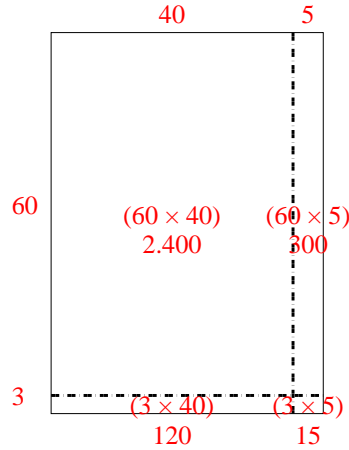


Usa le griglie per risolvere ogni operazione.

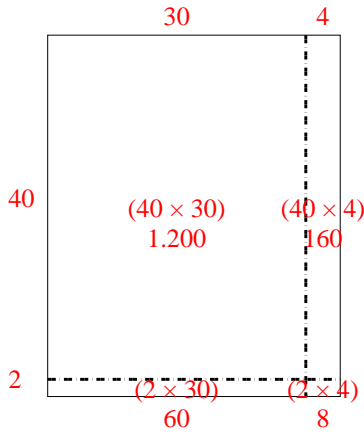
1) $66 \times 53 =$



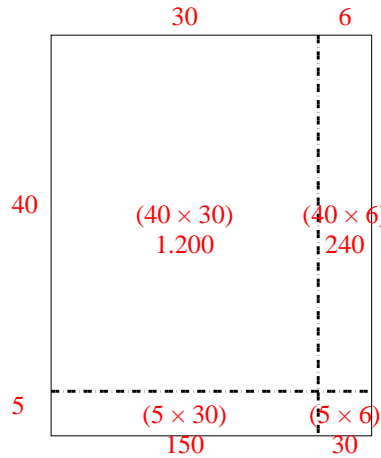
2) $63 \times 45 =$



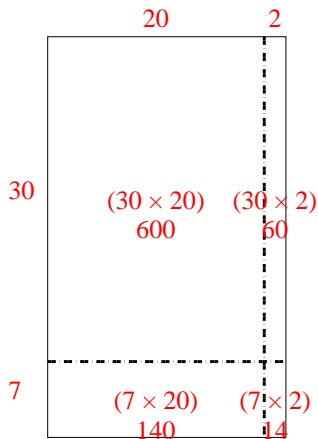
3) $42 \times 34 =$



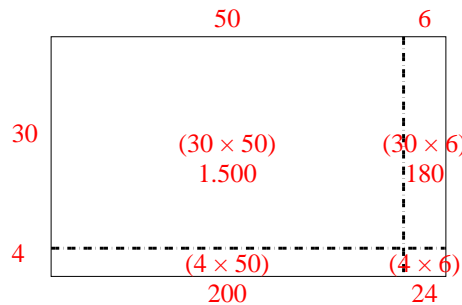
4) $45 \times 36 =$



5) $37 \times 22 =$



6) $34 \times 56 =$



Risposte

1. 3.498

2. 2.835

3. 1.428

4. 1.620

5. 814

6. 1.904