





Usa le griglie per risolvere ogni operazione.


1) $47 \times 39 =$




2) $48 \times 34 =$



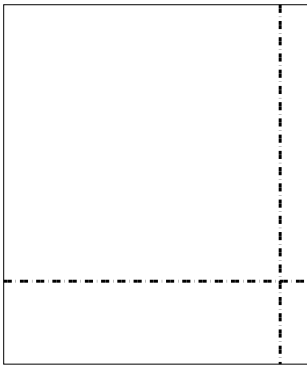
3) $37 \times 32 =$




4) $34 \times 13 =$



5) $39 \times 33 =$



6) $32 \times 36 =$

**Risposte**

1. _____

2. _____

3. _____

4. _____

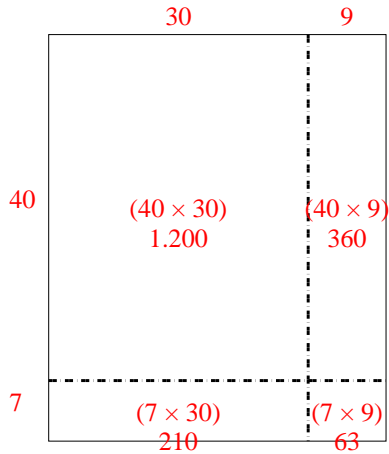
5. _____

6. _____

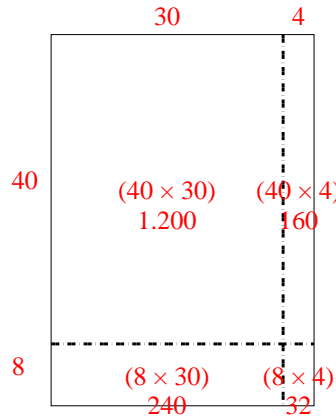


Usa le griglie per risolvere ogni operazione.

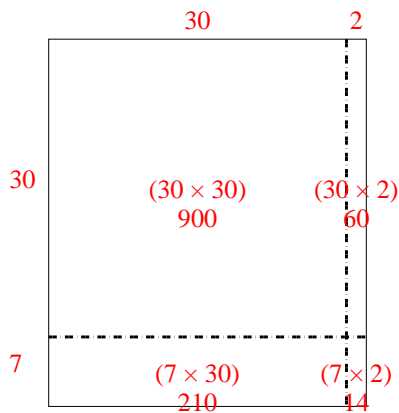
1) $47 \times 39 =$



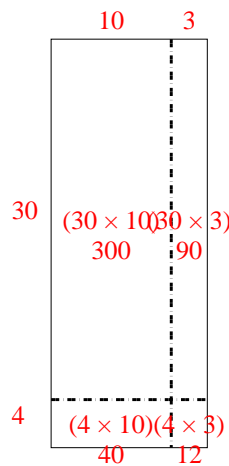
2) $48 \times 34 =$



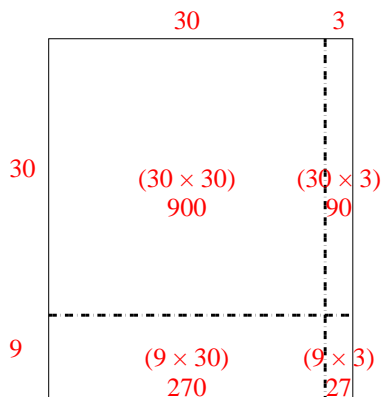
3) $37 \times 32 =$



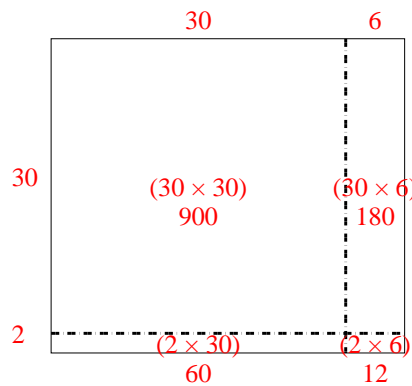
4) $34 \times 13 =$



5) $39 \times 33 =$



6) $32 \times 36 =$



Risposte

1. 1.833
2. 1.632
3. 1.184
4. 442
5. 1.287
6. 1.152