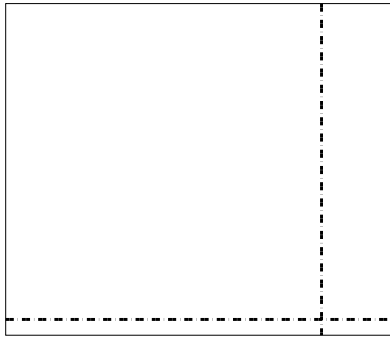





Usa le griglie per risolvere ogni operazione.

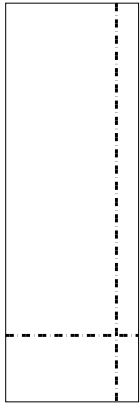
1) $42 \times 49 =$



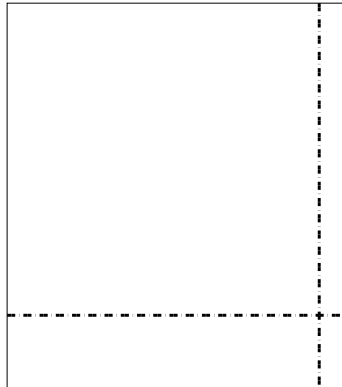
2) $44 \times 47 =$




3) $36 \times 12 =$




4) $37 \times 33 =$



5) $32 \times 25 =$



6) $38 \times 35 =$



Risposte

1. _____

2. _____

3. _____

4. _____

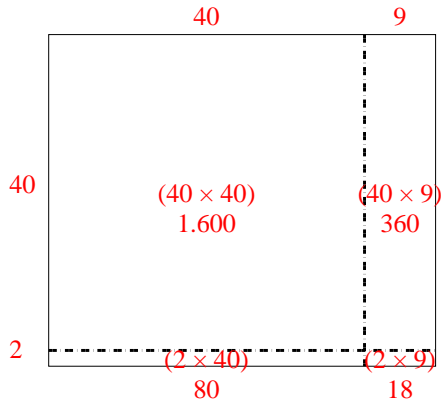
5. _____

6. _____

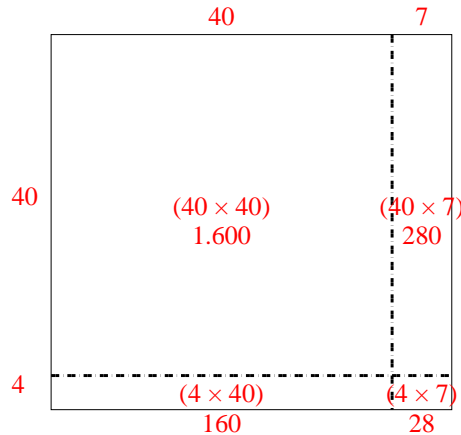


Usa le griglie per risolvere ogni operazione.

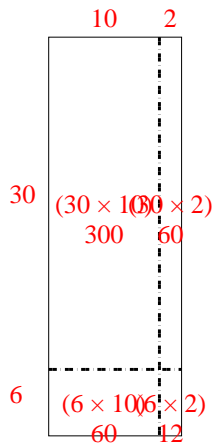
1) $42 \times 49 =$



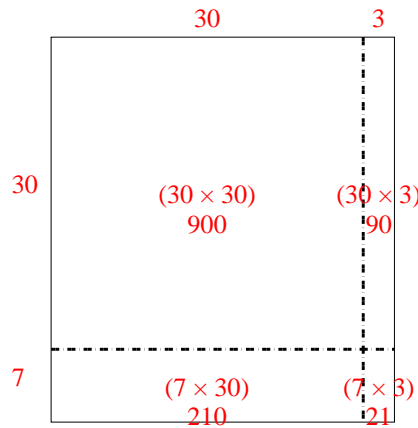
2) $44 \times 47 =$



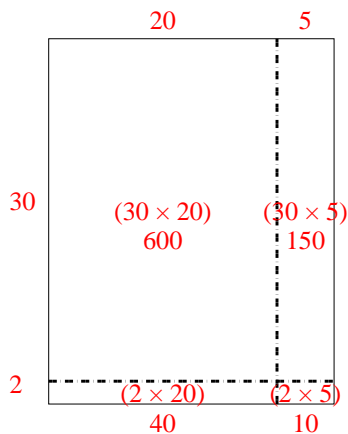
3) $36 \times 12 =$



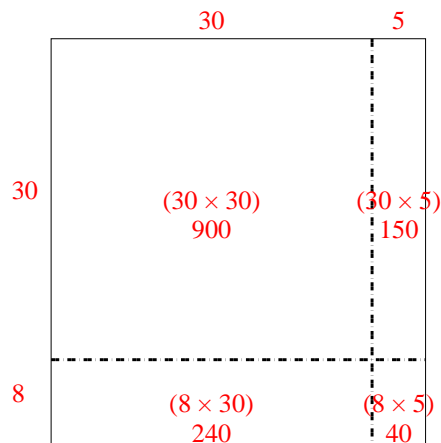
4) $37 \times 33 =$



5) $32 \times 25 =$



6) $38 \times 35 =$



Risposte

1. 2.058

2. 2.068

3. 432

4. 1.221

5. 800

6. 1.330