





Usa le griglie per risolvere ogni operazione.


1)  $64 \times 59 =$




2)  $48 \times 44 =$




3)  $43 \times 45 =$




4)  $43 \times 54 =$



5)  $33 \times 42 =$



6)  $34 \times 24 =$



**Risposte**

1. \_\_\_\_\_

2. \_\_\_\_\_

3. \_\_\_\_\_

4. \_\_\_\_\_

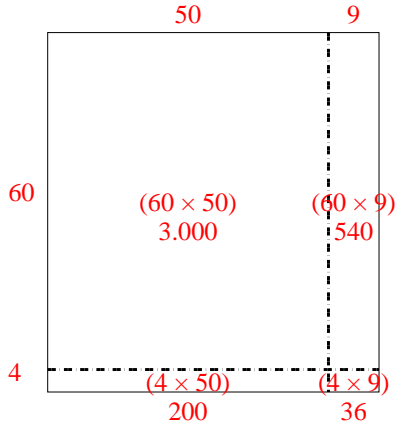
5. \_\_\_\_\_

6. \_\_\_\_\_

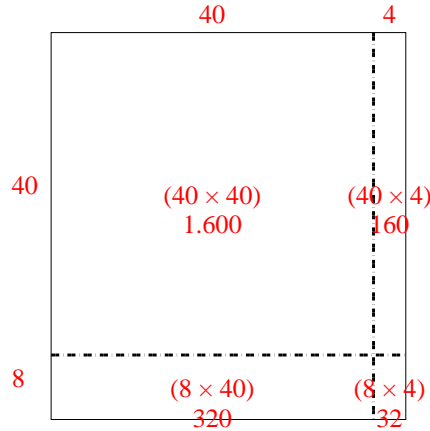


Usa le griglie per risolvere ogni operazione.

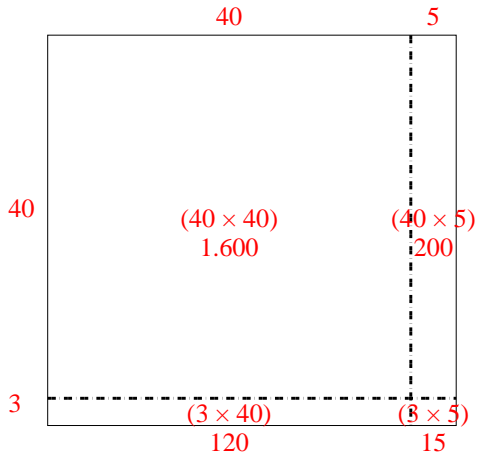
1)  $64 \times 59 =$



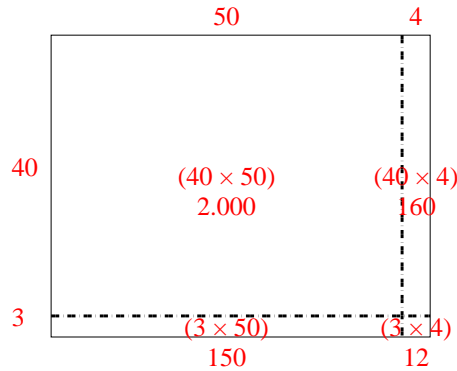
2)  $48 \times 44 =$



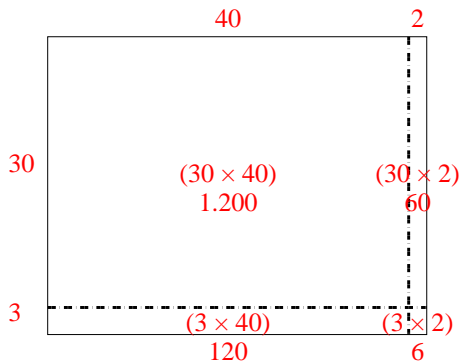
3)  $43 \times 45 =$



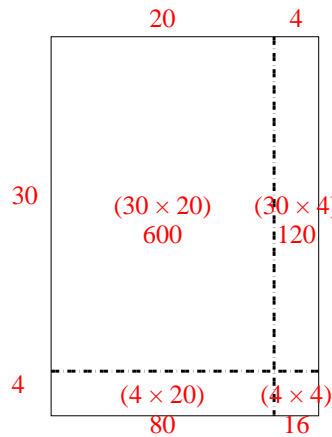
4)  $43 \times 54 =$



5)  $33 \times 42 =$



6)  $34 \times 24 =$



Risposte

1. 3.776

2. 2.112

3. 1.935

4. 2.322

5. 1.386

6. 816