


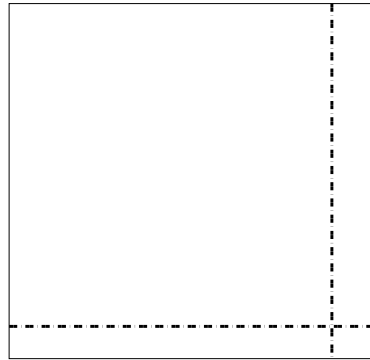


Usa le griglie per risolvere ogni operazione.


1)  $69 \times 47 =$




2)  $44 \times 46 =$




3)  $35 \times 28 =$




4)  $38 \times 13 =$



5)  $32 \times 18 =$



6)  $34 \times 14 =$



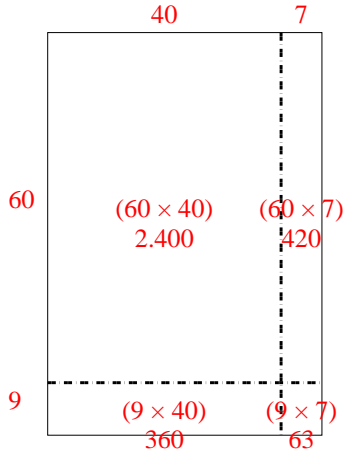
**Risposte**

- 1. \_\_\_\_\_
- 2. \_\_\_\_\_
- 3. \_\_\_\_\_
- 4. \_\_\_\_\_
- 5. \_\_\_\_\_
- 6. \_\_\_\_\_

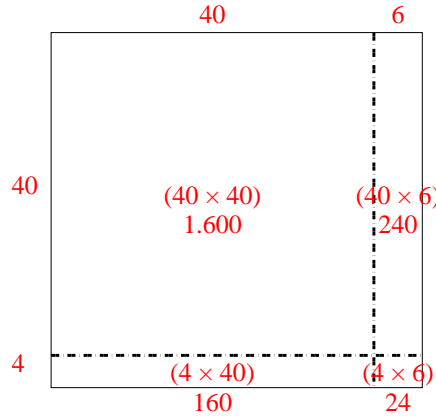


Usa le griglie per risolvere ogni operazione.

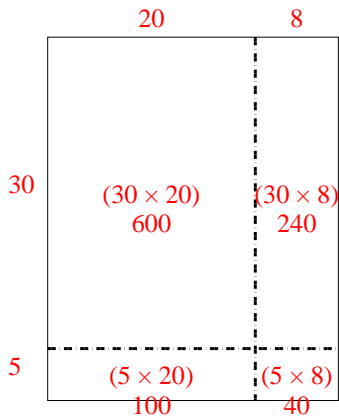
1)  $69 \times 47 =$



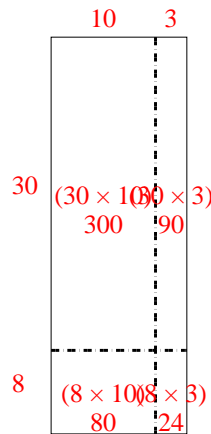
2)  $44 \times 46 =$



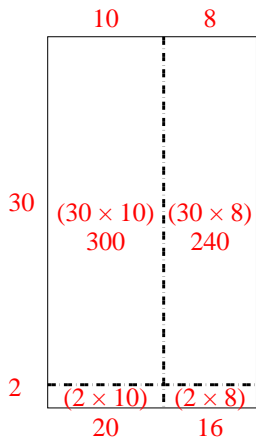
3)  $35 \times 28 =$



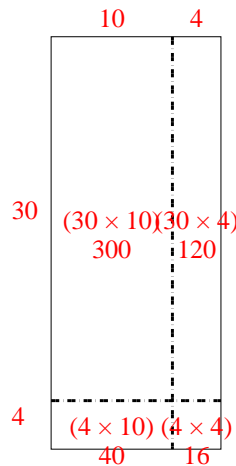
4)  $38 \times 13 =$



5)  $32 \times 18 =$



6)  $34 \times 14 =$



Risposte

1. 3.243

2. 2.024

3. 980

4. 494

5. 576

6. 476