



Usa le griglie fornite per risolvere ogni operazione.

1)  $31 \times 20 =$

2)  $27 \times 20 =$

3)  $20 \times 27 =$

4)  $22 \times 20 =$

5)  $20 \times 23 =$

6)  $20 \times 24 =$

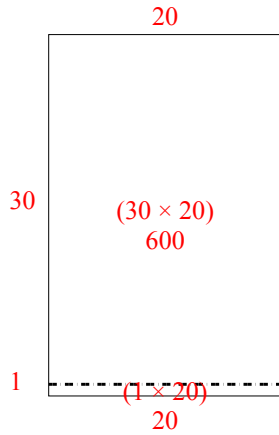
**Risposte**

- 1. \_\_\_\_\_
- 2. \_\_\_\_\_
- 3. \_\_\_\_\_
- 4. \_\_\_\_\_
- 5. \_\_\_\_\_
- 6. \_\_\_\_\_

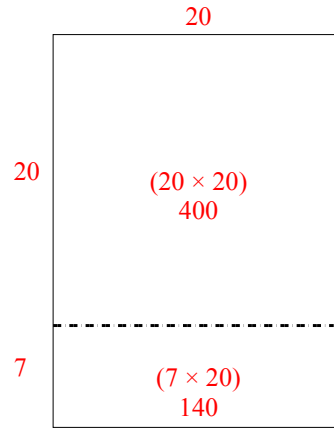


Usa le griglie fornite per risolvere ogni operazione.

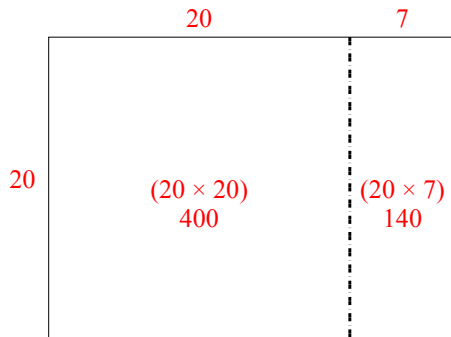
1)  $31 \times 20 =$



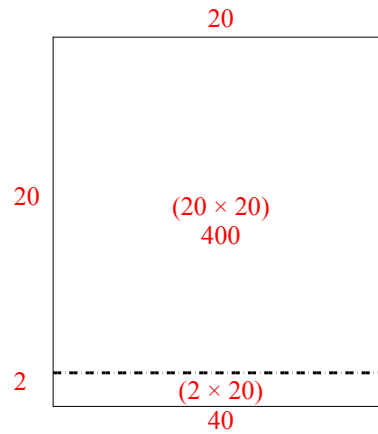
2)  $27 \times 20 =$



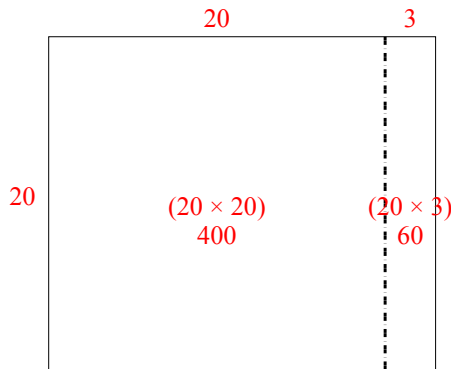
3)  $20 \times 27 =$



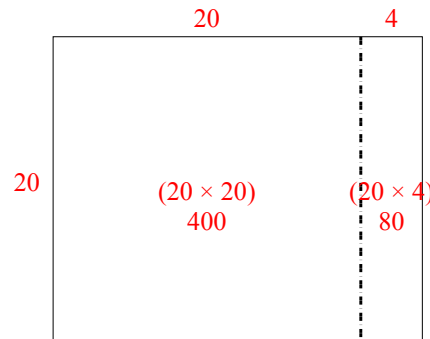
4)  $22 \times 20 =$



5)  $20 \times 23 =$



6)  $20 \times 24 =$



**Risposte**

1. 620
2. 540
3. 540
4. 440
5. 460
6. 480