





Usa le griglie fornite per risolvere ogni operazione.


1) $36 \times 30 =$




2) $20 \times 32 =$




3) $30 \times 23 =$




4) $20 \times 27 =$



5) $20 \times 23 =$



6) $20 \times 26 =$



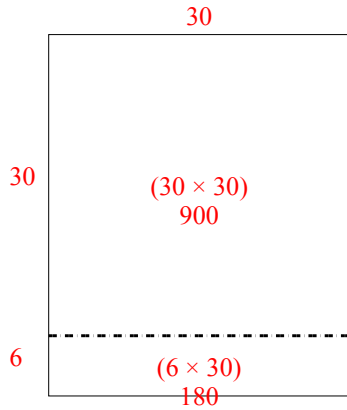
Risposte

1. _____
2. _____
3. _____
4. _____
5. _____
6. _____

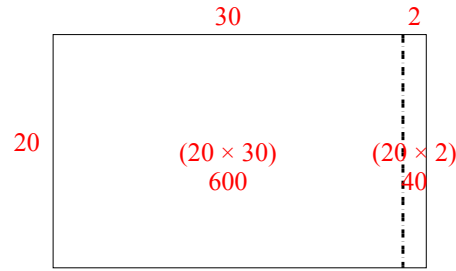


Usa le griglie fornite per risolvere ogni operazione.

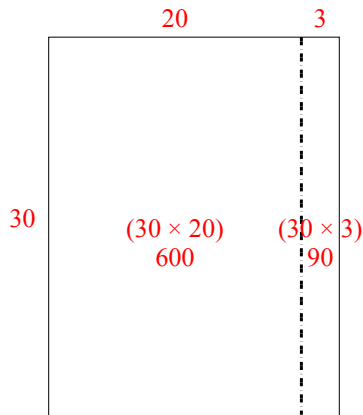
1) $36 \times 30 =$



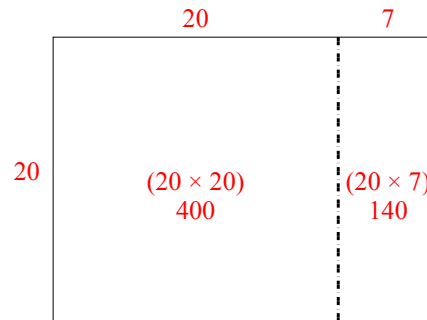
2) $20 \times 32 =$



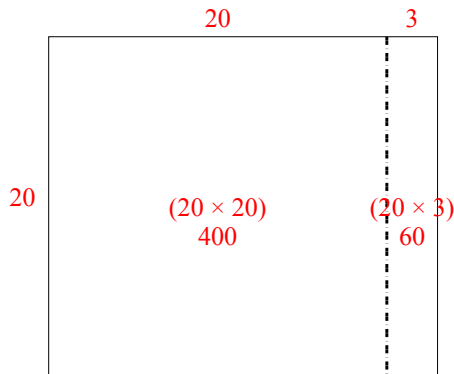
3) $30 \times 23 =$



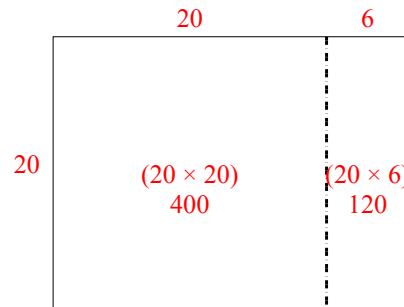
4) $20 \times 27 =$



5) $20 \times 23 =$



6) $20 \times 26 =$



Risposte

1. 1.080
2. 640
3. 690
4. 540
5. 460
6. 520